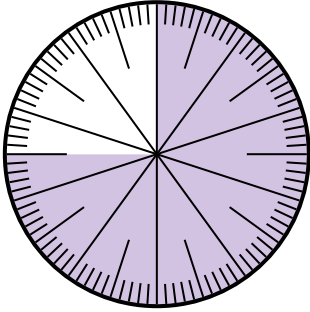




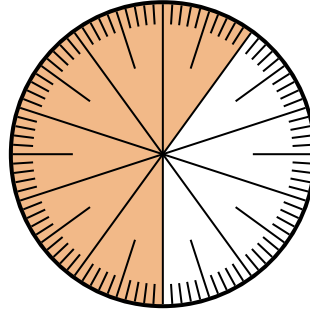
Solve each problem.

- 1) Which choice represents the shaded portion of the number wheel?



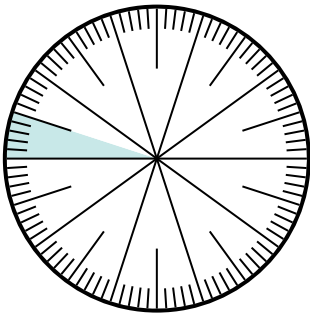
- A.  $\frac{0.75}{100}$       B.  $\frac{75}{100}$   
 C.  $\frac{25}{75}$           D. 2.5

- 2) Which choice represents the shaded portion of the number wheel?



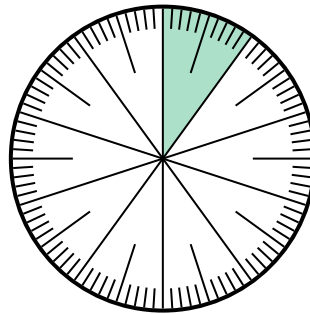
- A.  $\frac{6}{100}$           B. 0.60  
 C. 60                D.  $\frac{0.6}{100}$

- 3) Which choice represents the shaded portion of the number wheel?



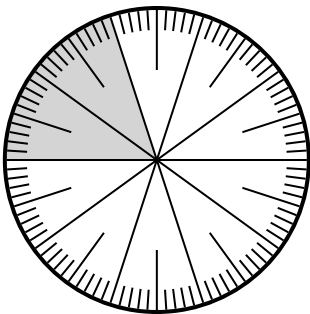
- A.  $\frac{0.5}{100}$           B. 5  
 C. 0.05             D. 0.005

- 4) Which choice represents the un-shaded portion of the number wheel?



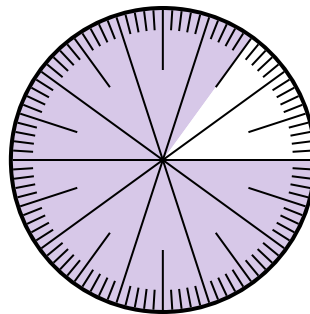
- A.  $\frac{9}{100}$             B.  $\frac{90}{10}$   
 C. 0.9               D. 90

- 5) Which choice represents the shaded portion of the number wheel?



- A.  $\frac{2}{100}$              B.  $\frac{0.2}{100}$   
 C.  $\frac{20}{100}$             D.  $\frac{20}{80}$

- 6) Which choice represents the un-shaded portion of the number wheel?



- A. 0.15              B.  $\frac{85}{15}$   
 C.  $\frac{15}{85}$              D. 0.015

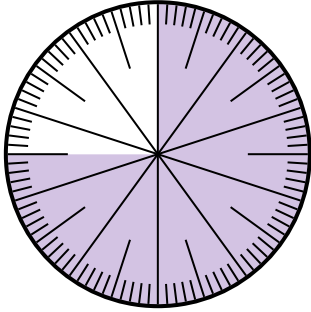
**Answers**

1. \_\_\_\_\_  
 2. \_\_\_\_\_  
 3. \_\_\_\_\_  
 4. \_\_\_\_\_  
 5. \_\_\_\_\_  
 6. \_\_\_\_\_



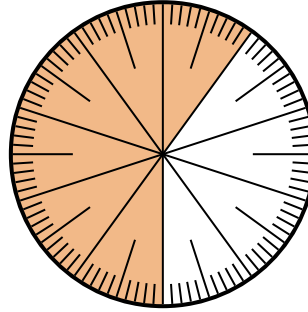
Solve each problem.

- 1) Which choice represents the shaded portion of the number wheel?



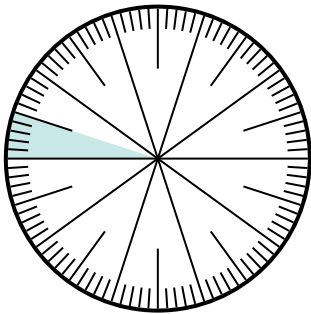
- A.  $\frac{0.75}{100}$       B.  $\frac{75}{100}$   
 C.  $\frac{25}{75}$           D. 2.5

- 2) Which choice represents the shaded portion of the number wheel?



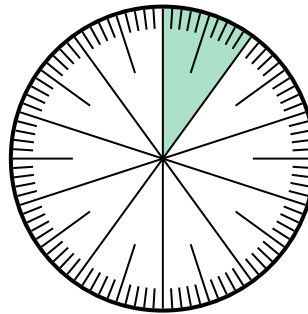
- A.  $\frac{6}{100}$           B. 0.60  
 C. 60                D.  $\frac{0.6}{100}$

- 3) Which choice represents the shaded portion of the number wheel?



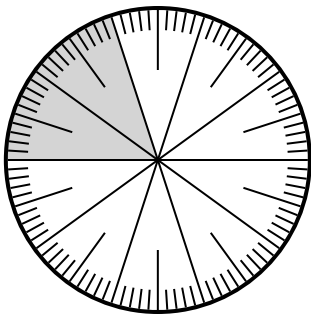
- A.  $\frac{0.5}{100}$           B. 5  
 C. 0.05             D. 0.005

- 4) Which choice represents the un-shaded portion of the number wheel?



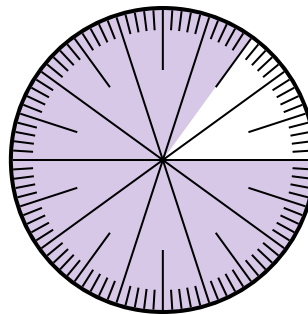
- A.  $\frac{9}{100}$             B.  $\frac{90}{10}$   
 C. 0.9                D. 90

- 5) Which choice represents the shaded portion of the number wheel?



- A.  $\frac{2}{100}$              B.  $\frac{0.2}{100}$   
 C.  $\frac{20}{100}$             D.  $\frac{20}{80}$

- 6) Which choice represents the un-shaded portion of the number wheel?



- A. 0.15              B.  $\frac{85}{15}$   
 C.  $\frac{15}{85}$              D. 0.015

**Answers**

1.     **B**      
 2.     **B**      
 3.     **C**      
 4.     **C**      
 5.     **C**      
 6.     **A**