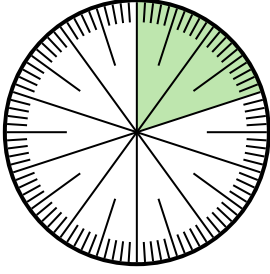
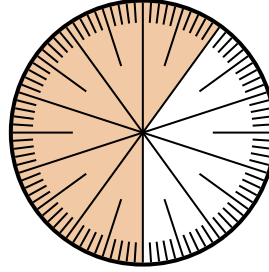


**Solve each problem.**

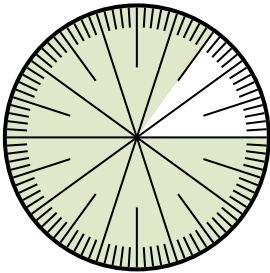
- 1) Express the shaded portion as a decimal of the whole.



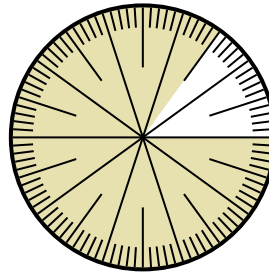
- 2) Express the shaded portion as a fraction of the whole with a 100 as the denominator.




- 3) Express the un-shaded portion as a fraction of the whole with a 100 as the denominator.



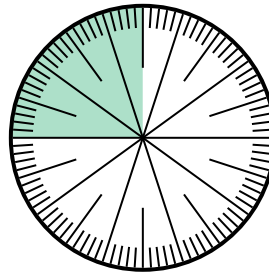
- 4) Express the shaded portion as a fraction of the whole with a 100 as the denominator.



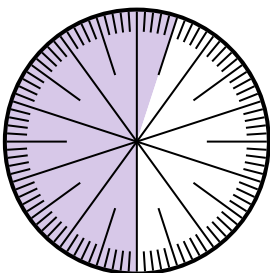
- 5) Express the un-shaded portion as a decimal of the whole.



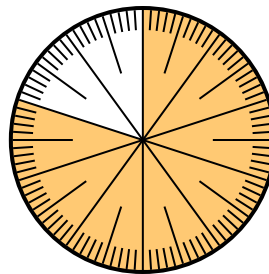
- 6) Express the shaded portion as a decimal of the whole.



- 7) Express the un-shaded portion as a decimal of the whole.



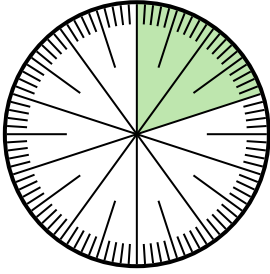
- 8) Express the shaded portion as a fraction of the whole with a 100 as the denominator.

**Answers**

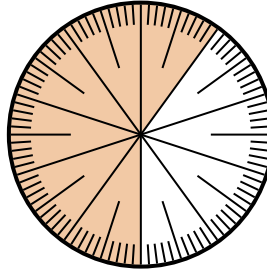
1. _____
2. _____
3. _____
4. _____
5. _____
6. _____
7. _____
8. _____

**Solve each problem.**

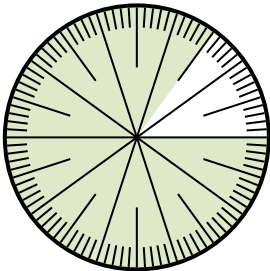
- 1) Express the shaded portion as a decimal of the whole.



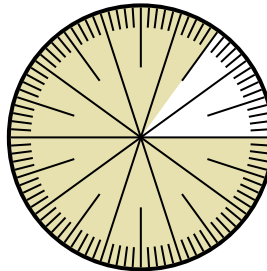
- 2) Express the shaded portion as a fraction of the whole with a 100 as the denominator.




- 3) Express the un-shaded portion as a fraction of the whole with a 100 as the denominator.



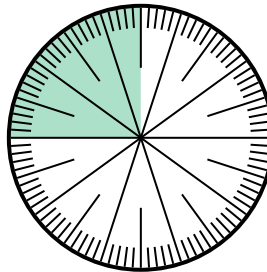
- 4) Express the shaded portion as a fraction of the whole with a 100 as the denominator.



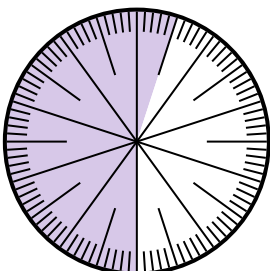
- 5) Express the un-shaded portion as a decimal of the whole.



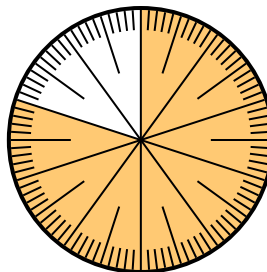
- 6) Express the shaded portion as a decimal of the whole.



- 7) Express the un-shaded portion as a decimal of the whole.



- 8) Express the shaded portion as a fraction of the whole with a 100 as the denominator.

**Answers**

1. 0.80
2. $\frac{60}{100}$
3. $\frac{15}{100}$
4. $\frac{85}{100}$
5. 0.05
6. 0.75
7. 0.55
8. $\frac{80}{100}$