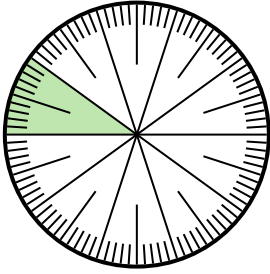
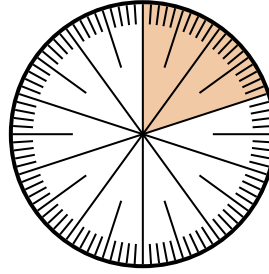


**Solve each problem.**

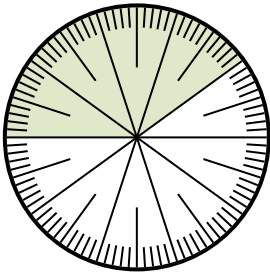
- 1) Express the shaded portion as a fraction of the whole with a 100 as the denominator.



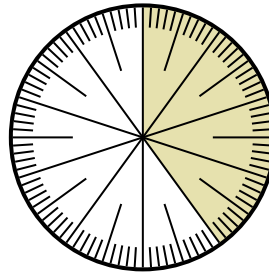
- 2) Express the un-shaded portion as a decimal of the whole.




- 3) Express the un-shaded portion as a fraction of the whole with a 10 as the denominator.



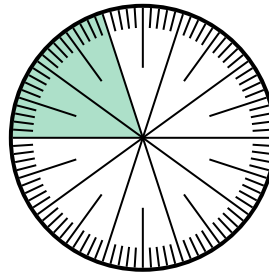
- 4) Express the shaded portion as a fraction of the whole with a 10 as the denominator.



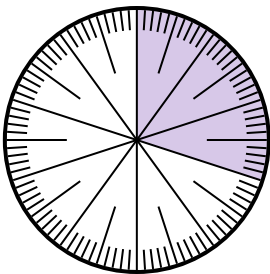
- 5) Express the un-shaded portion as a fraction of the whole with a 100 as the denominator.



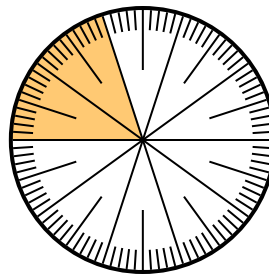
- 6) Express the shaded portion as a decimal of the whole.



- 7) Express the shaded portion as a fraction of the whole with a 100 as the denominator.



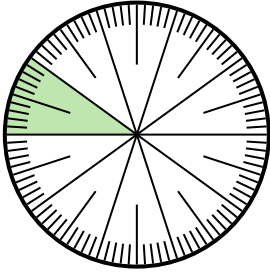
- 8) Express the un-shaded portion as a fraction of the whole with a 100 as the denominator.

**Answers**

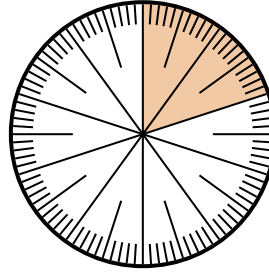
1. _____
2. _____
3. _____
4. _____
5. _____
6. _____
7. _____
8. _____

**Solve each problem.**

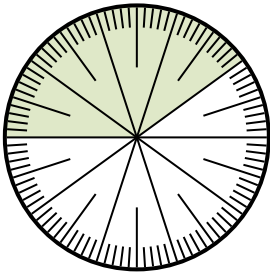
- 1) Express the shaded portion as a fraction of the whole with a 100 as the denominator.



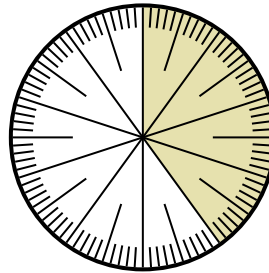
- 2) Express the un-shaded portion as a decimal of the whole.




- 3) Express the un-shaded portion as a fraction of the whole with a 10 as the denominator.



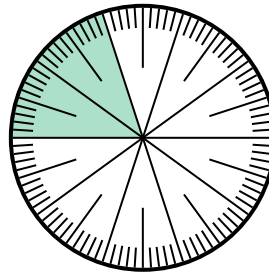
- 4) Express the shaded portion as a fraction of the whole with a 10 as the denominator.



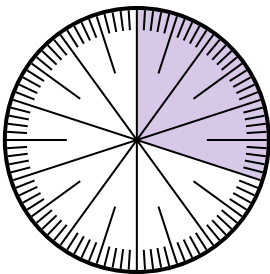
- 5) Express the un-shaded portion as a fraction of the whole with a 100 as the denominator.



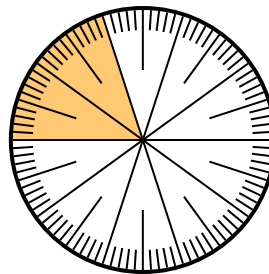
- 6) Express the shaded portion as a decimal of the whole.



- 7) Express the shaded portion as a fraction of the whole with a 100 as the denominator.



- 8) Express the un-shaded portion as a fraction of the whole with a 100 as the denominator.

**Answers**

1. $\frac{10}{100}$

2. 0.20

3. $\frac{4}{10}$

4. $\frac{6}{10}$

5. $\frac{15}{100}$

6. 0.80

7. $\frac{30}{100}$

8. $\frac{80}{100}$