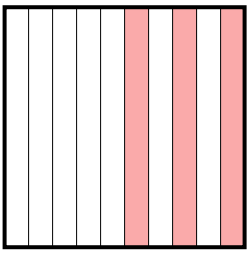




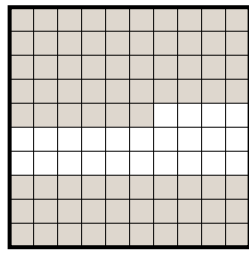
Determine the value written as a fraction , decimal & a percent.

Ex)



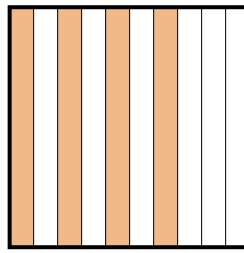
fraction $\frac{3}{10}$
decimal 0.3
percent 30%

1)



fraction _____
decimal _____
percent _____

2)



fraction _____
decimal _____
percent _____

Answers

Ex. $\frac{3}{10}$ 0.3 30%

1. _____

2. _____

3. _____

4. _____

5. _____

6. _____

7. _____

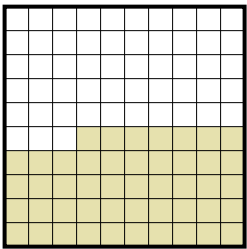
8. _____

9. _____

10. _____

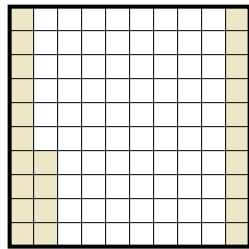
11. _____

3)



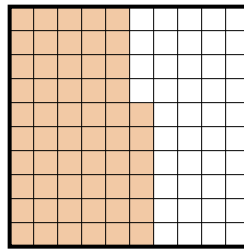
fraction _____
decimal _____
percent _____

4)



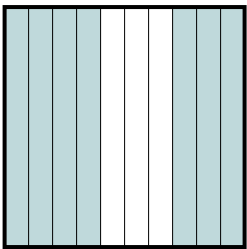
fraction _____
decimal _____
percent _____

5)



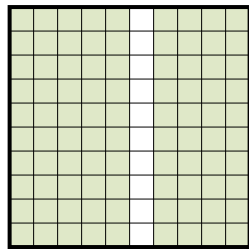
fraction _____
decimal _____
percent _____

6)



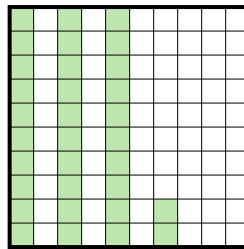
fraction _____
decimal _____
percent _____

7)




fraction _____
decimal _____
percent _____

8)



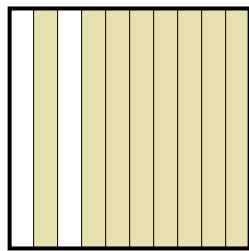
fraction _____
decimal _____
percent _____

9)



fraction _____
decimal _____
percent _____

10)



fraction _____
decimal _____
percent _____

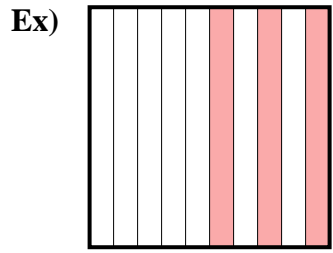
11)



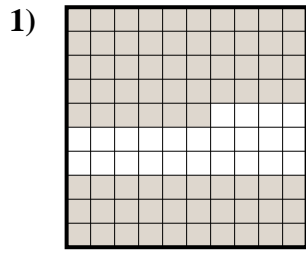
fraction _____
decimal _____
percent _____



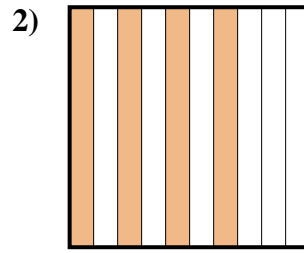
Determine the value written as a fraction, decimal & a percent.



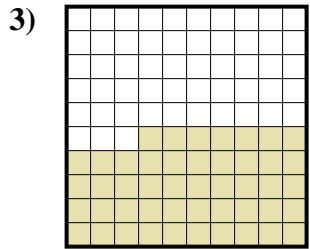
fraction $\frac{3}{10}$
 decimal 0.3
 percent 30%



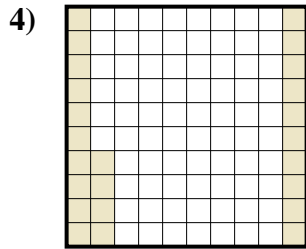
fraction $\frac{76}{100}$
 decimal 0.76
 percent 76%



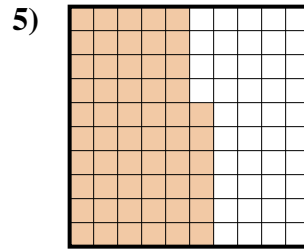
fraction $\frac{4}{10}$
 decimal 0.4
 percent 40%



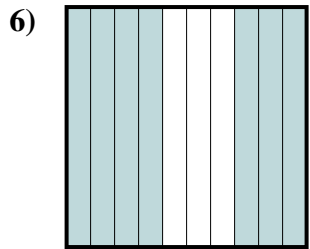
fraction $\frac{47}{100}$
 decimal 0.47
 percent 47%



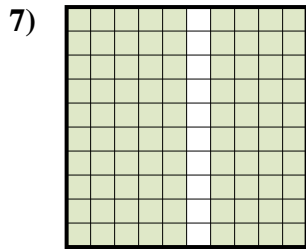
fraction $\frac{24}{100}$
 decimal 0.24
 percent 24%



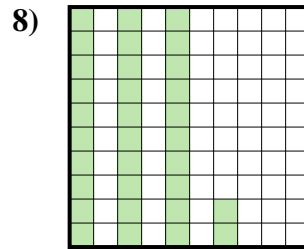
fraction $\frac{56}{100}$
 decimal 0.56
 percent 56%



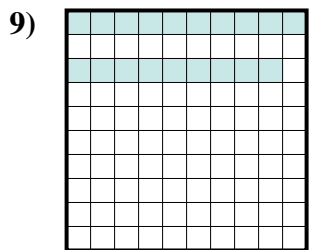
fraction $\frac{7}{10}$
 decimal 0.7
 percent 70%



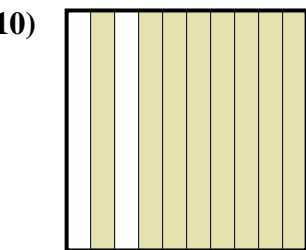
fraction $\frac{90}{100}$
 decimal 0.90
 percent 90%



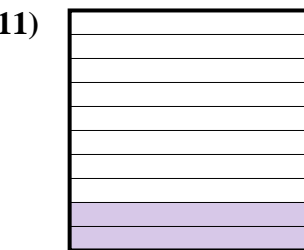
fraction $\frac{32}{100}$
 decimal 0.32
 percent 32%



fraction $\frac{19}{100}$
 decimal 0.19
 percent 19%



fraction $\frac{8}{10}$
 decimal 0.8
 percent 80%



fraction $\frac{2}{10}$
 decimal 0.2
 percent 20%

Answers

Ex. $\frac{3}{10}$ 0.3 30%

1. $\frac{76}{100}$ 0.76 76%

2. $\frac{4}{10}$ 0.4 40%

3. $\frac{47}{100}$ 0.47 47%

4. $\frac{24}{100}$ 0.24 24%

5. $\frac{56}{100}$ 0.56 56%

6. $\frac{7}{10}$ 0.7 70%

7. $\frac{90}{100}$ 0.90 90%

8. $\frac{32}{100}$ 0.32 32%

9. $\frac{19}{100}$ 0.19 19%

10. $\frac{8}{10}$ 0.8 80%

11. $\frac{2}{10}$ 0.2 20%