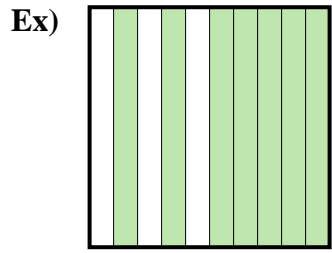
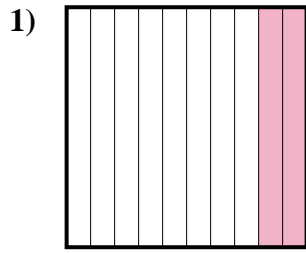




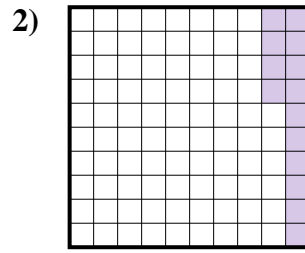
Determine the value written as a fraction, decimal & a percent.



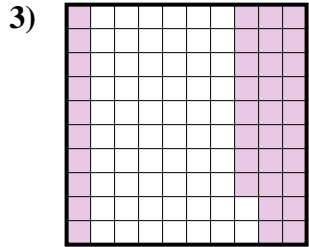
fraction $\frac{7}{10}$
 decimal 0.7
 percent 70%



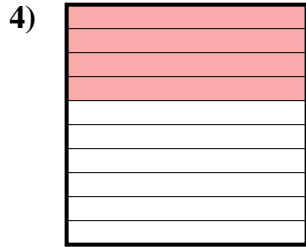
fraction $\frac{2}{10}$
 decimal 0.2
 percent 20%



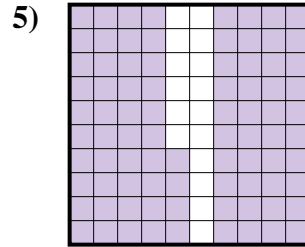
fraction $\frac{14}{100}$
 decimal 0.14
 percent 14%



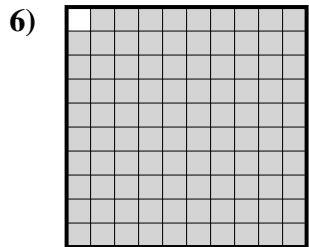
fraction $\frac{38}{100}$
 decimal 0.38
 percent 38%



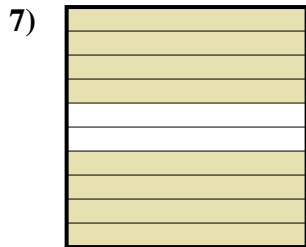
fraction $\frac{4}{10}$
 decimal 0.4
 percent 40%



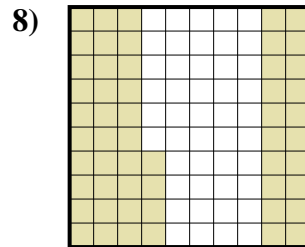
fraction $\frac{84}{100}$
 decimal 0.84
 percent 84%




fraction $\frac{99}{100}$
 decimal 0.99
 percent 99%



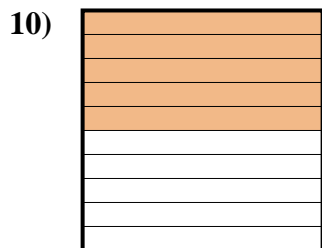
fraction $\frac{8}{10}$
 decimal 0.8
 percent 80%



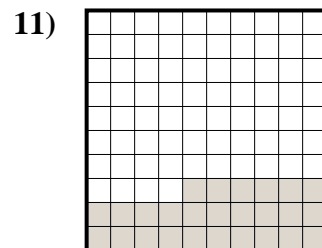
fraction $\frac{54}{100}$
 decimal 0.54
 percent 54%



fraction $\frac{3}{10}$
 decimal 0.3
 percent 30%



fraction $\frac{5}{10}$
 decimal 0.5
 percent 50%



fraction $\frac{26}{100}$
 decimal 0.26
 percent 26%

Answers

Ex. $\frac{7}{10}$ 0.7 70%

1. $\frac{2}{10}$ 0.2 20%

2. $\frac{14}{100}$ 0.14 14%

3. $\frac{38}{100}$ 0.38 38%

4. $\frac{4}{10}$ 0.4 40%

5. $\frac{84}{100}$ 0.84 84%

6. $\frac{99}{100}$ 0.99 99%

7. $\frac{8}{10}$ 0.8 80%

8. $\frac{54}{100}$ 0.54 54%

9. $\frac{3}{10}$ 0.3 30%

10. $\frac{5}{10}$ 0.5 50%

11. $\frac{26}{100}$ 0.26 26%