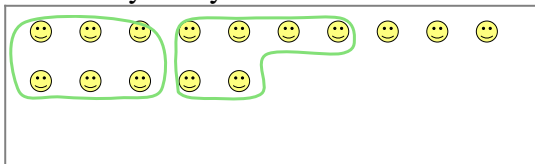





Use the shapes provided to answer the questions.

Ex) There are 15 shapes below. How many groups of 6 can you make with them? How many will you have left over?



1) There are 27 shapes below. How many groups of 5 can you make with them? How many will you have left over?



Answers

Ex. 2

Ex. 3

1a. \_\_\_\_\_

1b. \_\_\_\_\_

2a. \_\_\_\_\_

2b. \_\_\_\_\_

3a. \_\_\_\_\_

3b. \_\_\_\_\_

4a. \_\_\_\_\_

4b. \_\_\_\_\_

5a. \_\_\_\_\_

5b. \_\_\_\_\_

6a. \_\_\_\_\_

6b. \_\_\_\_\_

7a. \_\_\_\_\_

7b. \_\_\_\_\_

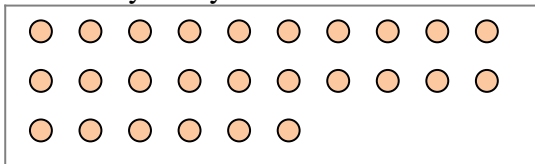
8a. \_\_\_\_\_

8b. \_\_\_\_\_

9a. \_\_\_\_\_

9b. \_\_\_\_\_

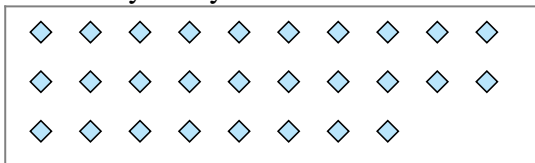
2) There are 26 shapes below. How many groups of 4 can you make with them? How many will you have left over?



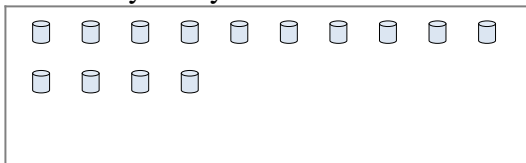
3) There are 23 shapes below. How many groups of 9 can you make with them? How many will you have left over?




4) There are 28 shapes below. How many groups of 2 can you make with them? How many will you have left over?



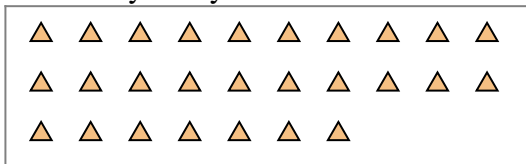
5) There are 14 shapes below. How many groups of 4 can you make with them? How many will you have left over?



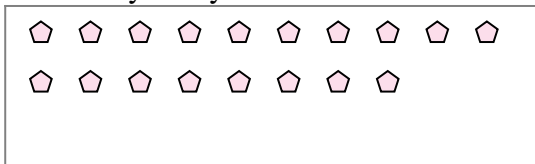
6) There are 18 shapes below. How many groups of 5 can you make with them? How many will you have left over?



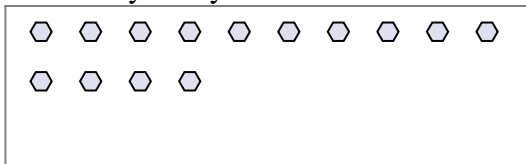
7) There are 27 shapes below. How many groups of 6 can you make with them? How many will you have left over?



8) There are 18 shapes below. How many groups of 3 can you make with them? How many will you have left over?



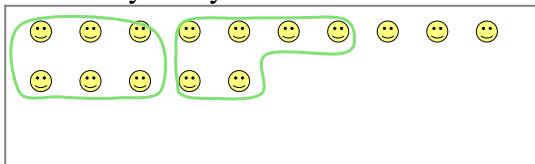
9) There are 14 shapes below. How many groups of 3 can you make with them? How many will you have left over?






Use the shapes provided to answer the questions.

Ex) There are 15 shapes below. How many groups of 6 can you make with them? How many will you have left over?



1) There are 27 shapes below. How many groups of 5 can you make with them? How many will you have left over?



**Answers**

Ex. 2

Ex. 3

1a. 5

1b. 2

2a. 6

2b. 2

3a. 2

3b. 5

4a. 14

4b. 0

5a. 3

5b. 2

6a. 3

6b. 3

7a. 4

7b. 3

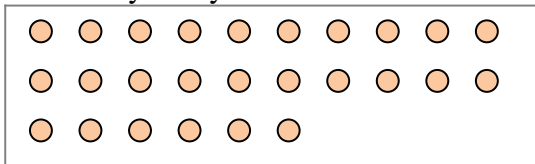
8a. 6

8b. 0

9a. 4

9b. 2

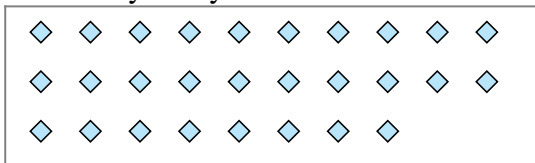
2) There are 26 shapes below. How many groups of 4 can you make with them? How many will you have left over?



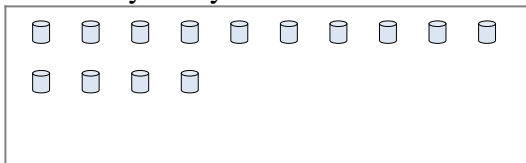
3) There are 23 shapes below. How many groups of 9 can you make with them? How many will you have left over?



4) There are 28 shapes below. How many groups of 2 can you make with them? How many will you have left over?



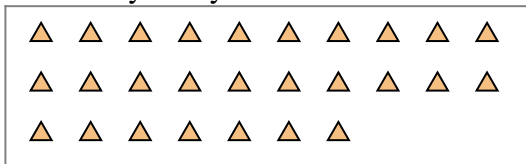
5) There are 14 shapes below. How many groups of 4 can you make with them? How many will you have left over?



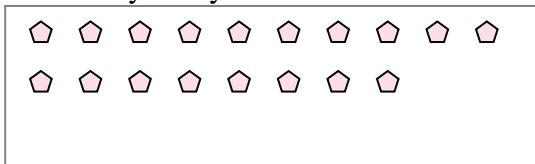
6) There are 18 shapes below. How many groups of 5 can you make with them? How many will you have left over?



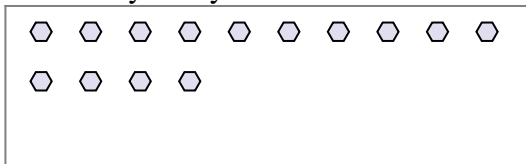
7) There are 27 shapes below. How many groups of 6 can you make with them? How many will you have left over?



8) There are 18 shapes below. How many groups of 3 can you make with them? How many will you have left over?



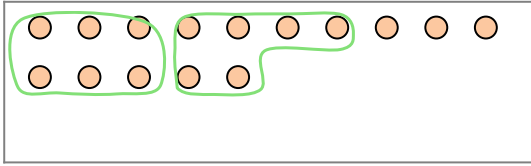
9) There are 14 shapes below. How many groups of 3 can you make with them? How many will you have left over?






Use the shapes provided to answer the questions.

Ex) There are 15 shapes below. How many groups of 6 can you make with them?  
How many will you have left over?



1) There are 18 shapes below. How many groups of 3 can you make with them?  
How many will you have left over?




**Answers**

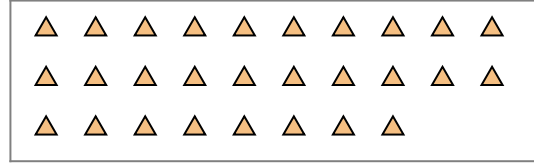
Ex. 2

Ex. 3

2) There are 27 shapes below. How many groups of 2 can you make with them?  
How many will you have left over?



3) There are 28 shapes below. How many groups of 6 can you make with them?  
How many will you have left over?



1a. \_\_\_\_\_

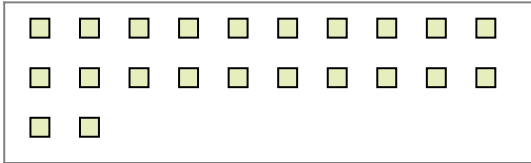
1b. \_\_\_\_\_

2a. \_\_\_\_\_

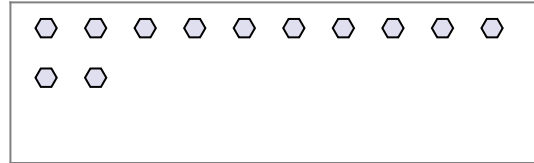
2b. \_\_\_\_\_

3a. \_\_\_\_\_

4) There are 22 shapes below. How many groups of 7 can you make with them?  
How many will you have left over?



5) There are 12 shapes below. How many groups of 7 can you make with them?  
How many will you have left over?



3b. \_\_\_\_\_

4a. \_\_\_\_\_

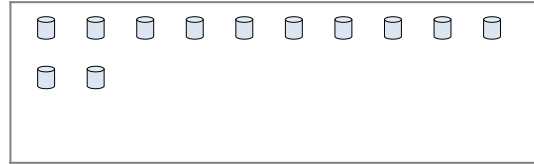
4b. \_\_\_\_\_

5a. \_\_\_\_\_

6) There are 18 shapes below. How many groups of 3 can you make with them?  
How many will you have left over?



7) There are 12 shapes below. How many groups of 8 can you make with them?  
How many will you have left over?




5b. \_\_\_\_\_

6a. \_\_\_\_\_

6b. \_\_\_\_\_

7a. \_\_\_\_\_

8) There are 13 shapes below. How many groups of 9 can you make with them?  
How many will you have left over?



9) There are 22 shapes below. How many groups of 3 can you make with them?  
How many will you have left over?



7b. \_\_\_\_\_

8a. \_\_\_\_\_

8b. \_\_\_\_\_

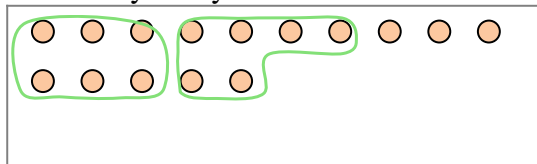
9a. \_\_\_\_\_

9b. \_\_\_\_\_




Use the shapes provided to answer the questions.

Ex) There are 15 shapes below. How many groups of 6 can you make with them?  
How many will you have left over?



1) There are 18 shapes below. How many groups of 3 can you make with them?  
How many will you have left over?



**Answers**

Ex. 2

Ex. 3

1a. 6

1b. 0

2a. 13

2b. 1

3a. 4

3b. 4

4a. 3

4b. 1

5a. 1

5b. 5

6a. 6

6b. 0

7a. 1

7b. 4


8a. 1

8b. 4


9a. 7

9b. 1

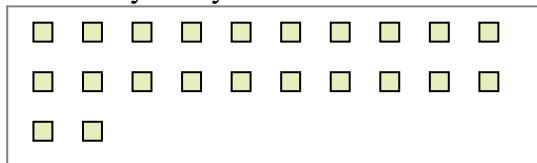
2) There are 27 shapes below. How many groups of 2 can you make with them?  
How many will you have left over?



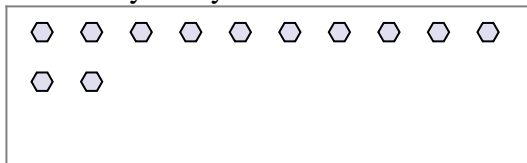
3) There are 28 shapes below. How many groups of 6 can you make with them?  
How many will you have left over?




4) There are 22 shapes below. How many groups of 7 can you make with them?  
How many will you have left over?



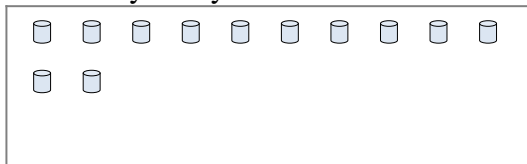
5) There are 12 shapes below. How many groups of 7 can you make with them?  
How many will you have left over?




6) There are 18 shapes below. How many groups of 3 can you make with them?  
How many will you have left over?



7) There are 12 shapes below. How many groups of 8 can you make with them?  
How many will you have left over?



8) There are 13 shapes below. How many groups of 9 can you make with them?  
How many will you have left over?



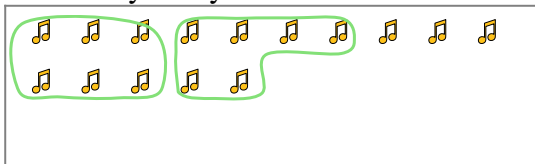
9) There are 22 shapes below. How many groups of 3 can you make with them?  
How many will you have left over?



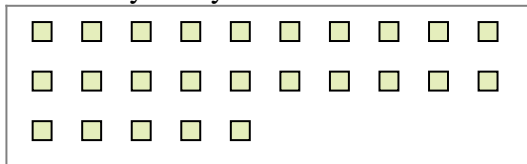


Use the shapes provided to answer the questions.

Ex) There are 15 shapes below. How many groups of 6 can you make with them?  
How many will you have left over?



1) There are 25 shapes below. How many groups of 4 can you make with them?  
How many will you have left over?



**Answers**

Ex. 2

Ex. 3

1a. \_\_\_\_\_

1b. \_\_\_\_\_

2a. \_\_\_\_\_

2b. \_\_\_\_\_

3a. \_\_\_\_\_

3b. \_\_\_\_\_

4a. \_\_\_\_\_

4b. \_\_\_\_\_

5a. \_\_\_\_\_

5b. \_\_\_\_\_

6a. \_\_\_\_\_

6b. \_\_\_\_\_

7a. \_\_\_\_\_

7b. \_\_\_\_\_

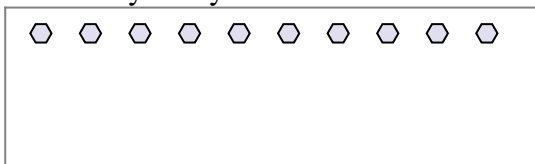
8a. \_\_\_\_\_

8b. \_\_\_\_\_

9a. \_\_\_\_\_

9b. \_\_\_\_\_


2) There are 10 shapes below. How many groups of 4 can you make with them?  
How many will you have left over?



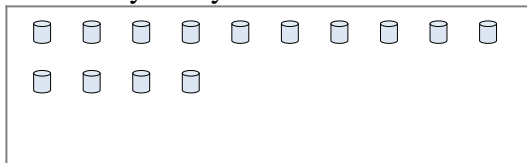
3) There are 16 shapes below. How many groups of 4 can you make with them?  
How many will you have left over?




4) There are 15 shapes below. How many groups of 3 can you make with them?  
How many will you have left over?



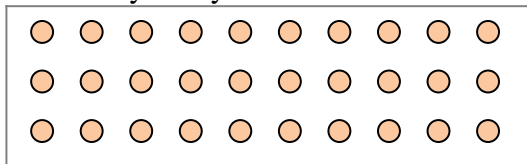
5) There are 14 shapes below. How many groups of 5 can you make with them?  
How many will you have left over?



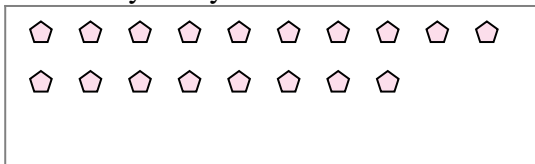
6) There are 23 shapes below. How many groups of 6 can you make with them?  
How many will you have left over?



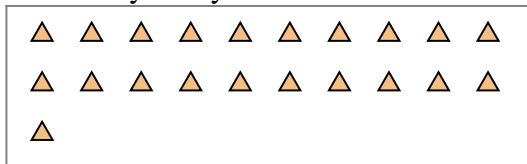
7) There are 30 shapes below. How many groups of 2 can you make with them?  
How many will you have left over?



8) There are 18 shapes below. How many groups of 8 can you make with them?  
How many will you have left over?



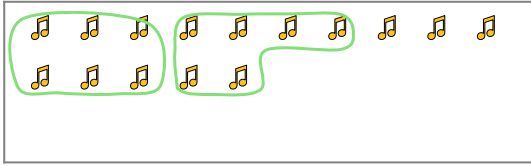
9) There are 21 shapes below. How many groups of 2 can you make with them?  
How many will you have left over?



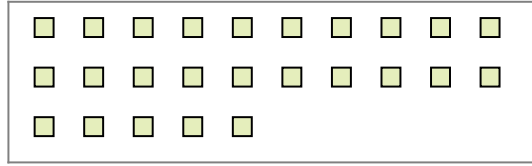


Use the shapes provided to answer the questions.

Ex) There are 15 shapes below. How many groups of 6 can you make with them? How many will you have left over?



1) There are 25 shapes below. How many groups of 4 can you make with them? How many will you have left over?



**Answers**

Ex. 2

Ex. 3

1a. 6

1b. 1

2a. 2

2b. 2

3a. 4

3b. 0

4a. 5

4b. 0

5a. 2

5b. 4

6a. 3

6b. 5

7a. 15

7b. 0

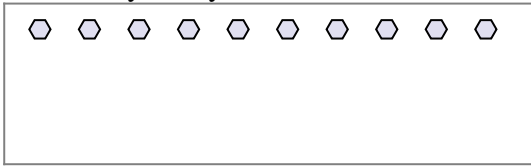
8a. 2

8b. 2

9a. 10

9b. 1

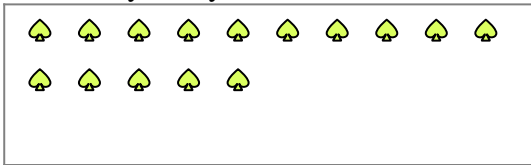
2) There are 10 shapes below. How many groups of 4 can you make with them? How many will you have left over?



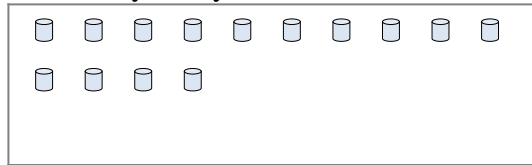
3) There are 16 shapes below. How many groups of 4 can you make with them? How many will you have left over?




4) There are 15 shapes below. How many groups of 3 can you make with them? How many will you have left over?



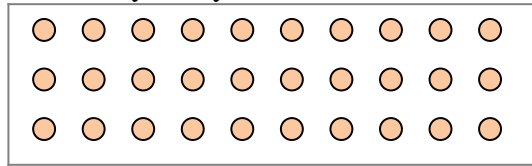
5) There are 14 shapes below. How many groups of 5 can you make with them? How many will you have left over?



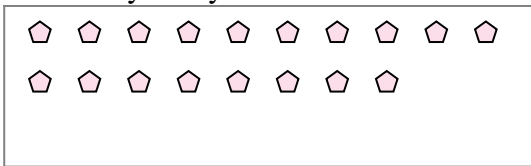
6) There are 23 shapes below. How many groups of 6 can you make with them? How many will you have left over?



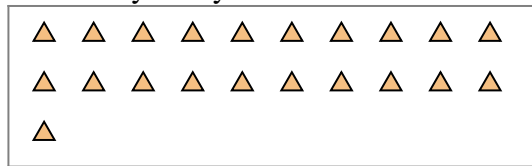
7) There are 30 shapes below. How many groups of 2 can you make with them? How many will you have left over?



8) There are 18 shapes below. How many groups of 8 can you make with them? How many will you have left over?



9) There are 21 shapes below. How many groups of 2 can you make with them? How many will you have left over?





Use the shapes provided to answer the questions.

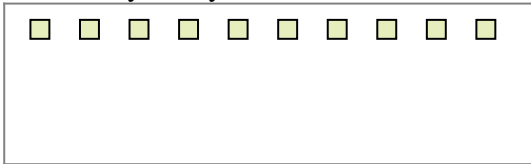
Ex) There are 15 shapes below. How many groups of 6 can you make with them? How many will you have left over?



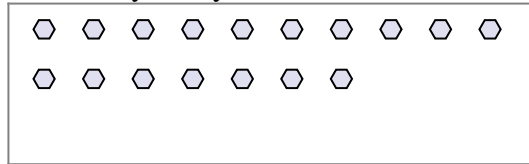
1) There are 10 shapes below. How many groups of 5 can you make with them? How many will you have left over?




2) There are 10 shapes below. How many groups of 2 can you make with them? How many will you have left over?



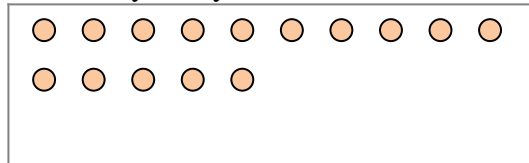
3) There are 17 shapes below. How many groups of 6 can you make with them? How many will you have left over?




4) There are 20 shapes below. How many groups of 7 can you make with them? How many will you have left over?



5) There are 15 shapes below. How many groups of 4 can you make with them? How many will you have left over?



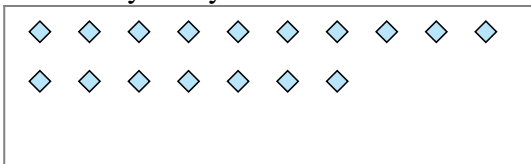
6) There are 22 shapes below. How many groups of 4 can you make with them? How many will you have left over?



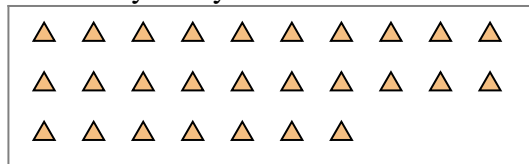
7) There are 13 shapes below. How many groups of 4 can you make with them? How many will you have left over?



8) There are 17 shapes below. How many groups of 6 can you make with them? How many will you have left over?



9) There are 27 shapes below. How many groups of 9 can you make with them? How many will you have left over?



**Answers**

Ex. 2

Ex. 3

1a. \_\_\_\_\_

1b. \_\_\_\_\_

2a. \_\_\_\_\_

2b. \_\_\_\_\_

3a. \_\_\_\_\_

3b. \_\_\_\_\_

4a. \_\_\_\_\_

4b. \_\_\_\_\_

5a. \_\_\_\_\_

5b. \_\_\_\_\_

6a. \_\_\_\_\_

6b. \_\_\_\_\_

7a. \_\_\_\_\_

7b. \_\_\_\_\_

8a. \_\_\_\_\_

8b. \_\_\_\_\_

9a. \_\_\_\_\_

9b. \_\_\_\_\_



Use the shapes provided to answer the questions.

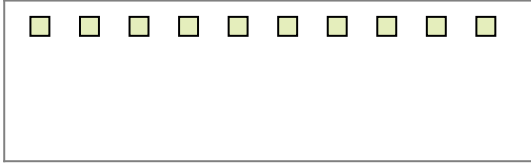
Ex) There are 15 shapes below. How many groups of 6 can you make with them?  
How many will you have left over?



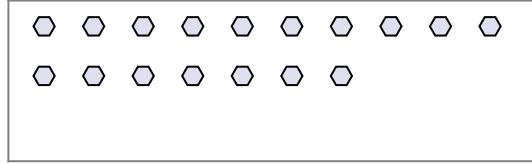
1) There are 10 shapes below. How many groups of 5 can you make with them?  
How many will you have left over?



2) There are 10 shapes below. How many groups of 2 can you make with them?  
How many will you have left over?



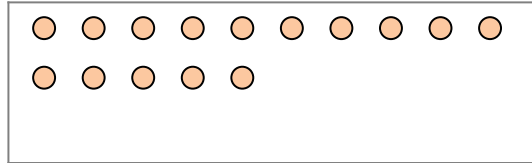
3) There are 17 shapes below. How many groups of 6 can you make with them?  
How many will you have left over?




4) There are 20 shapes below. How many groups of 7 can you make with them?  
How many will you have left over?




5) There are 15 shapes below. How many groups of 4 can you make with them?  
How many will you have left over?



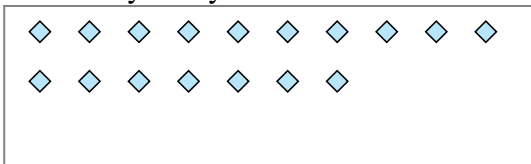
6) There are 22 shapes below. How many groups of 4 can you make with them?  
How many will you have left over?



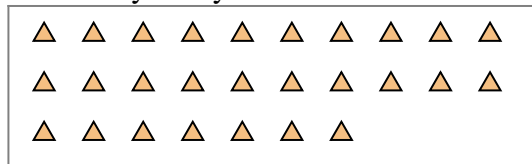
7) There are 13 shapes below. How many groups of 4 can you make with them?  
How many will you have left over?



8) There are 17 shapes below. How many groups of 6 can you make with them?  
How many will you have left over?



9) There are 27 shapes below. How many groups of 9 can you make with them?  
How many will you have left over?



**Answers**

Ex. 2

Ex. 3

1a. 2

1b. 0

2a. 5

2b. 0

3a. 2

3b. 5

4a. 2

4b. 6

5a. 3

5b. 3

6a. 5

6b. 2

7a. 3

7b. 1

8a. 2

8b. 5

9a. 3

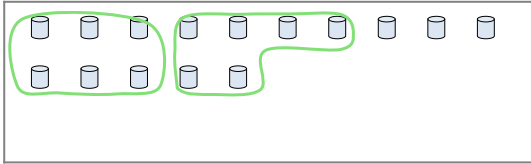
9b. 0



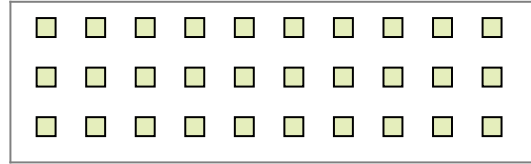


Use the shapes provided to answer the questions.

Ex) There are 15 shapes below. How many groups of 6 can you make with them? How many will you have left over?



1) There are 30 shapes below. How many groups of 6 can you make with them? How many will you have left over?




**Answers**

Ex. 2

Ex. 3

2) There are 10 shapes below. How many groups of 8 can you make with them? How many will you have left over?




3) There are 15 shapes below. How many groups of 3 can you make with them? How many will you have left over?




1a. \_\_\_\_\_

1b. \_\_\_\_\_

4) There are 20 shapes below. How many groups of 8 can you make with them? How many will you have left over?



5) There are 17 shapes below. How many groups of 7 can you make with them? How many will you have left over?



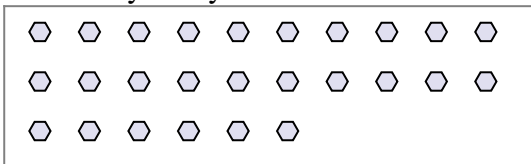
2a. \_\_\_\_\_

2b. \_\_\_\_\_

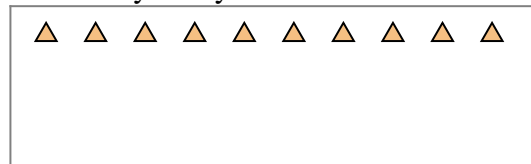
3a. \_\_\_\_\_

3b. \_\_\_\_\_

6) There are 26 shapes below. How many groups of 9 can you make with them? How many will you have left over?



7) There are 10 shapes below. How many groups of 8 can you make with them? How many will you have left over?



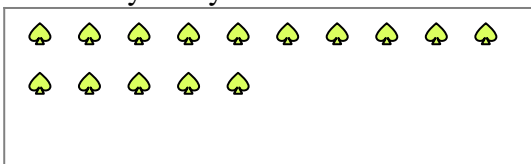
4a. \_\_\_\_\_

4b. \_\_\_\_\_

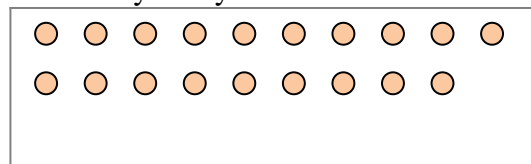
5a. \_\_\_\_\_

5b. \_\_\_\_\_

8) There are 15 shapes below. How many groups of 4 can you make with them? How many will you have left over?



9) There are 19 shapes below. How many groups of 5 can you make with them? How many will you have left over?



6a. \_\_\_\_\_

6b. \_\_\_\_\_

7a. \_\_\_\_\_

7b. \_\_\_\_\_

8a. \_\_\_\_\_

8b. \_\_\_\_\_

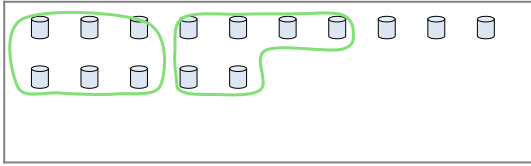
9a. \_\_\_\_\_

9b. \_\_\_\_\_

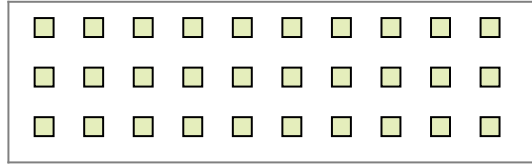


Use the shapes provided to answer the questions.

Ex) There are 15 shapes below. How many groups of 6 can you make with them? How many will you have left over?



1) There are 30 shapes below. How many groups of 6 can you make with them? How many will you have left over?




2) There are 10 shapes below. How many groups of 8 can you make with them? How many will you have left over?




3) There are 15 shapes below. How many groups of 3 can you make with them? How many will you have left over?



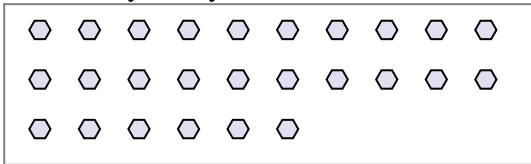
4) There are 20 shapes below. How many groups of 8 can you make with them? How many will you have left over?



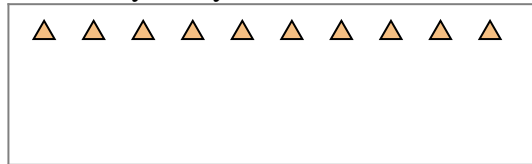
5) There are 17 shapes below. How many groups of 7 can you make with them? How many will you have left over?



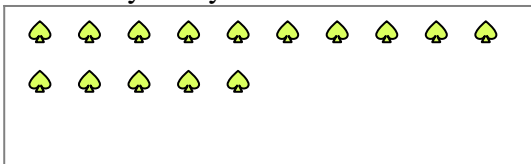
6) There are 26 shapes below. How many groups of 9 can you make with them? How many will you have left over?



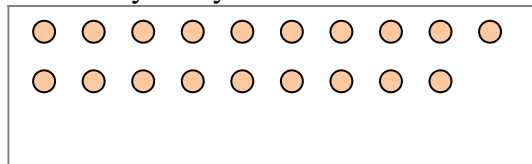
7) There are 10 shapes below. How many groups of 8 can you make with them? How many will you have left over?



8) There are 15 shapes below. How many groups of 4 can you make with them? How many will you have left over?



9) There are 19 shapes below. How many groups of 5 can you make with them? How many will you have left over?



**Answers**

Ex. 2

Ex. 3

1a. 5

1b. 0

2a. 1

2b. 2

3a. 5

3b. 0

4a. 2

4b. 4

5a. 2

5b. 3

6a. 2

6b. 8

7a. 1

7b. 2

8a. 3

8b. 3

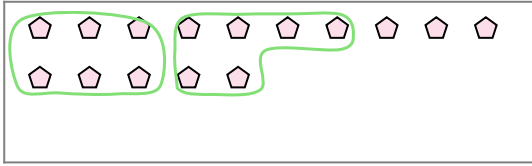
9a. 3

9b. 4

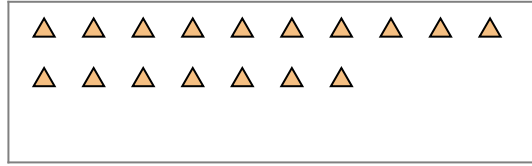


Use the shapes provided to answer the questions.


Ex) There are 15 shapes below. How many groups of 6 can you make with them?  
How many will you have left over?




1) There are 17 shapes below. How many groups of 5 can you make with them?  
How many will you have left over?



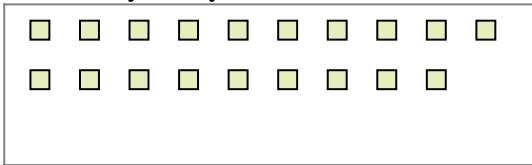
2) There are 16 shapes below. How many groups of 6 can you make with them?  
How many will you have left over?



3) There are 19 shapes below. How many groups of 3 can you make with them?  
How many will you have left over?




4) There are 19 shapes below. How many groups of 9 can you make with them?  
How many will you have left over?



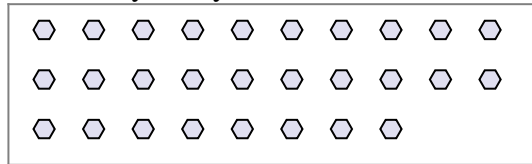
5) There are 19 shapes below. How many groups of 6 can you make with them?  
How many will you have left over?



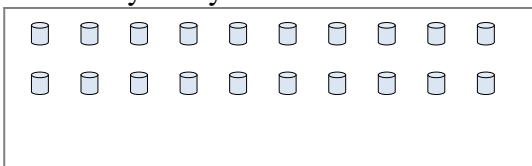
6) There are 10 shapes below. How many groups of 4 can you make with them?  
How many will you have left over?



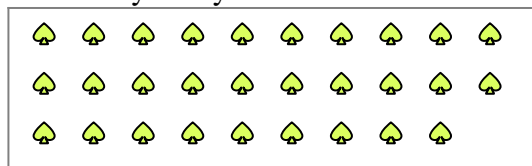
7) There are 28 shapes below. How many groups of 4 can you make with them?  
How many will you have left over?



8) There are 20 shapes below. How many groups of 5 can you make with them?  
How many will you have left over?



9) There are 29 shapes below. How many groups of 9 can you make with them?  
How many will you have left over?



**Answers**

Ex. 2

Ex. 3

1a. \_\_\_\_\_

1b. \_\_\_\_\_

2a. \_\_\_\_\_

2b. \_\_\_\_\_

3a. \_\_\_\_\_

3b. \_\_\_\_\_

4a. \_\_\_\_\_

4b. \_\_\_\_\_

5a. \_\_\_\_\_

5b. \_\_\_\_\_

6a. \_\_\_\_\_

6b. \_\_\_\_\_

7a. \_\_\_\_\_

7b. \_\_\_\_\_

8a. \_\_\_\_\_

8b. \_\_\_\_\_

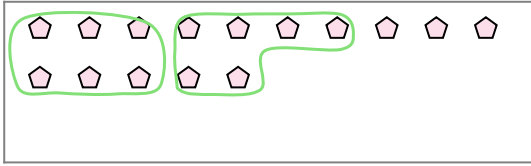
9a. \_\_\_\_\_

9b. \_\_\_\_\_

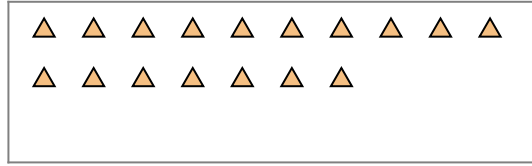


Use the shapes provided to answer the questions.

Ex) There are 15 shapes below. How many groups of 6 can you make with them?  
How many will you have left over?




1) There are 17 shapes below. How many groups of 5 can you make with them?  
How many will you have left over?



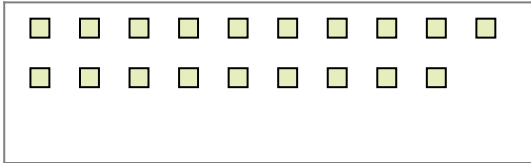
2) There are 16 shapes below. How many groups of 6 can you make with them?  
How many will you have left over?



3) There are 19 shapes below. How many groups of 3 can you make with them?  
How many will you have left over?




4) There are 19 shapes below. How many groups of 9 can you make with them?  
How many will you have left over?



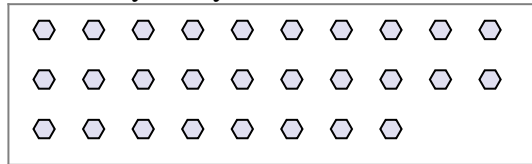
5) There are 19 shapes below. How many groups of 6 can you make with them?  
How many will you have left over?



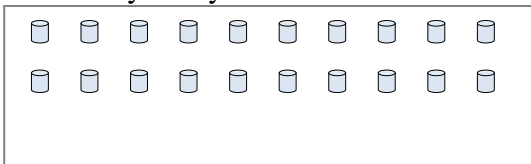
6) There are 10 shapes below. How many groups of 4 can you make with them?  
How many will you have left over?



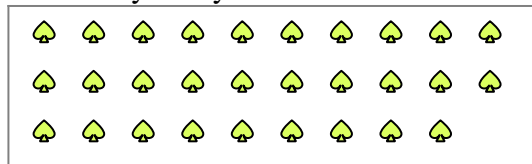
7) There are 28 shapes below. How many groups of 4 can you make with them?  
How many will you have left over?



8) There are 20 shapes below. How many groups of 5 can you make with them?  
How many will you have left over?



9) There are 29 shapes below. How many groups of 9 can you make with them?  
How many will you have left over?



**Answers**

Ex. 2

Ex. 3

1a. 3

1b. 2

2a. 2

2b. 4

3a. 6

3b. 1

4a. 2

4b. 1

5a. 3

5b. 1

6a. 2

6b. 2

7a. 7

7b. 0

8a. 4

8b. 0

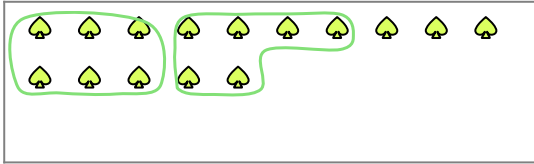
9a. 3

9b. 2

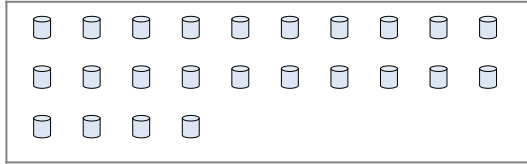


Use the shapes provided to answer the questions.

Ex) There are 15 shapes below. How many groups of 6 can you make with them?  
How many will you have left over?



1) There are 24 shapes below. How many groups of 9 can you make with them?  
How many will you have left over?

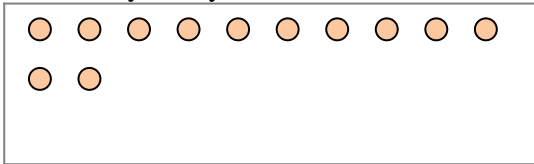


**Answers**


Ex. 2

Ex. 3

2) There are 12 shapes below. How many groups of 8 can you make with them?  
How many will you have left over?



3) There are 20 shapes below. How many groups of 5 can you make with them?  
How many will you have left over?



1a. \_\_\_\_\_

1b. \_\_\_\_\_

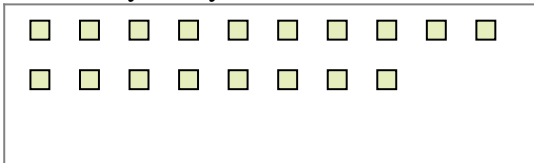
2a. \_\_\_\_\_

2b. \_\_\_\_\_


3a. \_\_\_\_\_

3b. \_\_\_\_\_

4) There are 18 shapes below. How many groups of 8 can you make with them?  
How many will you have left over?



5) There are 19 shapes below. How many groups of 9 can you make with them?  
How many will you have left over?



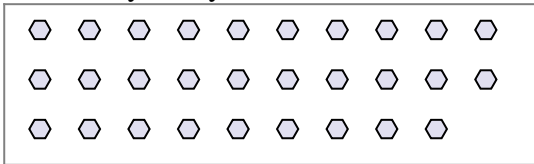
4a. \_\_\_\_\_

4b. \_\_\_\_\_

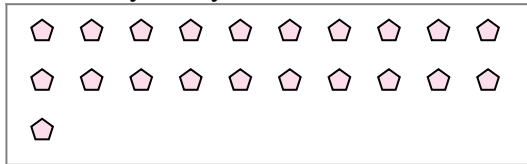
5a. \_\_\_\_\_

5b. \_\_\_\_\_

6) There are 29 shapes below. How many groups of 6 can you make with them?  
How many will you have left over?



7) There are 21 shapes below. How many groups of 5 can you make with them?  
How many will you have left over?



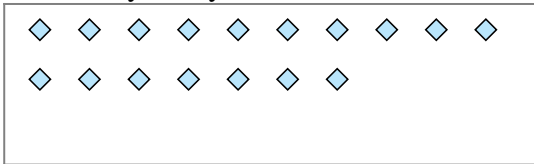
6a. \_\_\_\_\_

6b. \_\_\_\_\_

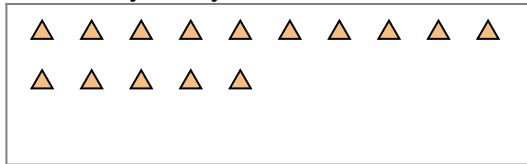
7a. \_\_\_\_\_

7b. \_\_\_\_\_

8) There are 17 shapes below. How many groups of 7 can you make with them?  
How many will you have left over?



9) There are 15 shapes below. How many groups of 3 can you make with them?  
How many will you have left over?



8a. \_\_\_\_\_

8b. \_\_\_\_\_

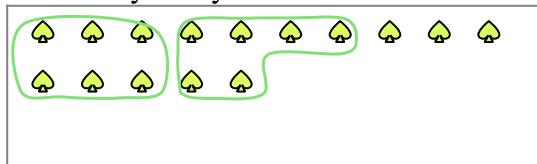
9a. \_\_\_\_\_

9b. \_\_\_\_\_

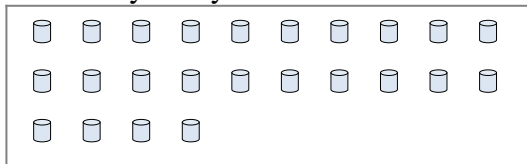


Use the shapes provided to answer the questions.

Ex) There are 15 shapes below. How many groups of 6 can you make with them? How many will you have left over?



1) There are 24 shapes below. How many groups of 9 can you make with them? How many will you have left over?



**Answers**

Ex. 2

Ex. 3

1a. 2

1b. 6

2a. 1

2b. 4

3a. 4

3b. 0

4a. 2

4b. 2

5a. 2

5b. 1

6a. 4

6b. 5

7a. 4

7b. 1

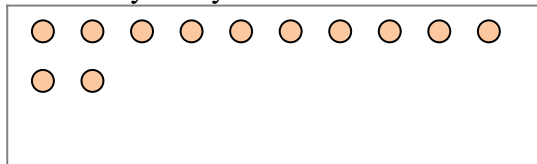
8a. 2

8b. 3


9a. 5

9b. 0

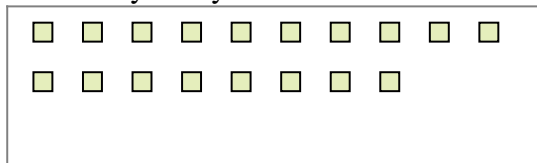
2) There are 12 shapes below. How many groups of 8 can you make with them? How many will you have left over?




3) There are 20 shapes below. How many groups of 5 can you make with them? How many will you have left over?



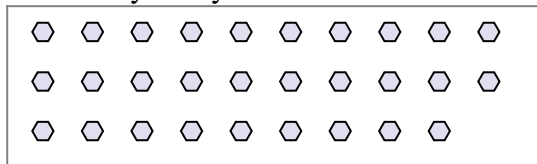
4) There are 18 shapes below. How many groups of 8 can you make with them? How many will you have left over?



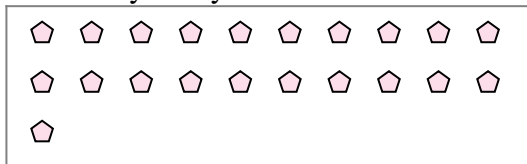
5) There are 19 shapes below. How many groups of 9 can you make with them? How many will you have left over?



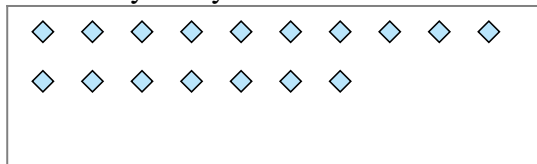
6) There are 29 shapes below. How many groups of 6 can you make with them? How many will you have left over?



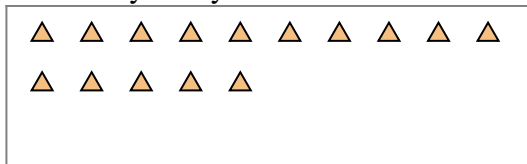
7) There are 21 shapes below. How many groups of 5 can you make with them? How many will you have left over?



8) There are 17 shapes below. How many groups of 7 can you make with them? How many will you have left over?



9) There are 15 shapes below. How many groups of 3 can you make with them? How many will you have left over?



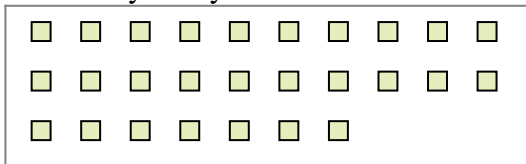


Use the shapes provided to answer the questions.

Ex) There are 15 shapes below. How many groups of 6 can you make with them?  
How many will you have left over?



1) There are 27 shapes below. How many groups of 4 can you make with them?  
How many will you have left over?



**Answers**

Ex. 2

Ex. 3

1a. \_\_\_\_\_

1b. \_\_\_\_\_

2a. \_\_\_\_\_

2b. \_\_\_\_\_

3a. \_\_\_\_\_

3b. \_\_\_\_\_

4a. \_\_\_\_\_

4b. \_\_\_\_\_

5a. \_\_\_\_\_

5b. \_\_\_\_\_

6a. \_\_\_\_\_

6b. \_\_\_\_\_

7a. \_\_\_\_\_

7b. \_\_\_\_\_


8a. \_\_\_\_\_

8b. \_\_\_\_\_

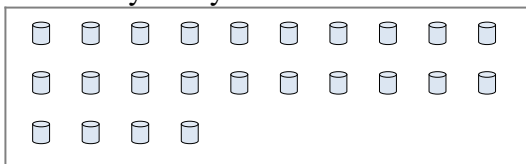
9a. \_\_\_\_\_

9b. \_\_\_\_\_

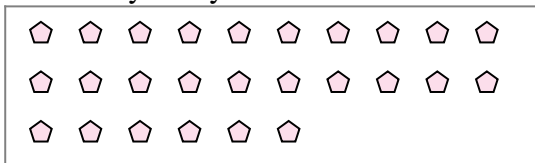
2) There are 21 shapes below. How many groups of 9 can you make with them?  
How many will you have left over?




3) There are 24 shapes below. How many groups of 3 can you make with them?  
How many will you have left over?




4) There are 26 shapes below. How many groups of 6 can you make with them?  
How many will you have left over?



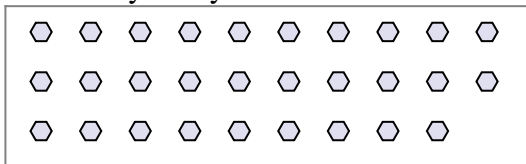
5) There are 12 shapes below. How many groups of 4 can you make with them?  
How many will you have left over?




6) There are 25 shapes below. How many groups of 2 can you make with them?  
How many will you have left over?



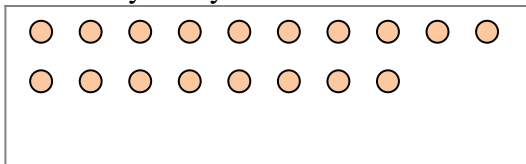
7) There are 29 shapes below. How many groups of 9 can you make with them?  
How many will you have left over?



8) There are 11 shapes below. How many groups of 5 can you make with them?  
How many will you have left over?



9) There are 18 shapes below. How many groups of 6 can you make with them?  
How many will you have left over?



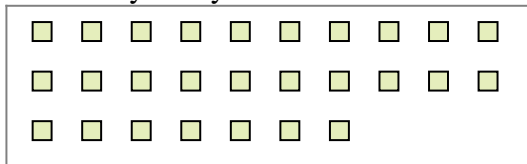


Use the shapes provided to answer the questions.

Ex) There are 15 shapes below. How many groups of 6 can you make with them?  
How many will you have left over?



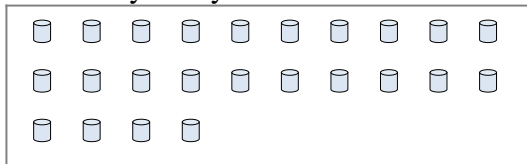
1) There are 27 shapes below. How many groups of 4 can you make with them?  
How many will you have left over?



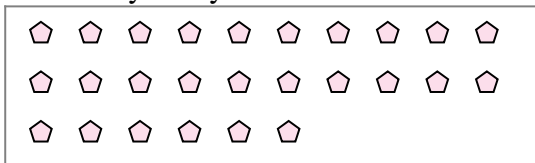
2) There are 21 shapes below. How many groups of 9 can you make with them?  
How many will you have left over?




3) There are 24 shapes below. How many groups of 3 can you make with them?  
How many will you have left over?




4) There are 26 shapes below. How many groups of 6 can you make with them?  
How many will you have left over?



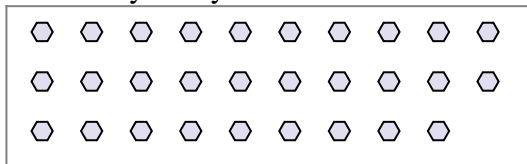
5) There are 12 shapes below. How many groups of 4 can you make with them?  
How many will you have left over?




6) There are 25 shapes below. How many groups of 2 can you make with them?  
How many will you have left over?



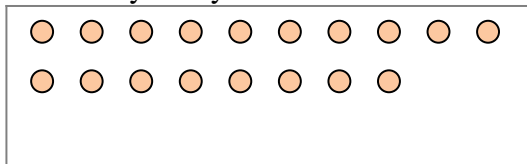
7) There are 29 shapes below. How many groups of 9 can you make with them?  
How many will you have left over?



8) There are 11 shapes below. How many groups of 5 can you make with them?  
How many will you have left over?



9) There are 18 shapes below. How many groups of 6 can you make with them?  
How many will you have left over?



**Answers**

Ex. 2

Ex. 3

1a. 6

1b. 3

2a. 2

2b. 3

3a. 8

3b. 0

4a. 4

4b. 2

5a. 3

5b. 0

6a. 12

6b. 1

7a. 3

7b. 2

8a. 2

8b. 1

9a. 3

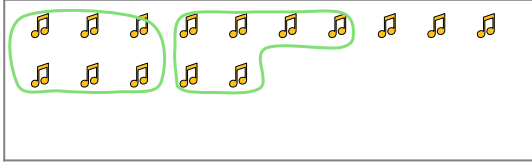
9b. 0



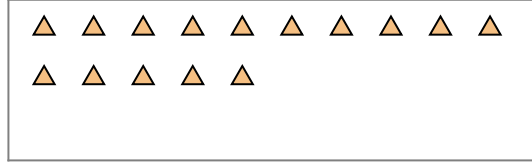


Use the shapes provided to answer the questions.


Ex) There are 15 shapes below. How many groups of 6 can you make with them? How many will you have left over?



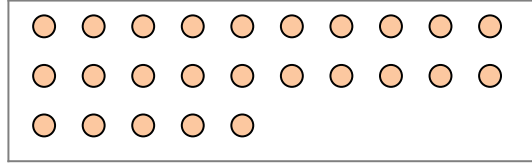
1) There are 15 shapes below. How many groups of 3 can you make with them? How many will you have left over?



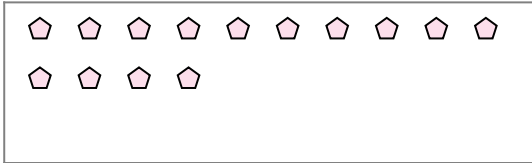
2) There are 26 shapes below. How many groups of 5 can you make with them? How many will you have left over?



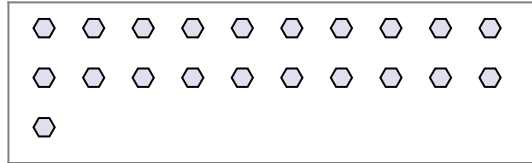
3) There are 25 shapes below. How many groups of 5 can you make with them? How many will you have left over?



4) There are 14 shapes below. How many groups of 2 can you make with them? How many will you have left over?



5) There are 21 shapes below. How many groups of 3 can you make with them? How many will you have left over?



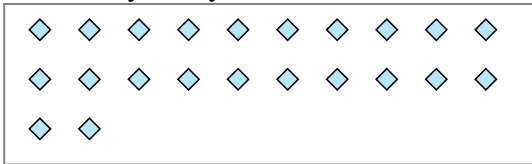
6) There are 12 shapes below. How many groups of 7 can you make with them? How many will you have left over?



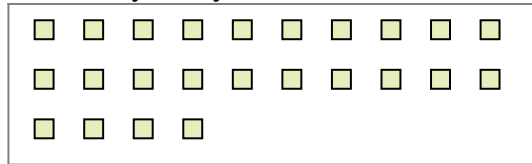
7) There are 30 shapes below. How many groups of 8 can you make with them? How many will you have left over?



8) There are 22 shapes below. How many groups of 3 can you make with them? How many will you have left over?



9) There are 24 shapes below. How many groups of 6 can you make with them? How many will you have left over?



**Answers**

Ex. 2

Ex. 3

1a. \_\_\_\_\_

1b. \_\_\_\_\_

2a. \_\_\_\_\_

2b. \_\_\_\_\_

3a. \_\_\_\_\_

3b. \_\_\_\_\_

4a. \_\_\_\_\_

4b. \_\_\_\_\_

5a. \_\_\_\_\_

5b. \_\_\_\_\_

6a. \_\_\_\_\_

6b. \_\_\_\_\_

7a. \_\_\_\_\_

7b. \_\_\_\_\_

8a. \_\_\_\_\_

8b. \_\_\_\_\_

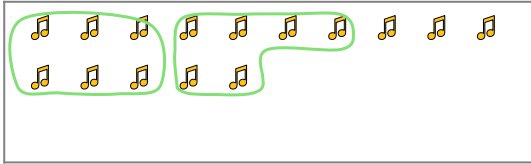
9a. \_\_\_\_\_

9b. \_\_\_\_\_

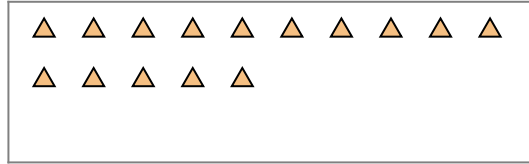


Use the shapes provided to answer the questions.

Ex) There are 15 shapes below. How many groups of 6 can you make with them?  
How many will you have left over?



1) There are 15 shapes below. How many groups of 3 can you make with them?  
How many will you have left over?



**Answers**

Ex. 2

Ex. 3

1a. 5

1b. 0

2a. 5

2b. 1

3a. 5

3b. 0

4a. 7

4b. 0

5a. 7

5b. 0

6a. 1

6b. 5

7a. 3

7b. 6


8a. 7

8b. 1

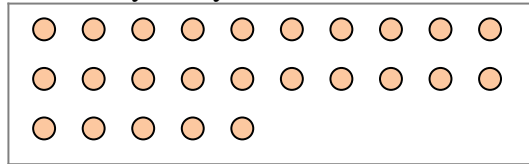
9a. 4

9b. 0

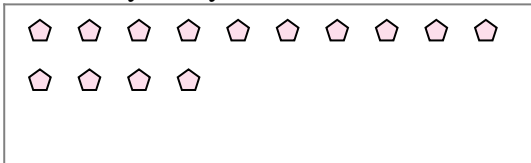
2) There are 26 shapes below. How many groups of 5 can you make with them?  
How many will you have left over?



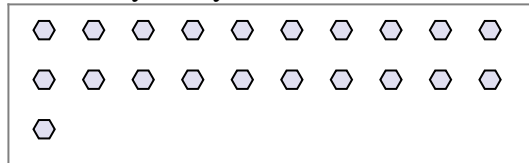
3) There are 25 shapes below. How many groups of 5 can you make with them?  
How many will you have left over?



4) There are 14 shapes below. How many groups of 2 can you make with them?  
How many will you have left over?



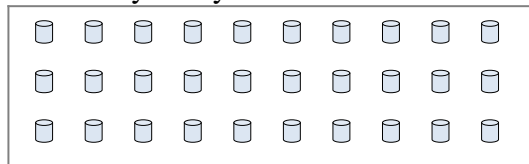
5) There are 21 shapes below. How many groups of 3 can you make with them?  
How many will you have left over?



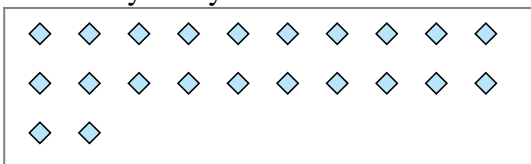
6) There are 12 shapes below. How many groups of 7 can you make with them?  
How many will you have left over?



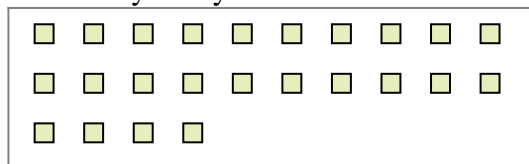
7) There are 30 shapes below. How many groups of 8 can you make with them?  
How many will you have left over?



8) There are 22 shapes below. How many groups of 3 can you make with them?  
How many will you have left over?



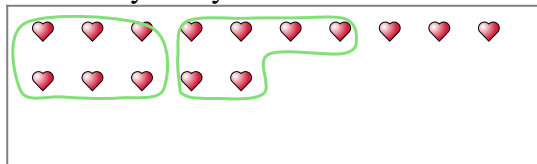
9) There are 24 shapes below. How many groups of 6 can you make with them?  
How many will you have left over?



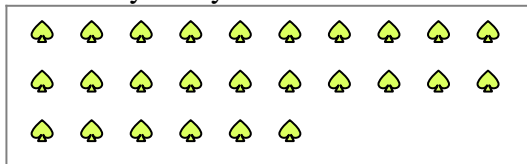


Use the shapes provided to answer the questions.

Ex) There are 15 shapes below. How many groups of 6 can you make with them? How many will you have left over?



1) There are 26 shapes below. How many groups of 8 can you make with them? How many will you have left over?



**Answers**

Ex. 2

Ex. 3

1a. \_\_\_\_\_

1b. \_\_\_\_\_

2a. \_\_\_\_\_

2b. \_\_\_\_\_

3a. \_\_\_\_\_

3b. \_\_\_\_\_

4a. \_\_\_\_\_

4b. \_\_\_\_\_

5a. \_\_\_\_\_

5b. \_\_\_\_\_

6a. \_\_\_\_\_

6b. \_\_\_\_\_

7a. \_\_\_\_\_

7b. \_\_\_\_\_

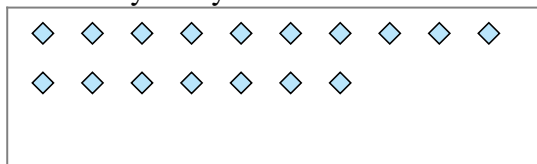
8a. \_\_\_\_\_

8b. \_\_\_\_\_

9a. \_\_\_\_\_

9b. \_\_\_\_\_

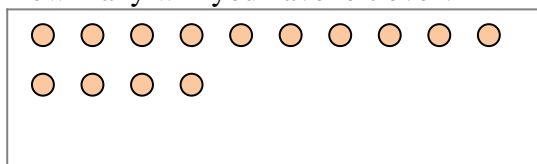
2) There are 17 shapes below. How many groups of 5 can you make with them? How many will you have left over?




3) There are 12 shapes below. How many groups of 3 can you make with them? How many will you have left over?



4) There are 14 shapes below. How many groups of 4 can you make with them? How many will you have left over?



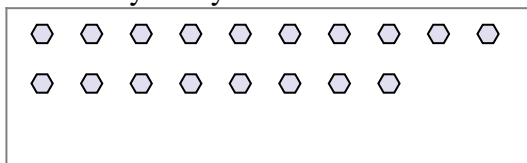
5) There are 29 shapes below. How many groups of 3 can you make with them? How many will you have left over?



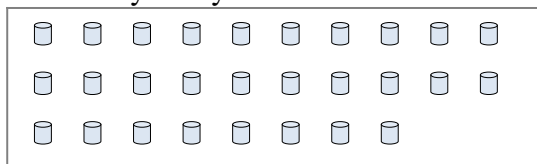
6) There are 18 shapes below. How many groups of 8 can you make with them? How many will you have left over?



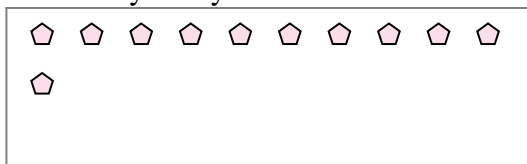
7) There are 18 shapes below. How many groups of 4 can you make with them? How many will you have left over?



8) There are 28 shapes below. How many groups of 9 can you make with them? How many will you have left over?



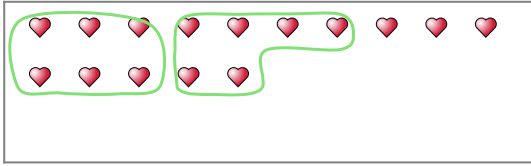
9) There are 11 shapes below. How many groups of 8 can you make with them? How many will you have left over?



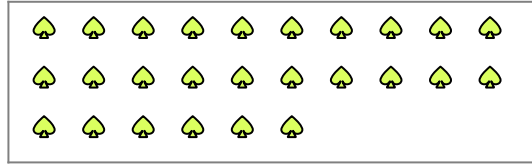


Use the shapes provided to answer the questions.

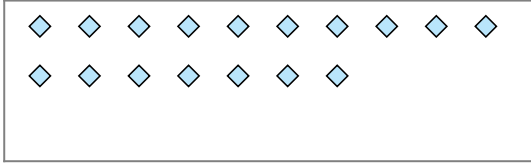
Ex) There are 15 shapes below. How many groups of 6 can you make with them? How many will you have left over?



1) There are 26 shapes below. How many groups of 8 can you make with them? How many will you have left over?



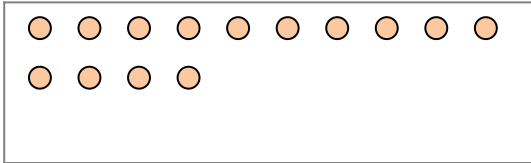
2) There are 17 shapes below. How many groups of 5 can you make with them? How many will you have left over?




3) There are 12 shapes below. How many groups of 3 can you make with them? How many will you have left over?




4) There are 14 shapes below. How many groups of 4 can you make with them? How many will you have left over?



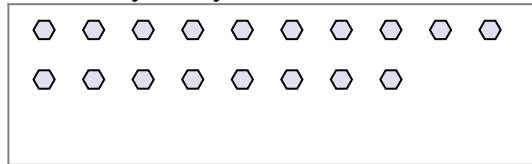
5) There are 29 shapes below. How many groups of 3 can you make with them? How many will you have left over?



6) There are 18 shapes below. How many groups of 8 can you make with them? How many will you have left over?



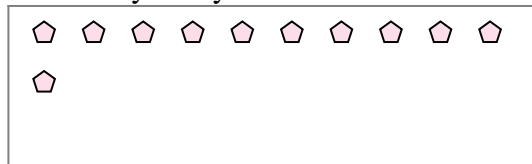
7) There are 18 shapes below. How many groups of 4 can you make with them? How many will you have left over?



8) There are 28 shapes below. How many groups of 9 can you make with them? How many will you have left over?



9) There are 11 shapes below. How many groups of 8 can you make with them? How many will you have left over?



**Answers**

Ex. 2

Ex. 3

1a. 3

1b. 2

2a. 3

2b. 2

3a. 4

3b. 0

4a. 3

4b. 2

5a. 9

5b. 2

6a. 2

6b. 2

7a. 4

7b. 2

8a. 3

8b. 1

9a. 1

9b. 3