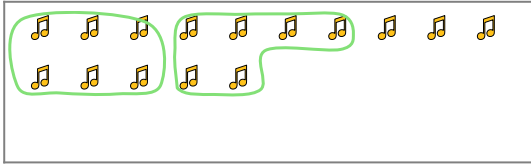


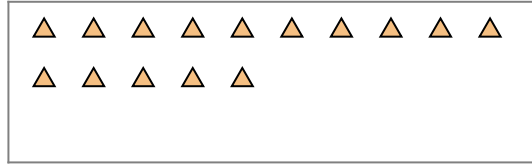


Use the shapes provided to answer the questions.

Ex) There are 15 shapes below. How many groups of 6 can you make with them? How many will you have left over?



1) There are 15 shapes below. How many groups of 3 can you make with them? How many will you have left over?




Answers

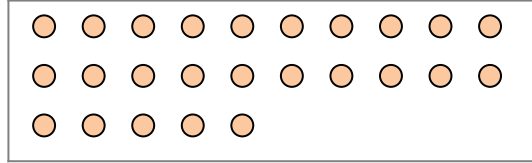
Ex. 2

Ex. 3

2) There are 26 shapes below. How many groups of 5 can you make with them? How many will you have left over?



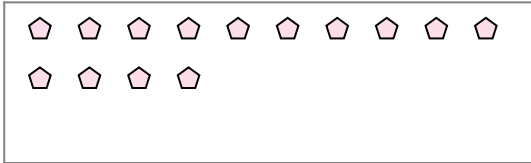
3) There are 25 shapes below. How many groups of 5 can you make with them? How many will you have left over?



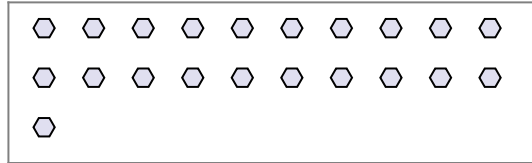
1a. _____

1b. _____

4) There are 14 shapes below. How many groups of 2 can you make with them? How many will you have left over?



5) There are 21 shapes below. How many groups of 3 can you make with them? How many will you have left over?



2a. _____

2b. _____

3a. _____

3b. _____

6) There are 12 shapes below. How many groups of 7 can you make with them? How many will you have left over?



7) There are 30 shapes below. How many groups of 8 can you make with them? How many will you have left over?



4a. _____

4b. _____

5a. _____

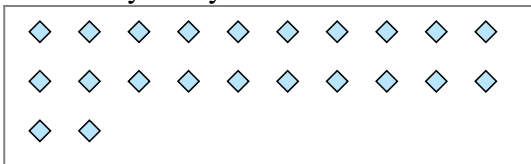
5b. _____

6a. _____

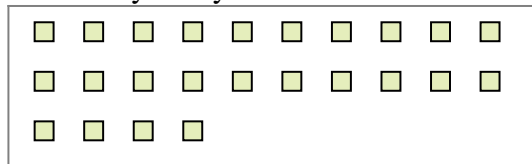
6b. _____

7a. _____

8) There are 22 shapes below. How many groups of 3 can you make with them? How many will you have left over?



9) There are 24 shapes below. How many groups of 6 can you make with them? How many will you have left over?



7b. _____

8a. _____

8b. _____

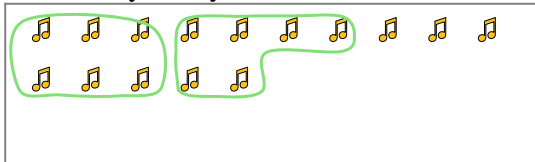
9a. _____

9b. _____



Use the shapes provided to answer the questions.

Ex) There are 15 shapes below. How many groups of 6 can you make with them? How many will you have left over?



1) There are 15 shapes below. How many groups of 3 can you make with them? How many will you have left over?



Answers

Ex. 2

Ex. 3

1a. 5

1b. 0

2a. 5

2b. 1

3a. 5

3b. 0

4a. 7

4b. 0

5a. 7

5b. 0

6a. 1

6b. 5

7a. 3

7b. 6


8a. 7

8b. 1

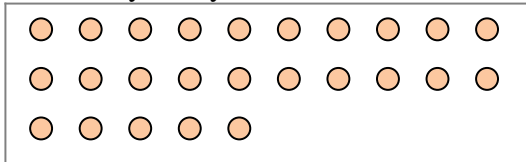
9a. 4

9b. 0

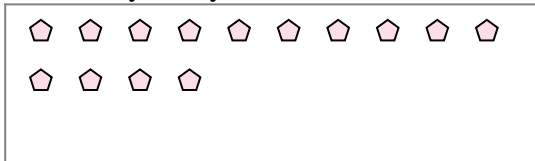
2) There are 26 shapes below. How many groups of 5 can you make with them? How many will you have left over?



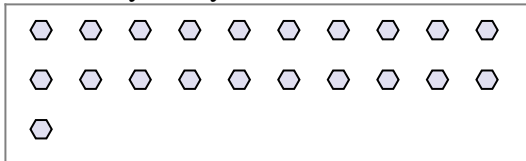
3) There are 25 shapes below. How many groups of 5 can you make with them? How many will you have left over?



4) There are 14 shapes below. How many groups of 2 can you make with them? How many will you have left over?



5) There are 21 shapes below. How many groups of 3 can you make with them? How many will you have left over?



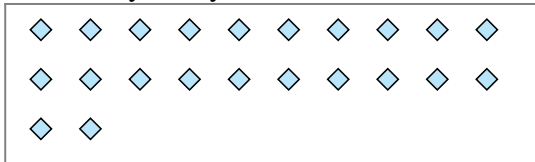
6) There are 12 shapes below. How many groups of 7 can you make with them? How many will you have left over?



7) There are 30 shapes below. How many groups of 8 can you make with them? How many will you have left over?



8) There are 22 shapes below. How many groups of 3 can you make with them? How many will you have left over?



9) There are 24 shapes below. How many groups of 6 can you make with them? How many will you have left over?

