

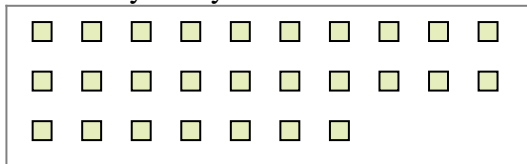


Use the shapes provided to answer the questions.

Ex) There are 15 shapes below. How many groups of 6 can you make with them?
How many will you have left over?



1) There are 27 shapes below. How many groups of 4 can you make with them?
How many will you have left over?



Answers

Ex. 2

Ex. 3

1a. _____

1b. _____

2a. _____

2b. _____

3a. _____

3b. _____

4a. _____

4b. _____

5a. _____

5b. _____

6a. _____

6b. _____

7a. _____

7b. _____

8a. _____

8b. _____

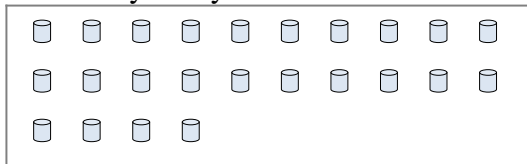
9a. _____

9b. _____

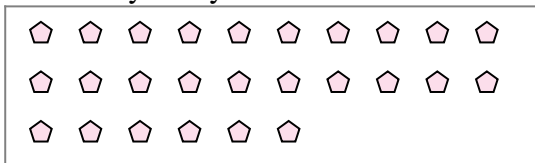
2) There are 21 shapes below. How many groups of 9 can you make with them?
How many will you have left over?




3) There are 24 shapes below. How many groups of 3 can you make with them?
How many will you have left over?




4) There are 26 shapes below. How many groups of 6 can you make with them?
How many will you have left over?



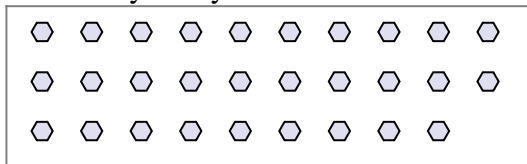
5) There are 12 shapes below. How many groups of 4 can you make with them?
How many will you have left over?




6) There are 25 shapes below. How many groups of 2 can you make with them?
How many will you have left over?



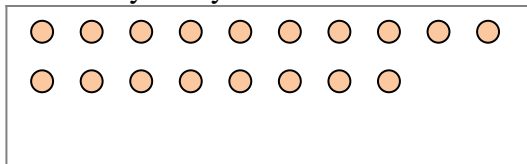
7) There are 29 shapes below. How many groups of 9 can you make with them?
How many will you have left over?



8) There are 11 shapes below. How many groups of 5 can you make with them?
How many will you have left over?



9) There are 18 shapes below. How many groups of 6 can you make with them?
How many will you have left over?



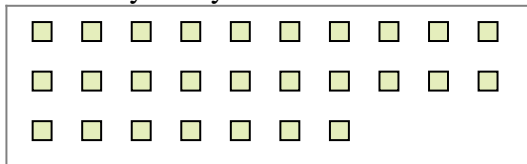


Use the shapes provided to answer the questions.

Ex) There are 15 shapes below. How many groups of 6 can you make with them?
How many will you have left over?



1) There are 27 shapes below. How many groups of 4 can you make with them?
How many will you have left over?



Answers

Ex. 2

Ex. 3

1a. 6

1b. 3

2a. 2

2b. 3

3a. 8

3b. 0

4a. 4

4b. 2

5a. 3

5b. 0

6a. 12

6b. 1

7a. 3

7b. 2


8a. 2

8b. 1

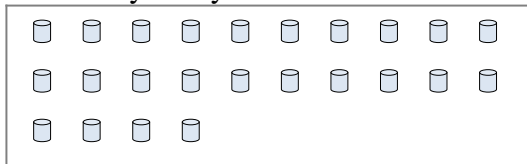
9a. 3

9b. 0

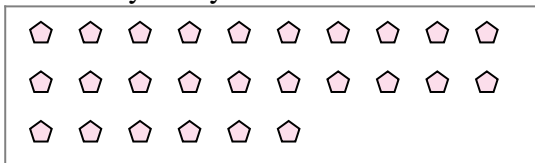
2) There are 21 shapes below. How many groups of 9 can you make with them?
How many will you have left over?




3) There are 24 shapes below. How many groups of 3 can you make with them?
How many will you have left over?




4) There are 26 shapes below. How many groups of 6 can you make with them?
How many will you have left over?



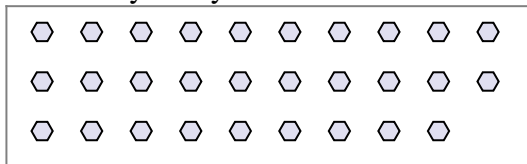
5) There are 12 shapes below. How many groups of 4 can you make with them?
How many will you have left over?




6) There are 25 shapes below. How many groups of 2 can you make with them?
How many will you have left over?



7) There are 29 shapes below. How many groups of 9 can you make with them?
How many will you have left over?



8) There are 11 shapes below. How many groups of 5 can you make with them?
How many will you have left over?



9) There are 18 shapes below. How many groups of 6 can you make with them?
How many will you have left over?

