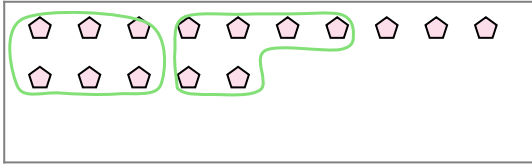


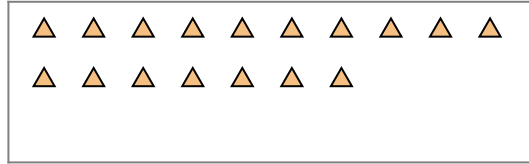


Use the shapes provided to answer the questions.


Ex) There are 15 shapes below. How many groups of 6 can you make with them?
How many will you have left over?




1) There are 17 shapes below. How many groups of 5 can you make with them?
How many will you have left over?



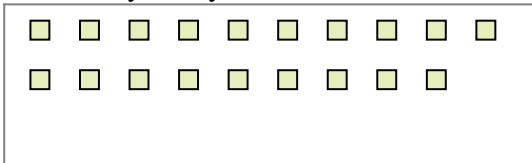
2) There are 16 shapes below. How many groups of 6 can you make with them?
How many will you have left over?



3) There are 19 shapes below. How many groups of 3 can you make with them?
How many will you have left over?



4) There are 19 shapes below. How many groups of 9 can you make with them?
How many will you have left over?



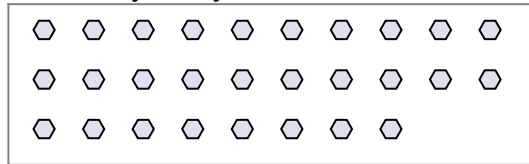
5) There are 19 shapes below. How many groups of 6 can you make with them?
How many will you have left over?



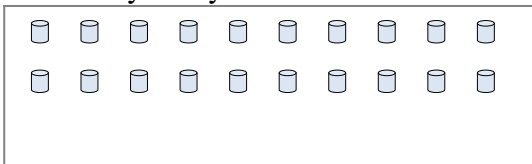
6) There are 10 shapes below. How many groups of 4 can you make with them?
How many will you have left over?



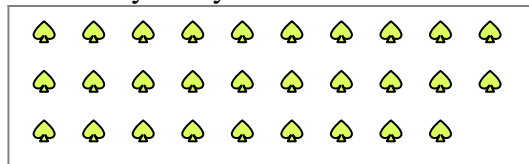
7) There are 28 shapes below. How many groups of 4 can you make with them?
How many will you have left over?



8) There are 20 shapes below. How many groups of 5 can you make with them?
How many will you have left over?



9) There are 29 shapes below. How many groups of 9 can you make with them?
How many will you have left over?



Answers

Ex. 2

Ex. 3

1a. _____

1b. _____

2a. _____

2b. _____

3a. _____

3b. _____

4a. _____

4b. _____

5a. _____

5b. _____

6a. _____

6b. _____

7a. _____

7b. _____

8a. _____

8b. _____

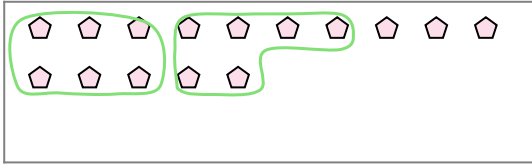
9a. _____

9b. _____

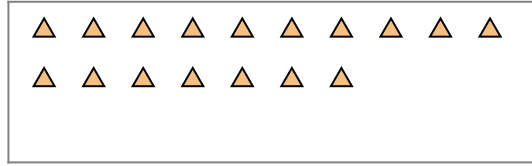


Use the shapes provided to answer the questions.

Ex) There are 15 shapes below. How many groups of 6 can you make with them?
How many will you have left over?




1) There are 17 shapes below. How many groups of 5 can you make with them?
How many will you have left over?



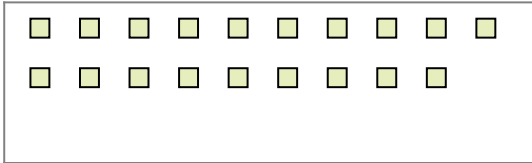
2) There are 16 shapes below. How many groups of 6 can you make with them?
How many will you have left over?



3) There are 19 shapes below. How many groups of 3 can you make with them?
How many will you have left over?




4) There are 19 shapes below. How many groups of 9 can you make with them?
How many will you have left over?



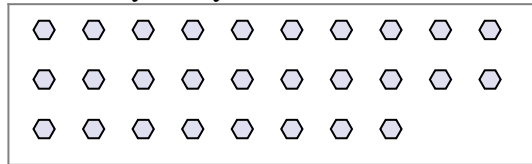
5) There are 19 shapes below. How many groups of 6 can you make with them?
How many will you have left over?



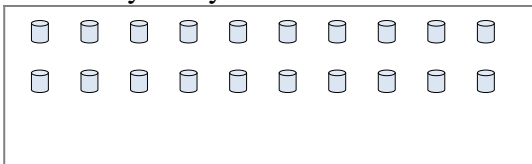
6) There are 10 shapes below. How many groups of 4 can you make with them?
How many will you have left over?



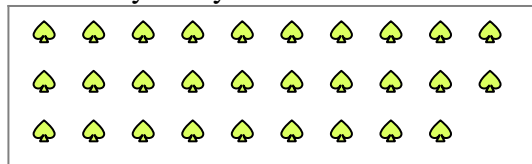
7) There are 28 shapes below. How many groups of 4 can you make with them?
How many will you have left over?



8) There are 20 shapes below. How many groups of 5 can you make with them?
How many will you have left over?



9) There are 29 shapes below. How many groups of 9 can you make with them?
How many will you have left over?



Answers

Ex. 2

Ex. 3

1a. 3

1b. 2

2a. 2

2b. 4

3a. 6

3b. 1

4a. 2

4b. 1

5a. 3

5b. 1

6a. 2

6b. 2

7a. 7

7b. 0

8a. 4

8b. 0

9a. 3

9b. 2