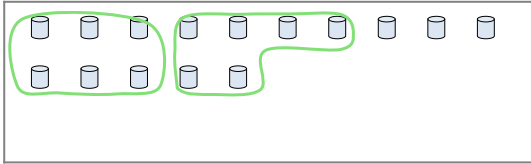


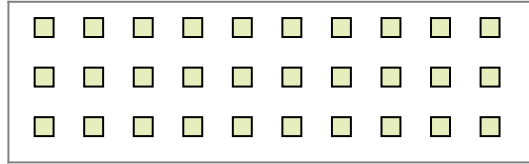


Use the shapes provided to answer the questions.

Ex) There are 15 shapes below. How many groups of 6 can you make with them? How many will you have left over?



1) There are 30 shapes below. How many groups of 6 can you make with them? How many will you have left over?




**Answers**

Ex. 2

Ex. 3

2) There are 10 shapes below. How many groups of 8 can you make with them? How many will you have left over?




3) There are 15 shapes below. How many groups of 3 can you make with them? How many will you have left over?




1a. \_\_\_\_\_

1b. \_\_\_\_\_

4) There are 20 shapes below. How many groups of 8 can you make with them? How many will you have left over?



5) There are 17 shapes below. How many groups of 7 can you make with them? How many will you have left over?



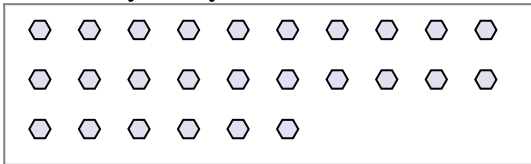
2a. \_\_\_\_\_

2b. \_\_\_\_\_

3a. \_\_\_\_\_

3b. \_\_\_\_\_

6) There are 26 shapes below. How many groups of 9 can you make with them? How many will you have left over?



7) There are 10 shapes below. How many groups of 8 can you make with them? How many will you have left over?



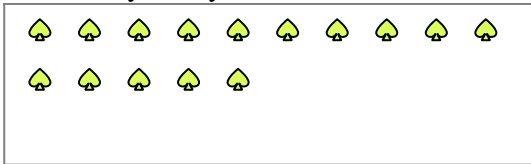
4a. \_\_\_\_\_

4b. \_\_\_\_\_

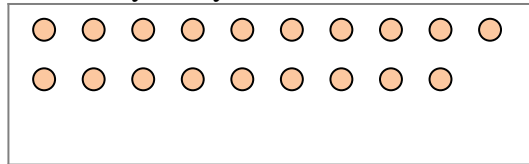
5a. \_\_\_\_\_

5b. \_\_\_\_\_

8) There are 15 shapes below. How many groups of 4 can you make with them? How many will you have left over?



9) There are 19 shapes below. How many groups of 5 can you make with them? How many will you have left over?



6a. \_\_\_\_\_

6b. \_\_\_\_\_

7a. \_\_\_\_\_

7b. \_\_\_\_\_

8a. \_\_\_\_\_

8b. \_\_\_\_\_

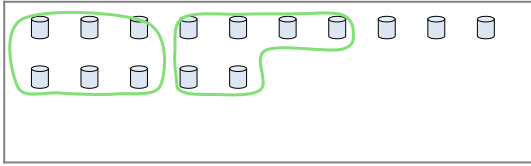
9a. \_\_\_\_\_

9b. \_\_\_\_\_

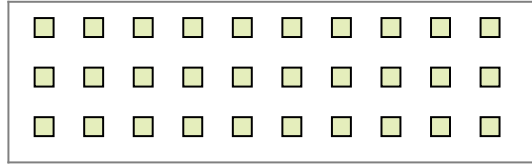


Use the shapes provided to answer the questions.

Ex) There are 15 shapes below. How many groups of 6 can you make with them? How many will you have left over?



1) There are 30 shapes below. How many groups of 6 can you make with them? How many will you have left over?




2) There are 10 shapes below. How many groups of 8 can you make with them? How many will you have left over?




3) There are 15 shapes below. How many groups of 3 can you make with them? How many will you have left over?



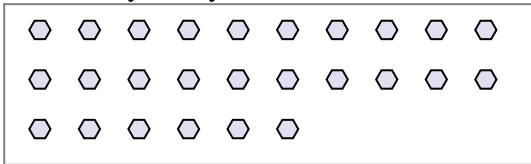
4) There are 20 shapes below. How many groups of 8 can you make with them? How many will you have left over?



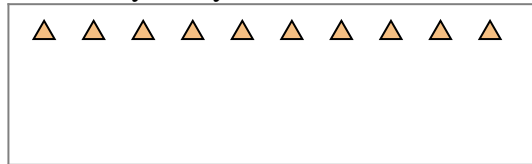
5) There are 17 shapes below. How many groups of 7 can you make with them? How many will you have left over?



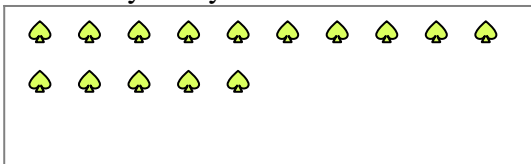
6) There are 26 shapes below. How many groups of 9 can you make with them? How many will you have left over?



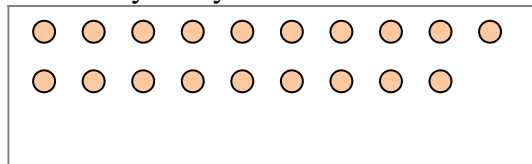
7) There are 10 shapes below. How many groups of 8 can you make with them? How many will you have left over?



8) There are 15 shapes below. How many groups of 4 can you make with them? How many will you have left over?



9) There are 19 shapes below. How many groups of 5 can you make with them? How many will you have left over?



**Answers**

Ex. 2

Ex. 3

1a. 5

1b. 0

2a. 1

2b. 2

3a. 5

3b. 0

4a. 2

4b. 4

5a. 2

5b. 3

6a. 2

6b. 8

7a. 1

7b. 2

8a. 3

8b. 3

9a. 3

9b. 4