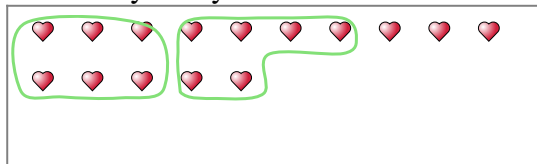


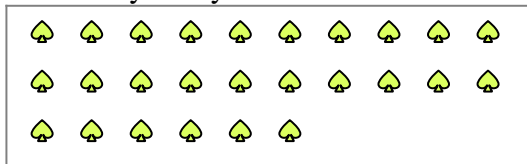


Use the shapes provided to answer the questions.

Ex) There are 15 shapes below. How many groups of 6 can you make with them? How many will you have left over?



1) There are 26 shapes below. How many groups of 8 can you make with them? How many will you have left over?



**Answers**

Ex. 2

Ex. 3

1a. \_\_\_\_\_

1b. \_\_\_\_\_

2a. \_\_\_\_\_

2b. \_\_\_\_\_

3a. \_\_\_\_\_

3b. \_\_\_\_\_

4a. \_\_\_\_\_

4b. \_\_\_\_\_

5a. \_\_\_\_\_

5b. \_\_\_\_\_

6a. \_\_\_\_\_

6b. \_\_\_\_\_

7a. \_\_\_\_\_

7b. \_\_\_\_\_

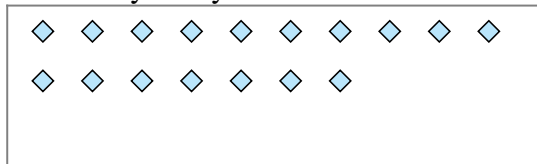
8a. \_\_\_\_\_

8b. \_\_\_\_\_

9a. \_\_\_\_\_

9b. \_\_\_\_\_

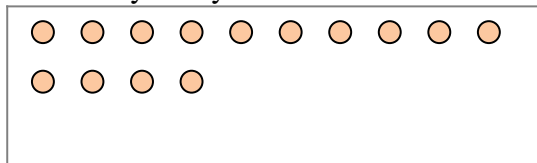
2) There are 17 shapes below. How many groups of 5 can you make with them? How many will you have left over?




3) There are 12 shapes below. How many groups of 3 can you make with them? How many will you have left over?




4) There are 14 shapes below. How many groups of 4 can you make with them? How many will you have left over?



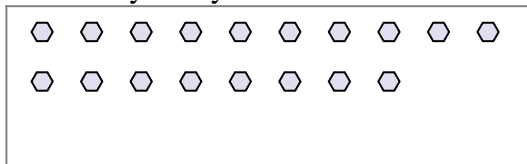
5) There are 29 shapes below. How many groups of 3 can you make with them? How many will you have left over?



6) There are 18 shapes below. How many groups of 8 can you make with them? How many will you have left over?



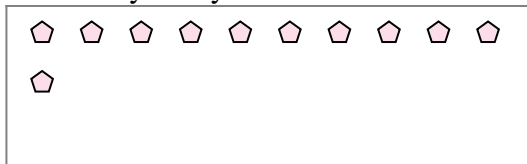
7) There are 18 shapes below. How many groups of 4 can you make with them? How many will you have left over?



8) There are 28 shapes below. How many groups of 9 can you make with them? How many will you have left over?



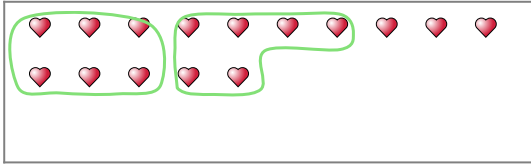
9) There are 11 shapes below. How many groups of 8 can you make with them? How many will you have left over?



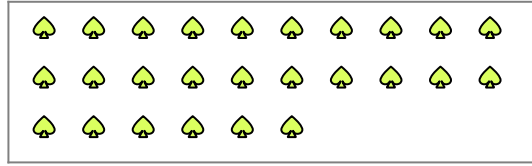


Use the shapes provided to answer the questions.

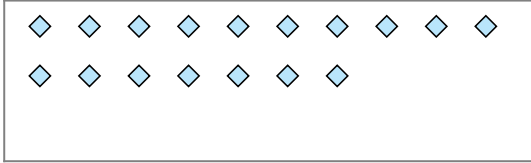
Ex) There are 15 shapes below. How many groups of 6 can you make with them? How many will you have left over?



1) There are 26 shapes below. How many groups of 8 can you make with them? How many will you have left over?



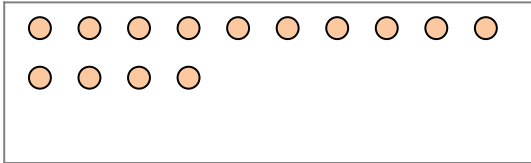
2) There are 17 shapes below. How many groups of 5 can you make with them? How many will you have left over?




3) There are 12 shapes below. How many groups of 3 can you make with them? How many will you have left over?




4) There are 14 shapes below. How many groups of 4 can you make with them? How many will you have left over?



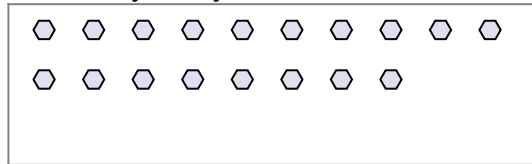
5) There are 29 shapes below. How many groups of 3 can you make with them? How many will you have left over?



6) There are 18 shapes below. How many groups of 8 can you make with them? How many will you have left over?



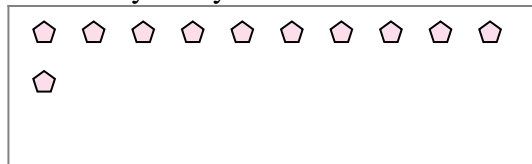
7) There are 18 shapes below. How many groups of 4 can you make with them? How many will you have left over?



8) There are 28 shapes below. How many groups of 9 can you make with them? How many will you have left over?



9) There are 11 shapes below. How many groups of 8 can you make with them? How many will you have left over?



**Answers**

Ex. 2

Ex. 3

1a. 3

1b. 2

2a. 3

2b. 2

3a. 4

3b. 0

4a. 3

4b. 2

5a. 9

5b. 2

6a. 2

6b. 2

7a. 4

7b. 2

8a. 3

8b. 1

9a. 1

9b. 3