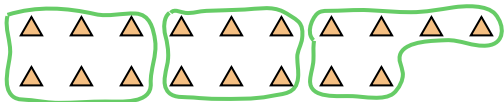




Use the shapes provided to answer the questions.

Ex) How many groups of 6 can you make with the 18 shapes below?



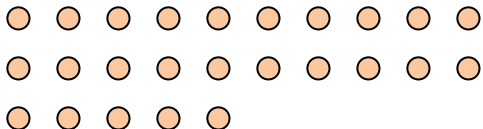
1) How many groups of 6 can you make with the 18 shapes below?



Answers

Ex. 3

2) How many groups of 5 can you make with the 25 shapes below?



3) How many groups of 2 can you make with the 8 shapes below?




1. \_\_\_\_\_

2. \_\_\_\_\_

4) How many groups of 2 can you make with the 16 shapes below?



5) How many groups of 5 can you make with the 35 shapes below?



3. \_\_\_\_\_

4. \_\_\_\_\_

5. \_\_\_\_\_

6. \_\_\_\_\_

7. \_\_\_\_\_

8. \_\_\_\_\_

9. \_\_\_\_\_

6) How many groups of 3 can you make with the 39 shapes below?




7) How many groups of 7 can you make with the 14 shapes below?




10. \_\_\_\_\_

11. \_\_\_\_\_

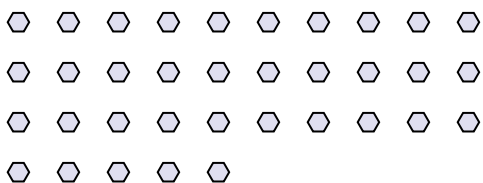
8) How many groups of 7 can you make with the 28 shapes below?



9) How many groups of 4 can you make with the 40 shapes below?



10) How many groups of 7 can you make with the 35 shapes below?



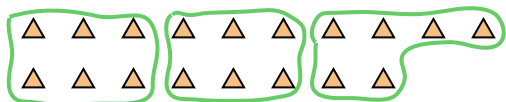
11) How many groups of 3 can you make with the 18 shapes below?





Use the shapes provided to answer the questions.

Ex) How many groups of 6 can you make with the 18 shapes below?



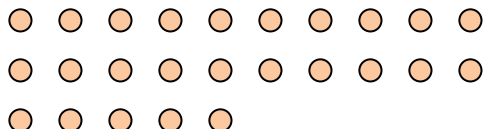
1) How many groups of 6 can you make with the 18 shapes below?



Answers

Ex. 3

2) How many groups of 5 can you make with the 25 shapes below?



3) How many groups of 2 can you make with the 8 shapes below?




1. 3

4) How many groups of 2 can you make with the 16 shapes below?



5) How many groups of 5 can you make with the 35 shapes below?



2. 5

3. 4

6) How many groups of 3 can you make with the 39 shapes below?



7) How many groups of 7 can you make with the 14 shapes below?



4. 8


5. 7

6. 13

8) How many groups of 7 can you make with the 28 shapes below?



9) How many groups of 4 can you make with the 40 shapes below?

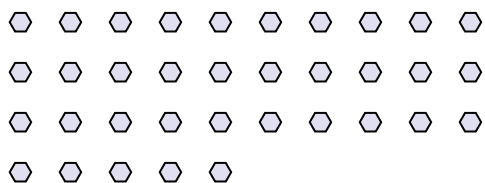


7. 2

8. 4

9. 10

10) How many groups of 7 can you make with the 35 shapes below?



11) How many groups of 3 can you make with the 18 shapes below?



10. 5

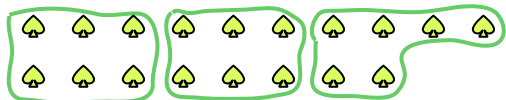
11. 6



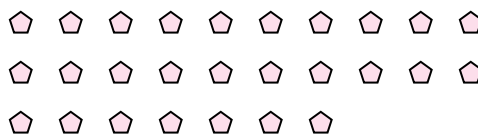


Use the shapes provided to answer the questions.

Ex) How many groups of 6 can you make with the 18 shapes below?



1) How many groups of 9 can you make with the 27 shapes below?



2) How many groups of 2 can you make with the 6 shapes below?




3) How many groups of 3 can you make with the 15 shapes below?



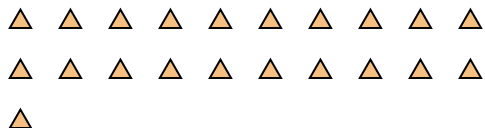
4) How many groups of 5 can you make with the 20 shapes below?



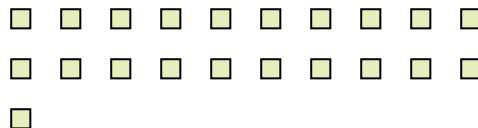
5) How many groups of 4 can you make with the 40 shapes below?



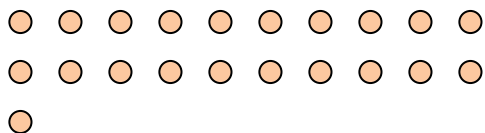
6) How many groups of 7 can you make with the 21 shapes below?



7) How many groups of 7 can you make with the 21 shapes below?



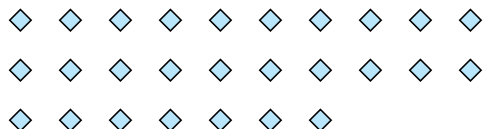
8) How many groups of 7 can you make with the 21 shapes below?



9) How many groups of 2 can you make with the 26 shapes below?



10) How many groups of 9 can you make with the 27 shapes below?



11) How many groups of 4 can you make with the 36 shapes below?



Answers

Ex. 3

1. 3

2. 3

3. 5

4. 4

5. 10

6. 3

7. 3

8. 3

9. 13

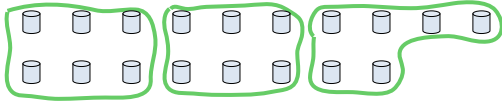
10. 3

11. 9



Use the shapes provided to answer the questions.

Ex) How many groups of 6 can you make with the 18 shapes below?



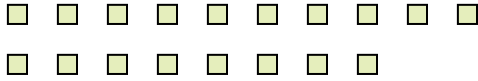
1) How many groups of 2 can you make with the 4 shapes below?




Answers

Ex. 3

2) How many groups of 9 can you make with the 18 shapes below?




3) How many groups of 5 can you make with the 35 shapes below?




4) How many groups of 7 can you make with the 35 shapes below?



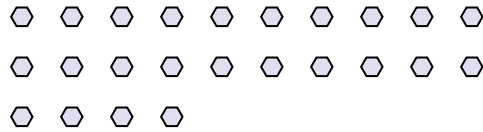
5) How many groups of 8 can you make with the 24 shapes below?



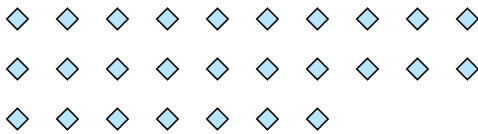
6) How many groups of 5 can you make with the 30 shapes below?



7) How many groups of 8 can you make with the 24 shapes below?



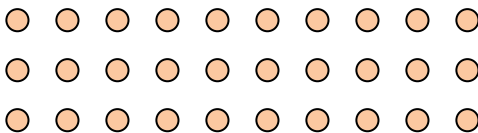
8) How many groups of 9 can you make with the 27 shapes below?



9) How many groups of 2 can you make with the 16 shapes below?



10) How many groups of 2 can you make with the 30 shapes below?



11) How many groups of 9 can you make with the 18 shapes below?



1. \_\_\_\_\_

2. \_\_\_\_\_

3. \_\_\_\_\_

4. \_\_\_\_\_

5. \_\_\_\_\_

6. \_\_\_\_\_

7. \_\_\_\_\_

8. \_\_\_\_\_

9. \_\_\_\_\_

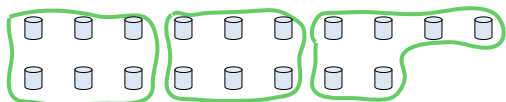
10. \_\_\_\_\_

11. \_\_\_\_\_



Use the shapes provided to answer the questions.

Ex) How many groups of 6 can you make with the 18 shapes below?



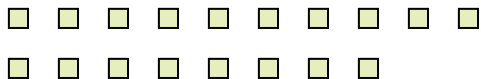
1) How many groups of 2 can you make with the 4 shapes below?




Answers

Ex. 3

2) How many groups of 9 can you make with the 18 shapes below?



3) How many groups of 5 can you make with the 35 shapes below?



1. 2

2. 2

3. 7


4. 5

5. 3

4) How many groups of 7 can you make with the 35 shapes below?



5) How many groups of 8 can you make with the 24 shapes below?




6. 6

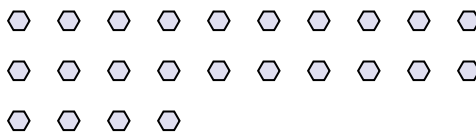
7. 3

8. 3

6) How many groups of 5 can you make with the 30 shapes below?



7) How many groups of 8 can you make with the 24 shapes below?

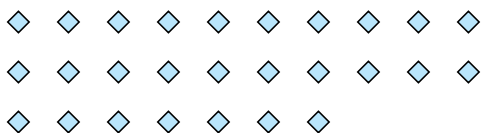


9. 8

10. 15

11. 2

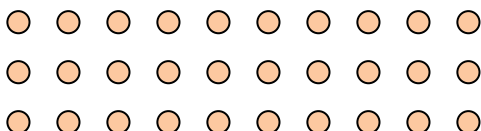
8) How many groups of 9 can you make with the 27 shapes below?



9) How many groups of 2 can you make with the 16 shapes below?



10) How many groups of 2 can you make with the 30 shapes below?



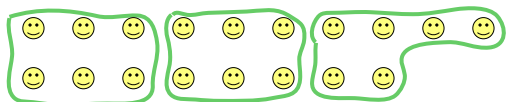
11) How many groups of 9 can you make with the 18 shapes below?






Use the shapes provided to answer the questions.

Ex) How many groups of 6 can you make with the 18 shapes below?




1) How many groups of 5 can you make with the 35 shapes below?



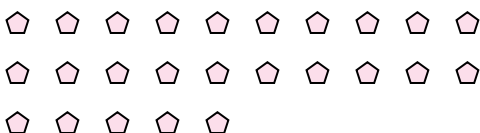
2) How many groups of 6 can you make with the 30 shapes below?



3) How many groups of 2 can you make with the 36 shapes below?




4) How many groups of 5 can you make with the 25 shapes below?




5) How many groups of 4 can you make with the 8 shapes below?



6) How many groups of 4 can you make with the 40 shapes below?



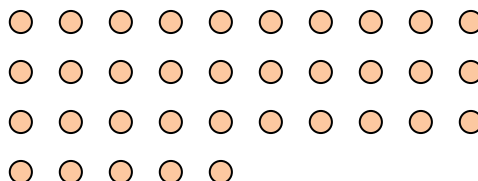
7) How many groups of 6 can you make with the 24 shapes below?



8) How many groups of 9 can you make with the 18 shapes below?



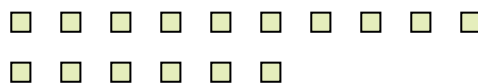
9) How many groups of 7 can you make with the 35 shapes below?



10) How many groups of 5 can you make with the 20 shapes below?



11) How many groups of 8 can you make with the 16 shapes below?



Answers

Ex. 3

1. \_\_\_\_\_

2. \_\_\_\_\_

3. \_\_\_\_\_

4. \_\_\_\_\_

5. \_\_\_\_\_

6. \_\_\_\_\_

7. \_\_\_\_\_

8. \_\_\_\_\_

9. \_\_\_\_\_

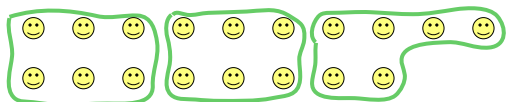
10. \_\_\_\_\_

11. \_\_\_\_\_




Use the shapes provided to answer the questions.

Ex) How many groups of 6 can you make with the 18 shapes below?




1) How many groups of 5 can you make with the 35 shapes below?



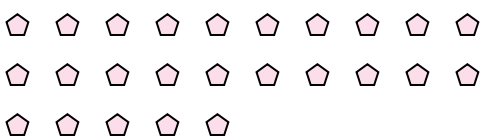
2) How many groups of 6 can you make with the 30 shapes below?



3) How many groups of 2 can you make with the 36 shapes below?




4) How many groups of 5 can you make with the 25 shapes below?




5) How many groups of 4 can you make with the 8 shapes below?



6) How many groups of 4 can you make with the 40 shapes below?



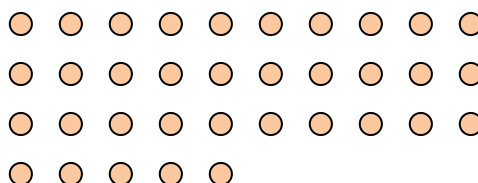
7) How many groups of 6 can you make with the 24 shapes below?



8) How many groups of 9 can you make with the 18 shapes below?



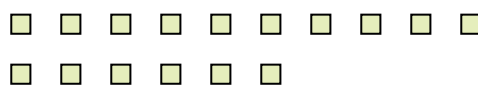
9) How many groups of 7 can you make with the 35 shapes below?



10) How many groups of 5 can you make with the 20 shapes below?



11) How many groups of 8 can you make with the 16 shapes below?



Answers

Ex. 3

1. 7

2. 5

3. 18

4. 5

5. 2

6. 10

7. 4

8. 2

9. 5

10. 4

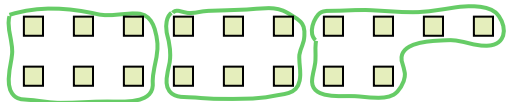
11. 2





Use the shapes provided to answer the questions.

Ex) How many groups of 6 can you make with the 18 shapes below?



1) How many groups of 6 can you make with the 12 shapes below?



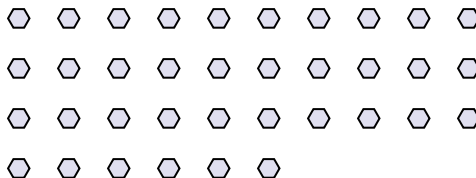
Answers

Ex. 3

2) How many groups of 5 can you make with the 20 shapes below?



3) How many groups of 9 can you make with the 36 shapes below?



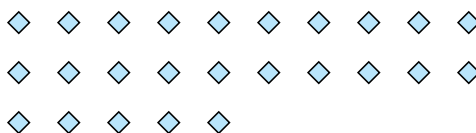
1. \_\_\_\_\_

2. \_\_\_\_\_

4) How many groups of 3 can you make with the 6 shapes below?



5) How many groups of 5 can you make with the 25 shapes below?



3. \_\_\_\_\_

4. \_\_\_\_\_

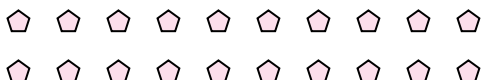
5. \_\_\_\_\_

6. \_\_\_\_\_

7. \_\_\_\_\_

8. \_\_\_\_\_

6) How many groups of 5 can you make with the 20 shapes below?



7) How many groups of 9 can you make with the 18 shapes below?



9. \_\_\_\_\_

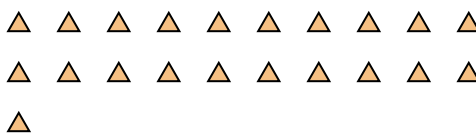
10. \_\_\_\_\_

11. \_\_\_\_\_

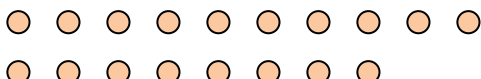
8) How many groups of 4 can you make with the 16 shapes below?



9) How many groups of 7 can you make with the 21 shapes below?



10) How many groups of 9 can you make with the 18 shapes below?



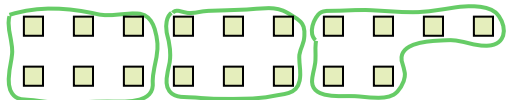
11) How many groups of 9 can you make with the 18 shapes below?





Use the shapes provided to answer the questions.

Ex) How many groups of 6 can you make with the 18 shapes below?



1) How many groups of 6 can you make with the 12 shapes below?



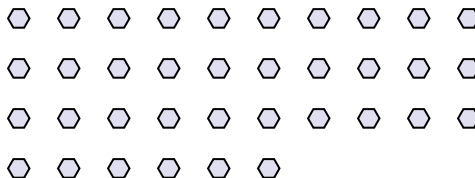
Answers

Ex. 3

2) How many groups of 5 can you make with the 20 shapes below?



3) How many groups of 9 can you make with the 36 shapes below?



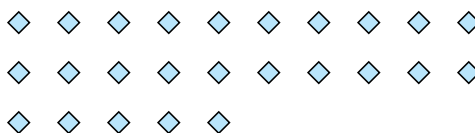
1. 2

2. 4

4) How many groups of 3 can you make with the 6 shapes below?



5) How many groups of 5 can you make with the 25 shapes below?

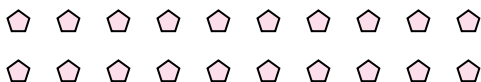


3. 4

4. 2

5. 5

6) How many groups of 5 can you make with the 20 shapes below?



7) How many groups of 9 can you make with the 18 shapes below?



6. 4

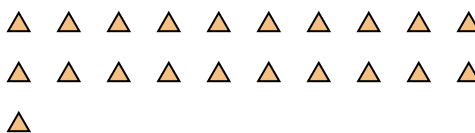
7. 2

8. 4

8) How many groups of 4 can you make with the 16 shapes below?



9) How many groups of 7 can you make with the 21 shapes below?

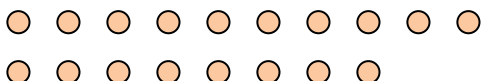


9. 3

10. 2

11. 2

10) How many groups of 9 can you make with the 18 shapes below?



11) How many groups of 9 can you make with the 18 shapes below?

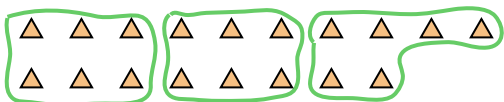




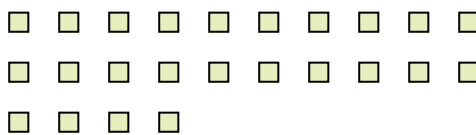


Use the shapes provided to answer the questions.

Ex) How many groups of 6 can you make with the 18 shapes below?



1) How many groups of 6 can you make with the 24 shapes below?



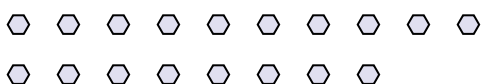
2) How many groups of 4 can you make with the 8 shapes below?




3) How many groups of 5 can you make with the 10 shapes below?



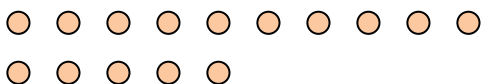
4) How many groups of 6 can you make with the 18 shapes below?



5) How many groups of 3 can you make with the 24 shapes below?



6) How many groups of 5 can you make with the 15 shapes below?



7) How many groups of 5 can you make with the 40 shapes below?




8) How many groups of 6 can you make with the 12 shapes below?



9) How many groups of 7 can you make with the 14 shapes below?



10) How many groups of 7 can you make with the 35 shapes below?



11) How many groups of 7 can you make with the 14 shapes below?



Answers

Ex. 3

1. 4

2. 2

3. 2

4. 3

5. 8

6. 3

7. 8

8. 2

9. 2

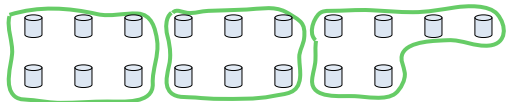
10. 5

11. 2




Use the shapes provided to answer the questions.

Ex) How many groups of 6 can you make with the 18 shapes below?




1) How many groups of 5 can you make with the 30 shapes below?



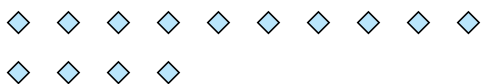
2) How many groups of 2 can you make with the 10 shapes below?



3) How many groups of 4 can you make with the 36 shapes below?



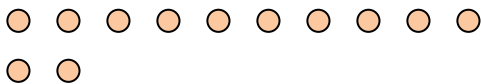
4) How many groups of 7 can you make with the 14 shapes below?




5) How many groups of 9 can you make with the 18 shapes below?



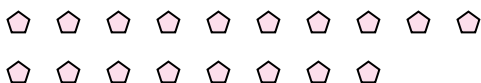
6) How many groups of 4 can you make with the 12 shapes below?



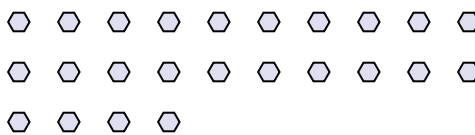
7) How many groups of 4 can you make with the 36 shapes below?



8) How many groups of 3 can you make with the 18 shapes below?



9) How many groups of 6 can you make with the 24 shapes below?



10) How many groups of 6 can you make with the 18 shapes below?



11) How many groups of 3 can you make with the 6 shapes below?



Answers

Ex. 3

1. \_\_\_\_\_

2. \_\_\_\_\_

3. \_\_\_\_\_

4. \_\_\_\_\_

5. \_\_\_\_\_

6. \_\_\_\_\_

7. \_\_\_\_\_

8. \_\_\_\_\_

9. \_\_\_\_\_

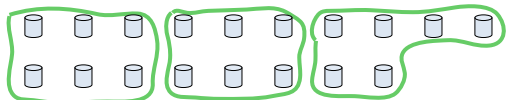
10. \_\_\_\_\_

11. \_\_\_\_\_




Use the shapes provided to answer the questions.


Ex) How many groups of 6 can you make with the 18 shapes below?



1) How many groups of 5 can you make with the 30 shapes below?




3) How many groups of 4 can you make with the 36 shapes below?



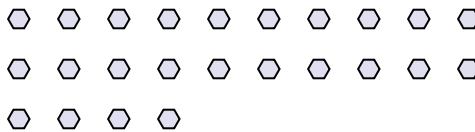
5) How many groups of 9 can you make with the 18 shapes below?



7) How many groups of 4 can you make with the 36 shapes below?




9) How many groups of 6 can you make with the 24 shapes below?



10) How many groups of 6 can you make with the 18 shapes below?



11) How many groups of 3 can you make with the 6 shapes below?



Answers

Ex. 3

1. 6

2. 5

3. 9

4. 2

5. 2

6. 3

7. 9

8. 6

9. 4

10. 3

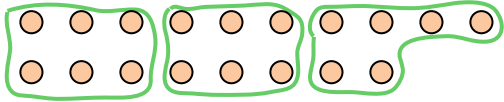
11. 2






Use the shapes provided to answer the questions.

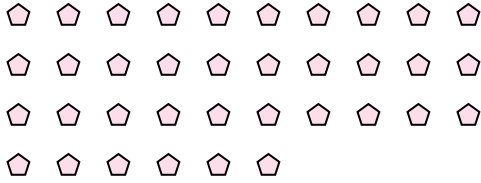
Ex) How many groups of 6 can you make with the 18 shapes below?



1) How many groups of 8 can you make with the 24 shapes below?



2) How many groups of 9 can you make with the 36 shapes below?



3) How many groups of 4 can you make with the 12 shapes below?



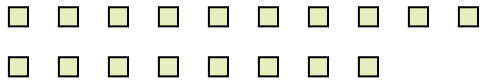
4) How many groups of 3 can you make with the 30 shapes below?



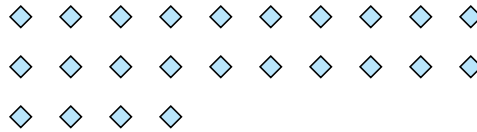
5) How many groups of 7 can you make with the 14 shapes below?



6) How many groups of 9 can you make with the 18 shapes below?



7) How many groups of 2 can you make with the 24 shapes below?




8) How many groups of 4 can you make with the 8 shapes below?



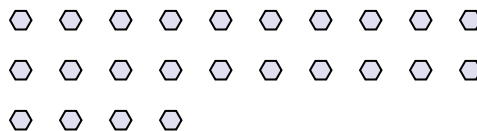
9) How many groups of 4 can you make with the 12 shapes below?



10) How many groups of 3 can you make with the 21 shapes below?



11) How many groups of 6 can you make with the 24 shapes below?



Answers

Ex. 3

1. 3

2. 4

3. 3

4. 10

5. 2

6. 2

7. 12

8. 2

9. 3

10. 7

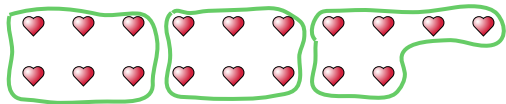
11. 4



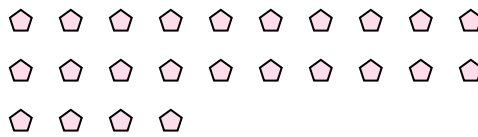


Use the shapes provided to answer the questions.

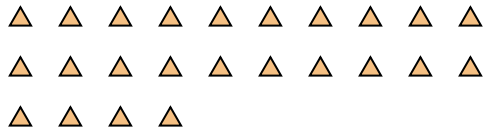
Ex) How many groups of 6 can you make with the 18 shapes below?



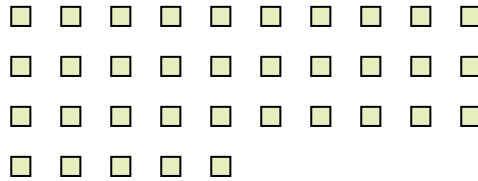
1) How many groups of 4 can you make with the 24 shapes below?



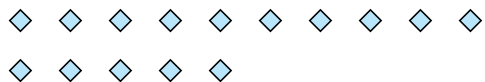
2) How many groups of 3 can you make with the 24 shapes below?



3) How many groups of 7 can you make with the 35 shapes below?



4) How many groups of 5 can you make with the 15 shapes below?



5) How many groups of 3 can you make with the 15 shapes below?



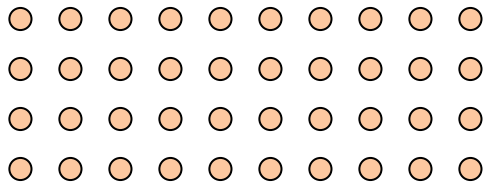
6) How many groups of 5 can you make with the 15 shapes below?




7) How many groups of 6 can you make with the 12 shapes below?



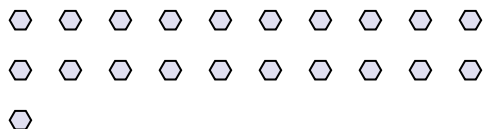
8) How many groups of 5 can you make with the 40 shapes below?




9) How many groups of 4 can you make with the 40 shapes below?



10) How many groups of 7 can you make with the 21 shapes below?



11) How many groups of 8 can you make with the 40 shapes below?



Answers

Ex. 3

1. \_\_\_\_\_

2. \_\_\_\_\_

3. \_\_\_\_\_

4. \_\_\_\_\_

5. \_\_\_\_\_

6. \_\_\_\_\_

7. \_\_\_\_\_

8. \_\_\_\_\_

9. \_\_\_\_\_

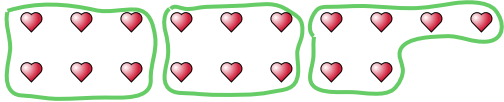
10. \_\_\_\_\_

11. \_\_\_\_\_

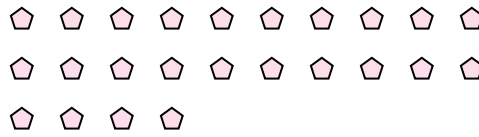


Use the shapes provided to answer the questions.

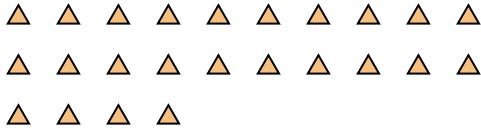
Ex) How many groups of 6 can you make with the 18 shapes below?



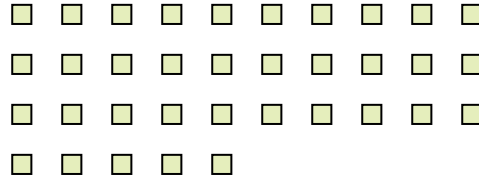
1) How many groups of 4 can you make with the 24 shapes below?



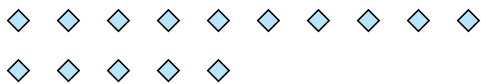
2) How many groups of 3 can you make with the 24 shapes below?



3) How many groups of 7 can you make with the 35 shapes below?



4) How many groups of 5 can you make with the 15 shapes below?



5) How many groups of 3 can you make with the 15 shapes below?



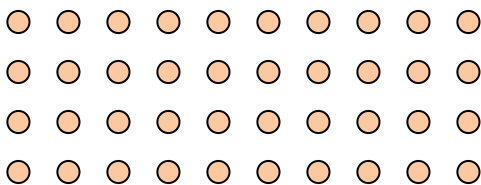
6) How many groups of 5 can you make with the 15 shapes below?




7) How many groups of 6 can you make with the 12 shapes below?



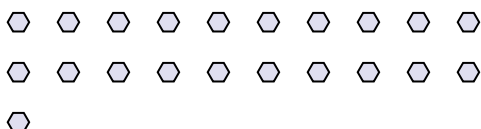
8) How many groups of 5 can you make with the 40 shapes below?




9) How many groups of 4 can you make with the 40 shapes below?



10) How many groups of 7 can you make with the 21 shapes below?



11) How many groups of 8 can you make with the 40 shapes below?



Answers

Ex. 3

1. 6

2. 8

3. 5

4. 3

5. 5

6. 3

7. 2

8. 8

9. 10

10. 3

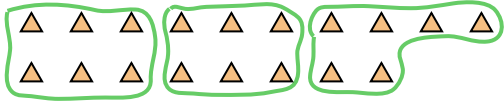
11. 5






Use the shapes provided to answer the questions.

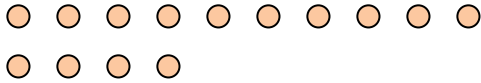
Ex) How many groups of 6 can you make with the 18 shapes below?



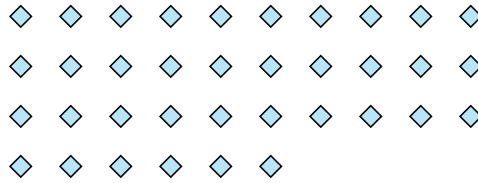
1) How many groups of 4 can you make with the 20 shapes below?



2) How many groups of 7 can you make with the 14 shapes below?



3) How many groups of 6 can you make with the 36 shapes below?




4) How many groups of 5 can you make with the 20 shapes below?



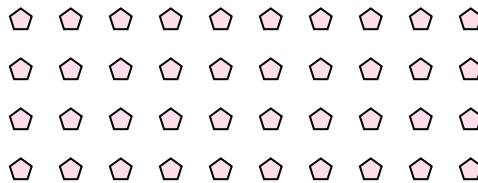
5) How many groups of 7 can you make with the 35 shapes below?



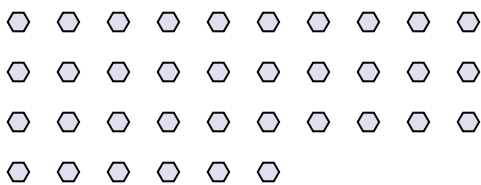
6) How many groups of 4 can you make with the 32 shapes below?




7) How many groups of 2 can you make with the 40 shapes below?



8) How many groups of 9 can you make with the 36 shapes below?



9) How many groups of 4 can you make with the 32 shapes below?



10) How many groups of 2 can you make with the 6 shapes below?



11) How many groups of 6 can you make with the 18 shapes below?



Answers

Ex. 3

1. 5

2. 2

3. 6

4. 4

5. 5

6. 8

7. 20

8. 4

9. 8

10. 3

11. 3