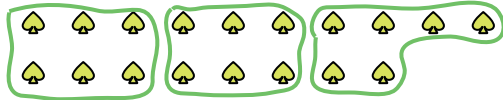




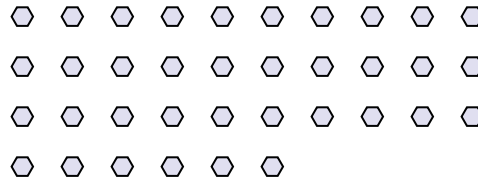


Use the shapes provided to answer the questions.

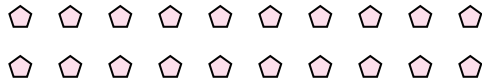
Ex) How many groups of 6 can you make with the 18 shapes below?




1) How many groups of 6 can you make with the 36 shapes below?



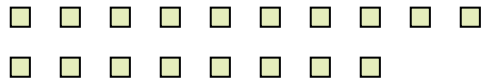
2) How many groups of 5 can you make with the 20 shapes below?



3) How many groups of 6 can you make with the 18 shapes below?



4) How many groups of 9 can you make with the 18 shapes below?




5) How many groups of 9 can you make with the 27 shapes below?



6) How many groups of 9 can you make with the 18 shapes below?



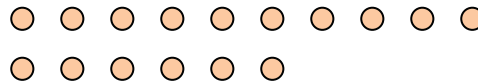
7) How many groups of 7 can you make with the 35 shapes below?



8) How many groups of 9 can you make with the 36 shapes below?



9) How many groups of 2 can you make with the 16 shapes below?



10) How many groups of 8 can you make with the 24 shapes below?



11) How many groups of 6 can you make with the 12 shapes below?



Answers

Ex. 3

1. 6

2. 4

3. 3

4. 2

5. 3

6. 2

7. 5

8. 4

9. 8

10. 3

11. 2