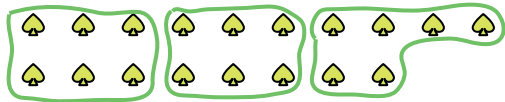







Use the shapes provided to answer the questions.

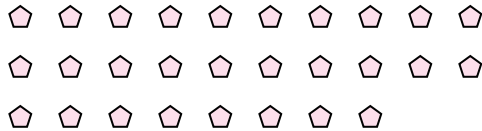
Ex) How many groups of 6 can you make with the 18 shapes below?



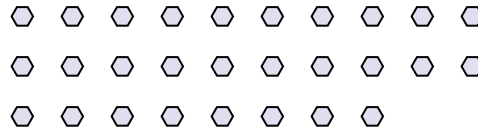
1) How many groups of 9 can you make with the 36 shapes below?



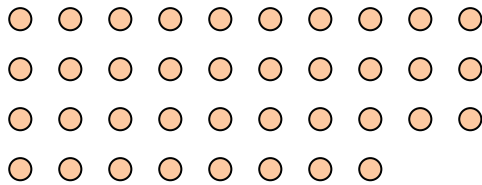
2) How many groups of 4 can you make with the 28 shapes below?



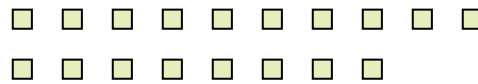
3) How many groups of 7 can you make with the 28 shapes below?



4) How many groups of 2 can you make with the 38 shapes below?



5) How many groups of 6 can you make with the 18 shapes below?




6) How many groups of 6 can you make with the 12 shapes below?



7) How many groups of 6 can you make with the 12 shapes below?




8) How many groups of 3 can you make with the 39 shapes below?



9) How many groups of 7 can you make with the 28 shapes below?



10) How many groups of 8 can you make with the 24 shapes below?



11) How many groups of 7 can you make with the 28 shapes below?



Answers

Ex. 3

1. 4

2. 7

3. 4

4. 19

5. 3

6. 2

7. 2

8. 13

9. 4

10. 3

11. 4