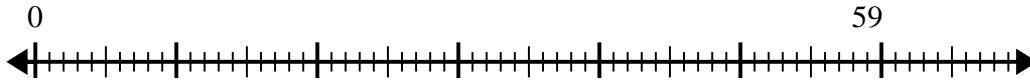


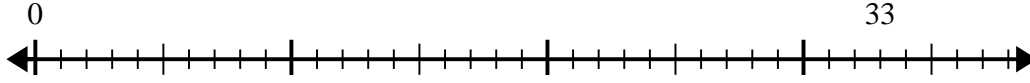


Use the number line to solve the division problem.

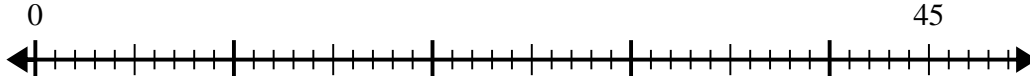
1) $59 \div 7 =$



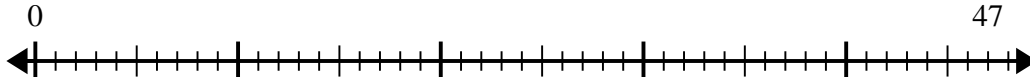
2) $33 \div 8 =$



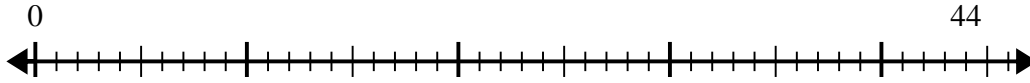
3) $45 \div 6 =$



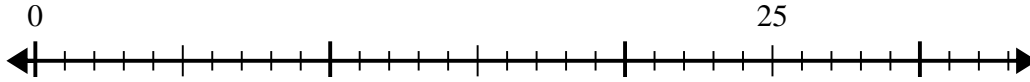
4) $47 \div 7 =$



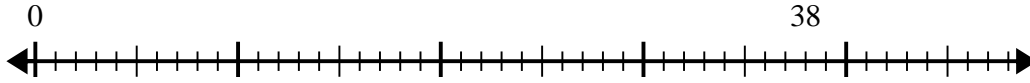
5) $44 \div 5 =$



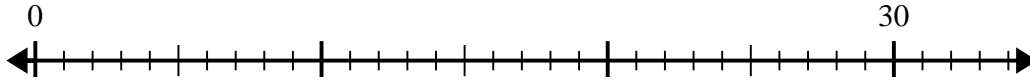
6) $25 \div 6 =$



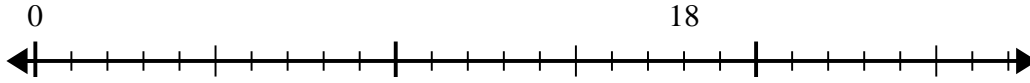
7) $38 \div 5 =$



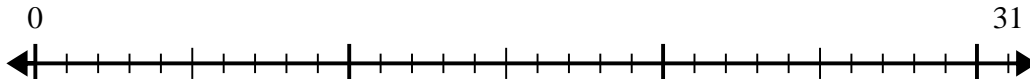
8) $30 \div 8 =$



9) $18 \div 5 =$



10) $31 \div 5 =$



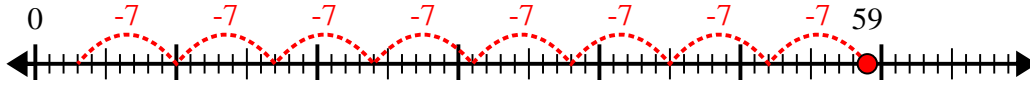
Answers

1. _____
2. _____
3. _____
4. _____
5. _____
6. _____
7. _____
8. _____
9. _____
10. _____

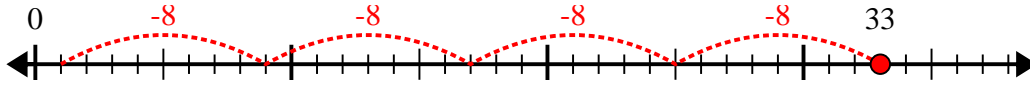


Use the number line to solve the division problem.

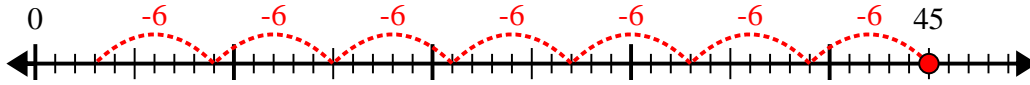
1) $59 \div 7 =$



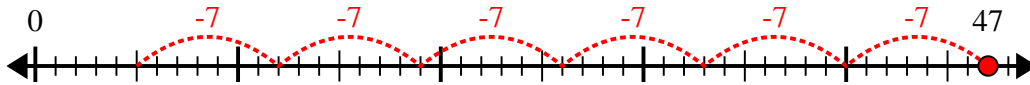
2) $33 \div 8 =$



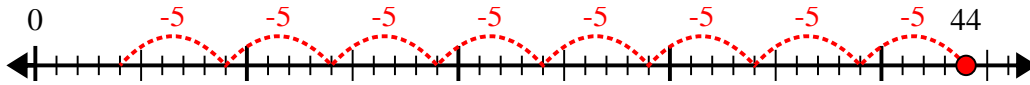
3) $45 \div 6 =$



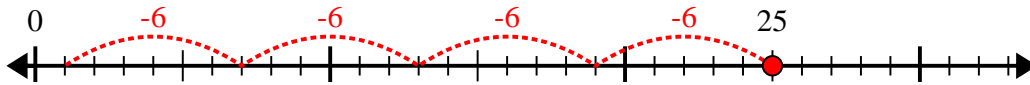
4) $47 \div 7 =$



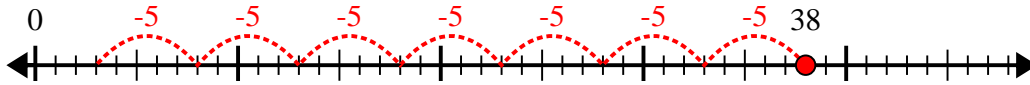
5) $44 \div 5 =$



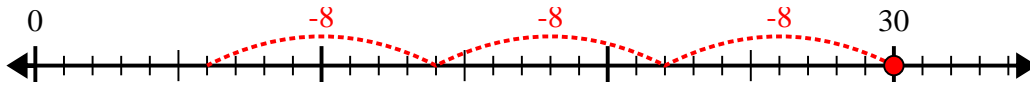
6) $25 \div 6 =$



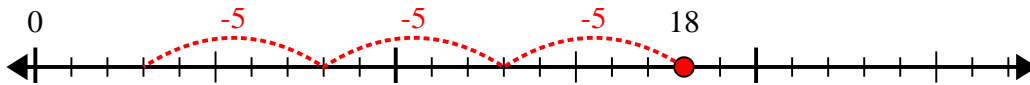
7) $38 \div 5 =$



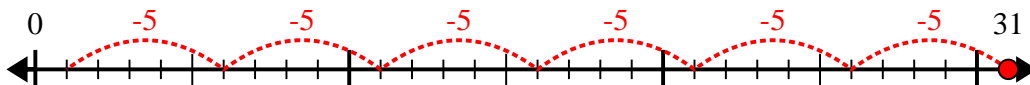
8) $30 \div 8 =$



9) $18 \div 5 =$



10) $31 \div 5 =$



Answers

1. 8r3

2. 4r1

3. 7r3

4. 6r5

5. 8r4

6. 4r1

7. 7r3

8. 3r6

9. 3r3

10. 6r1