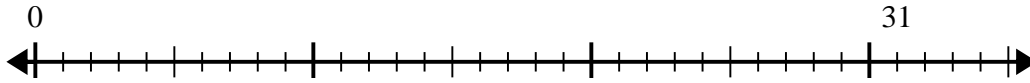


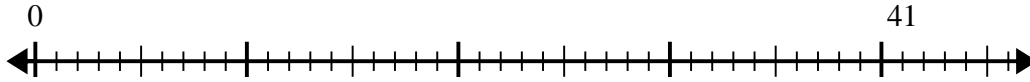


Use the number line to solve the division problem.

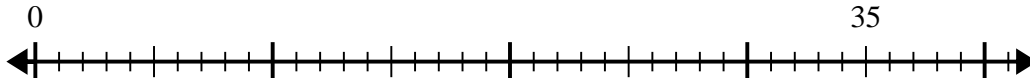
1) $31 \div 6 =$



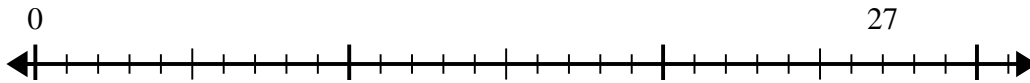
2) $41 \div 8 =$



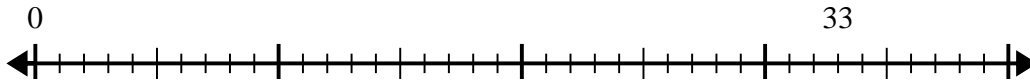
3) $35 \div 8 =$



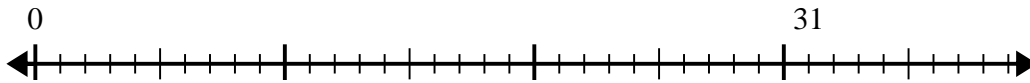
4) $27 \div 7 =$



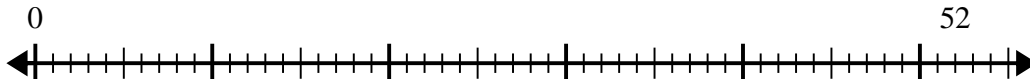
5) $33 \div 4 =$



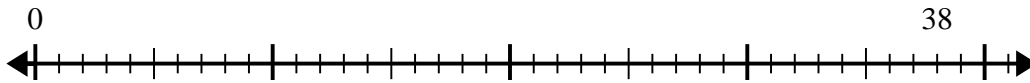
6) $31 \div 5 =$



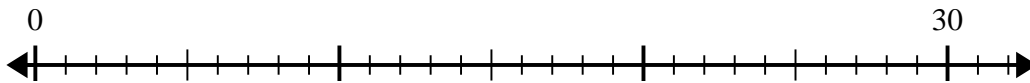
7) $52 \div 8 =$



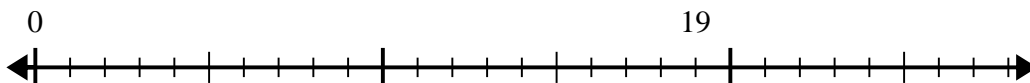
8) $38 \div 5 =$



9) $30 \div 4 =$



10) $19 \div 5 =$



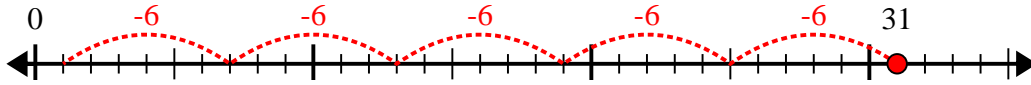
Answers

1. _____
2. _____
3. _____
4. _____
5. _____
6. _____
7. _____
8. _____
9. _____
10. _____

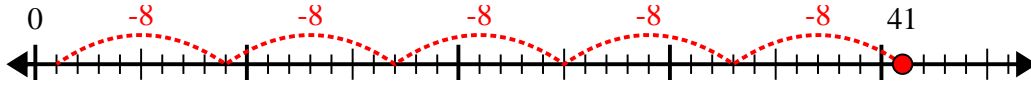


Use the number line to solve the division problem.

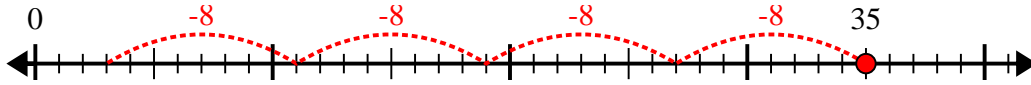
1) $31 \div 6 =$



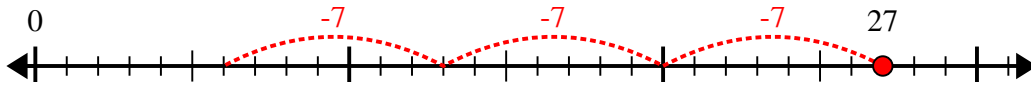
2) $41 \div 8 =$



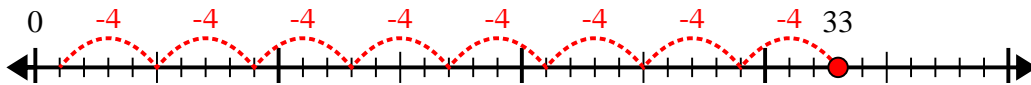
3) $35 \div 8 =$



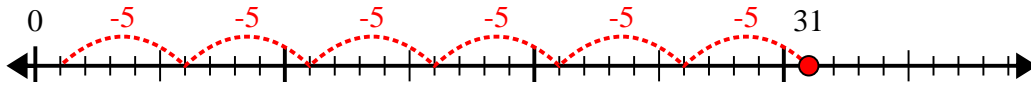
4) $27 \div 7 =$



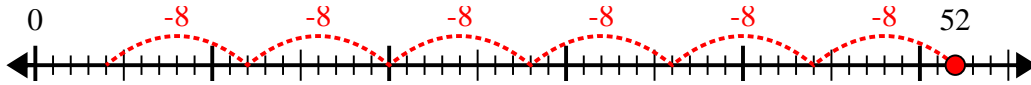
5) $33 \div 4 =$



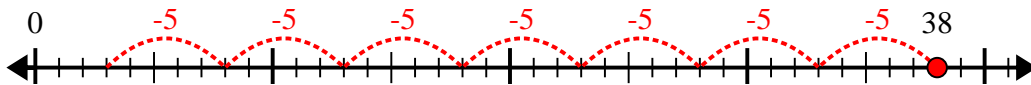
6) $31 \div 5 =$



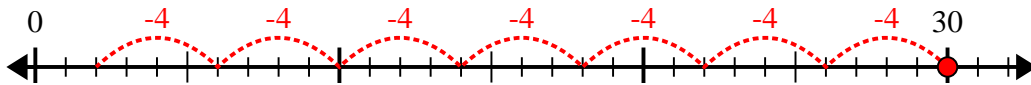
7) $52 \div 8 =$



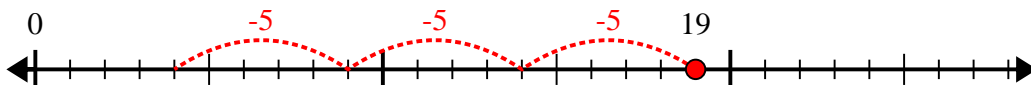
8) $38 \div 5 =$



9) $30 \div 4 =$



10) $19 \div 5 =$



Answers

1. 5r1

2. 5r1

3. 4r3

4. 3r6

5. 8r1

6. 6r1

7. 6r4

8. 7r3

9. 7r2

10. 3r4