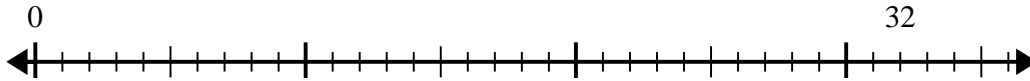




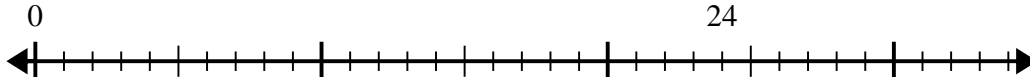
Use the number line to solve the division problem.

Answers

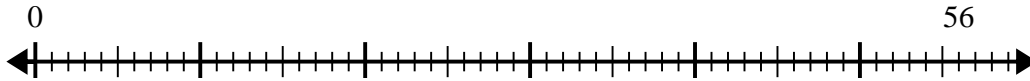
1) $32 \div 4 =$



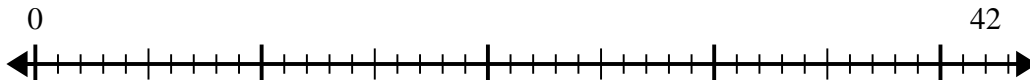
2) $24 \div 8 =$



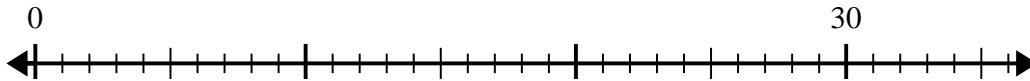
3) $56 \div 8 =$



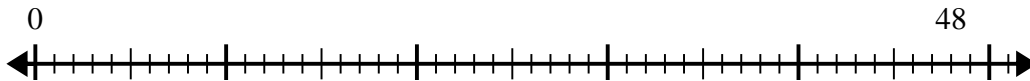
4) $42 \div 7 =$



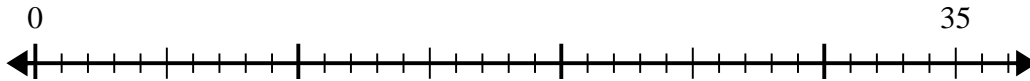
5) $30 \div 6 =$



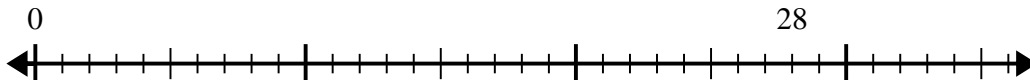
6) $48 \div 6 =$



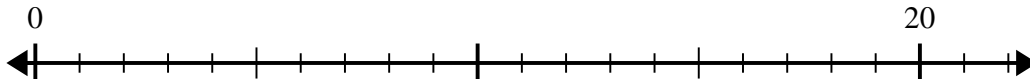
7) $35 \div 5 =$



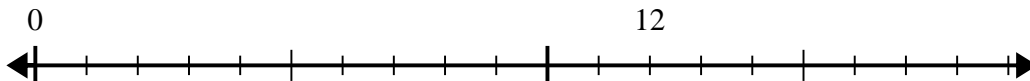
8) $28 \div 7 =$



9) $20 \div 4 =$



10) $12 \div 4 =$

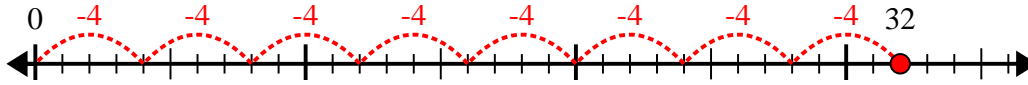


- 1. _____
- 2. _____
- 3. _____
- 4. _____
- 5. _____
- 6. _____
- 7. _____
- 8. _____
- 9. _____
- 10. _____

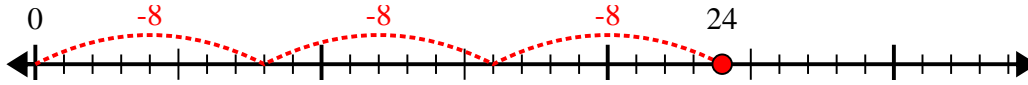


Use the number line to solve the division problem.

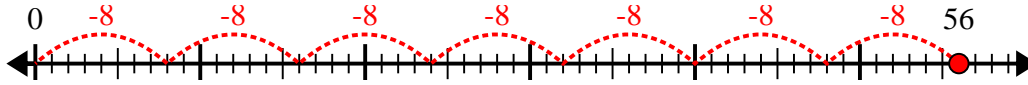
1) $32 \div 4 =$



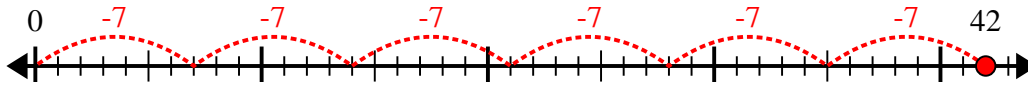
2) $24 \div 8 =$



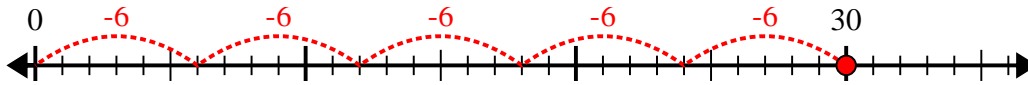
3) $56 \div 8 =$



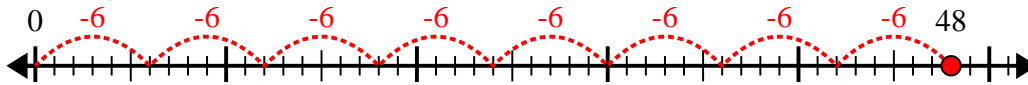
4) $42 \div 7 =$



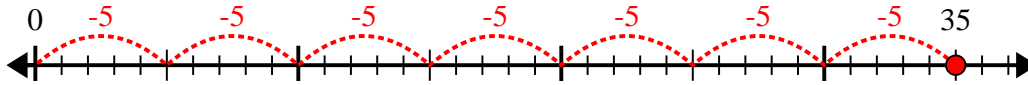
5) $30 \div 6 =$



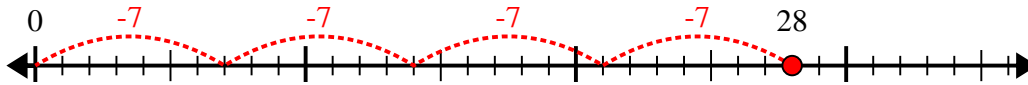
6) $48 \div 6 =$



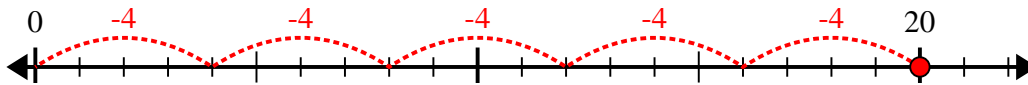
7) $35 \div 5 =$



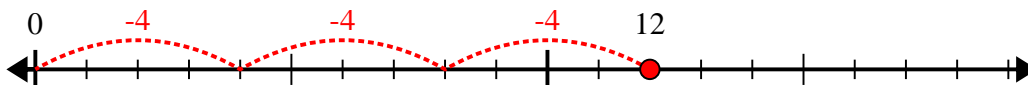
8) $28 \div 7 =$



9) $20 \div 4 =$



10) $12 \div 4 =$



Answers

1. 8

2. 3

3. 7

4. 6

5. 5

6. 8

7. 7

8. 4

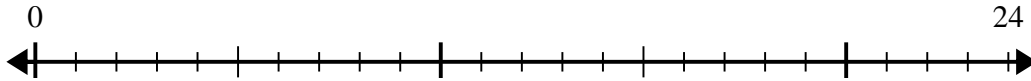
9. 5

10. 3

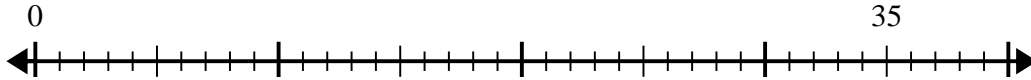


Use the number line to solve the division problem.

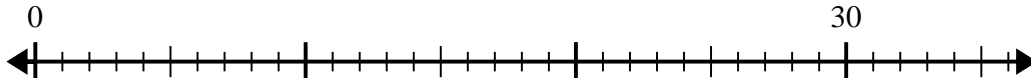
1) $24 \div 8 =$



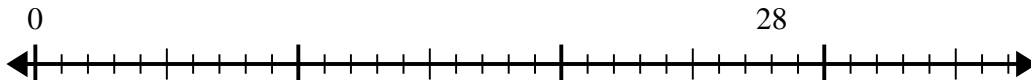
2) $35 \div 7 =$



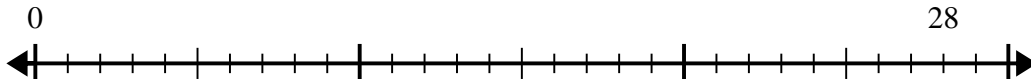
3) $30 \div 6 =$



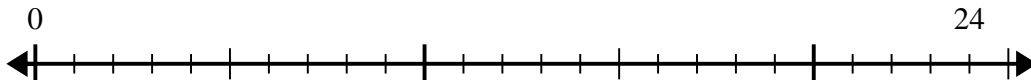
4) $28 \div 4 =$



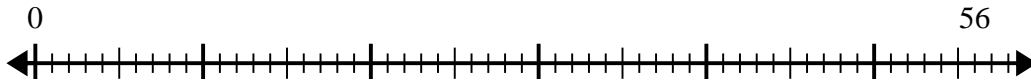
5) $28 \div 7 =$



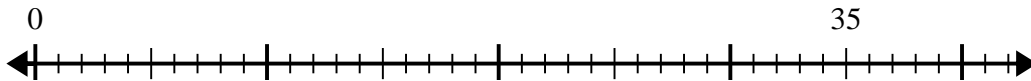
6) $24 \div 6 =$



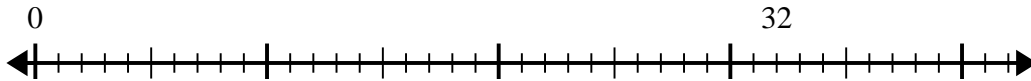
7) $56 \div 8 =$



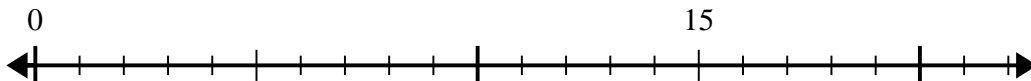
8) $35 \div 5 =$



9) $32 \div 4 =$



10) $15 \div 5 =$



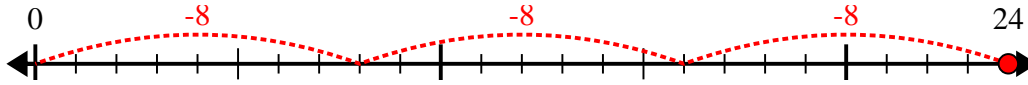
Answers

- 1. _____
- 2. _____
- 3. _____
- 4. _____
- 5. _____
- 6. _____
- 7. _____
- 8. _____
- 9. _____
- 10. _____

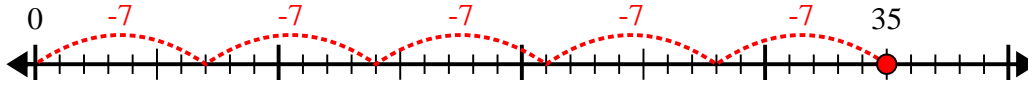


Use the number line to solve the division problem.

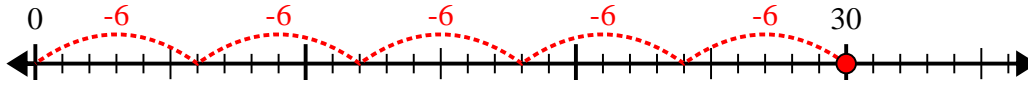
1) $24 \div 8 =$



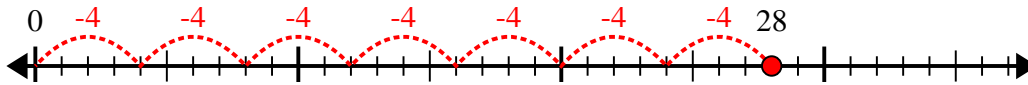
2) $35 \div 7 =$



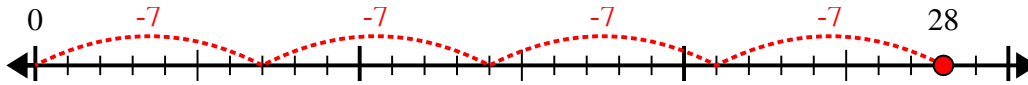
3) $30 \div 6 =$



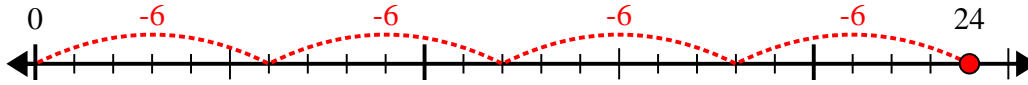
4) $28 \div 4 =$



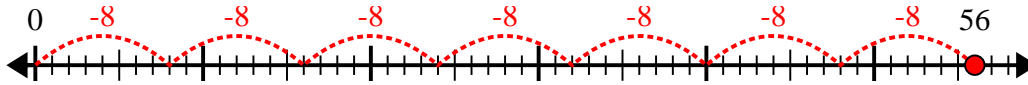
5) $28 \div 7 =$



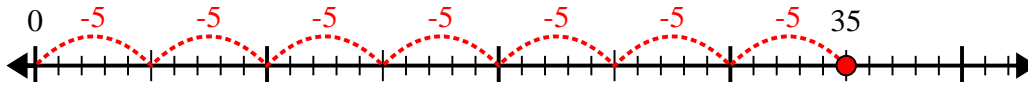
6) $24 \div 6 =$



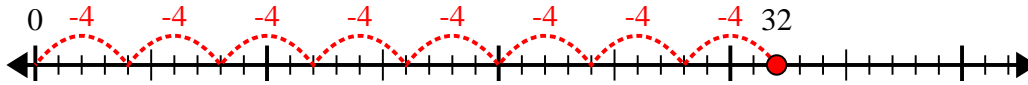
7) $56 \div 8 =$



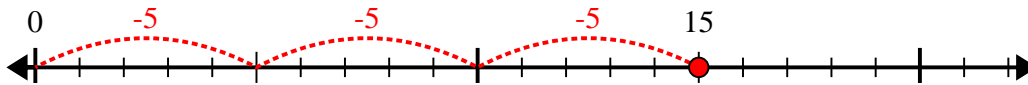
8) $35 \div 5 =$



9) $32 \div 4 =$



10) $15 \div 5 =$



Answers

1. 3

2. 5

3. 5

4. 7

5. 4

6. 4

7. 7

8. 7

9. 8

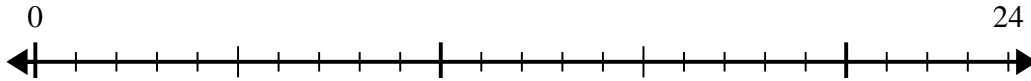
10. 3



Use the number line to solve the division problem.

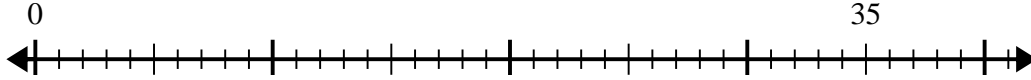
Answers

1) $24 \div 6 =$



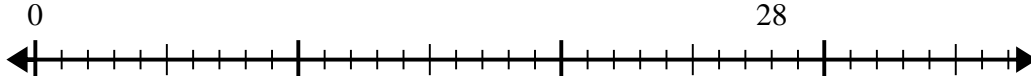
1. _____

2) $35 \div 5 =$



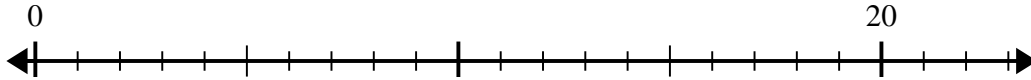
2. _____

3) $28 \div 4 =$



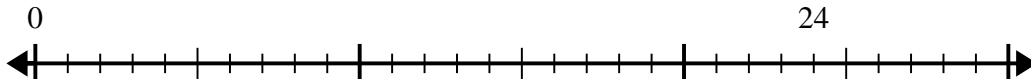
3. _____

4) $20 \div 5 =$



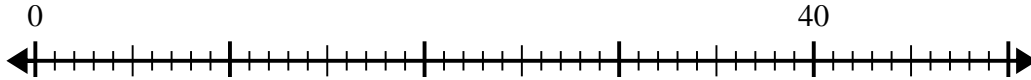
4. _____

5) $24 \div 8 =$



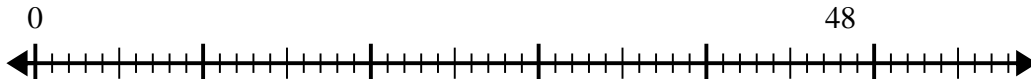
5. _____

6) $40 \div 8 =$



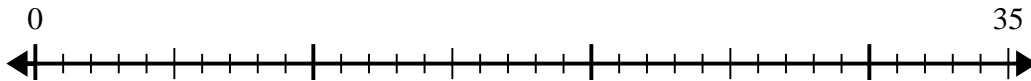
6. _____

7) $48 \div 6 =$



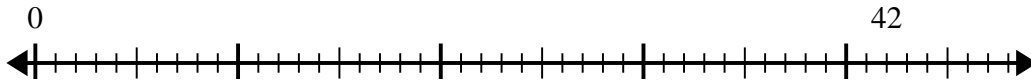
7. _____

8) $35 \div 7 =$



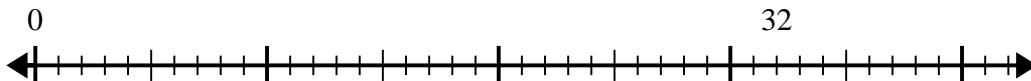
8. _____

9) $42 \div 7 =$



9. _____

10) $32 \div 8 =$

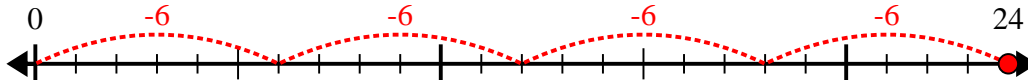


10. _____

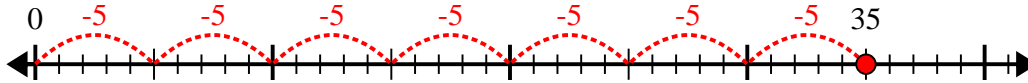


Use the number line to solve the division problem.

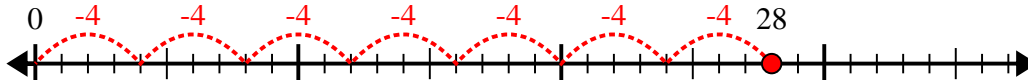
1) $24 \div 6 =$



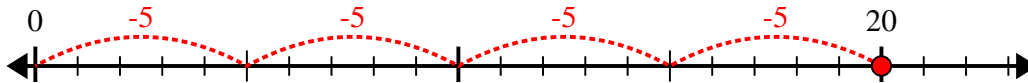
2) $35 \div 5 =$



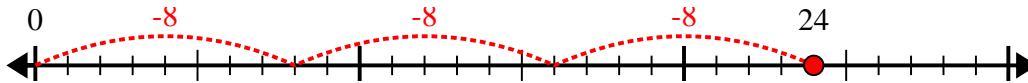
3) $28 \div 4 =$



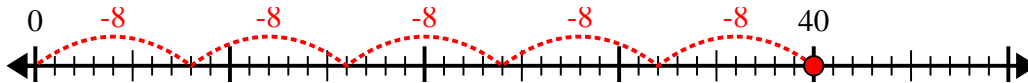
4) $20 \div 5 =$



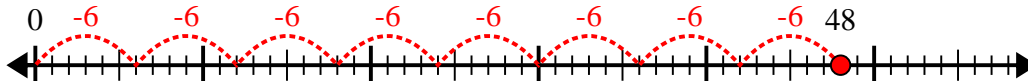
5) $24 \div 8 =$



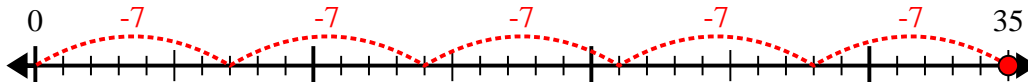
6) $40 \div 8 =$



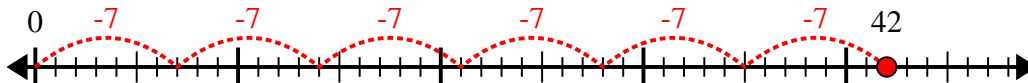
7) $48 \div 6 =$



8) $35 \div 7 =$



9) $42 \div 7 =$



10) $32 \div 8 =$



Answers

1. 4

2. 7

3. 7

4. 4

5. 3

6. 5

7. 8

8. 5

9. 6

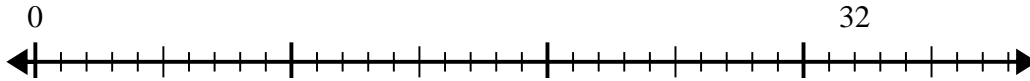
10. 4



Use the number line to solve the division problem.

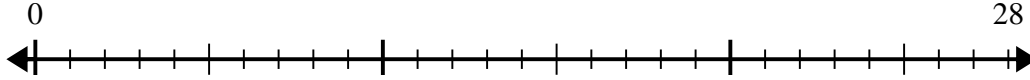
Answers

1) $32 \div 8 =$



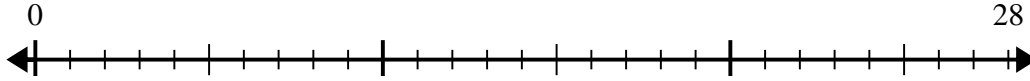
1. _____

2) $28 \div 4 =$



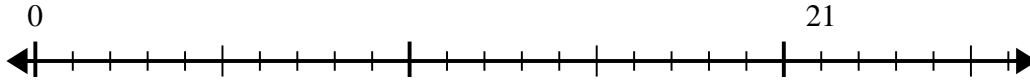
2. _____

3) $28 \div 7 =$



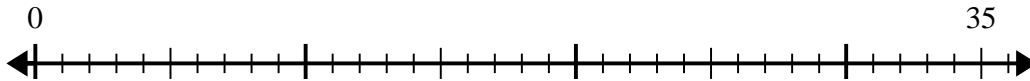
3. _____

4) $21 \div 7 =$



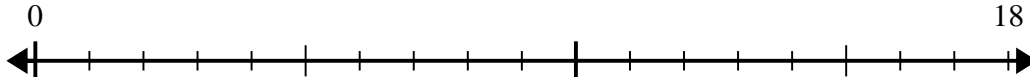
4. _____

5) $35 \div 7 =$



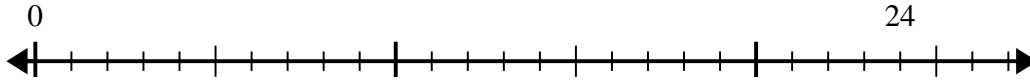
5. _____

6) $18 \div 6 =$



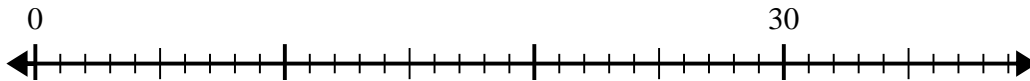
6. _____

7) $24 \div 4 =$



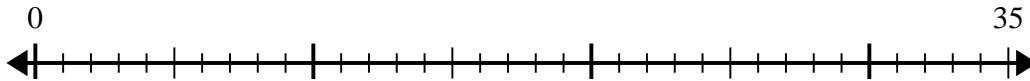
7. _____

8) $30 \div 6 =$



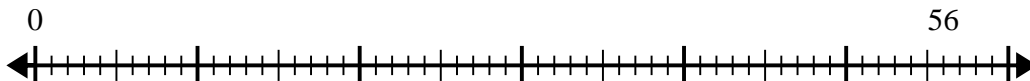
8. _____

9) $35 \div 5 =$



9. _____

10) $56 \div 7 =$

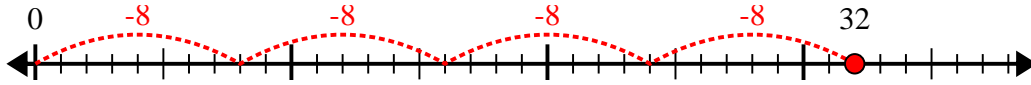


10. _____

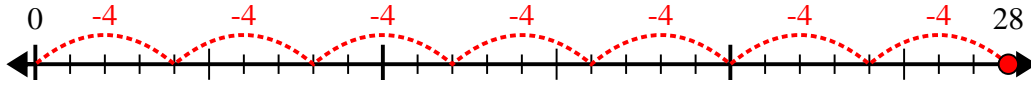


Use the number line to solve the division problem.

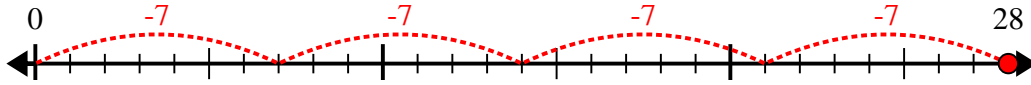
1) $32 \div 8 =$



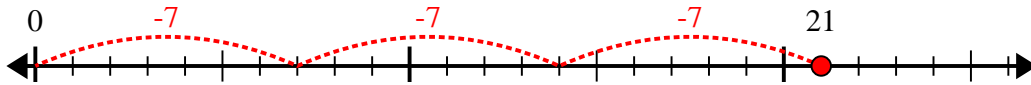
2) $28 \div 4 =$



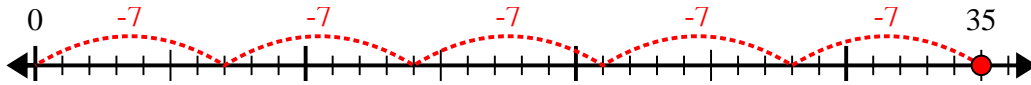
3) $28 \div 7 =$



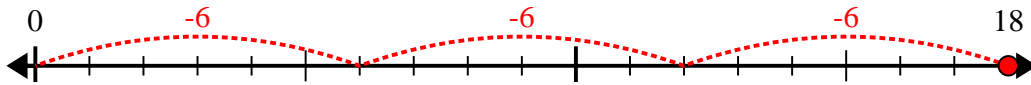
4) $21 \div 7 =$



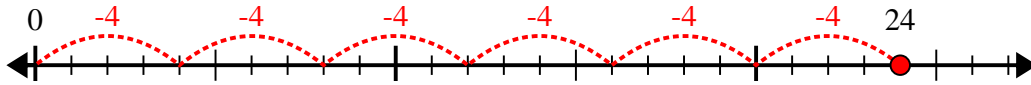
5) $35 \div 7 =$



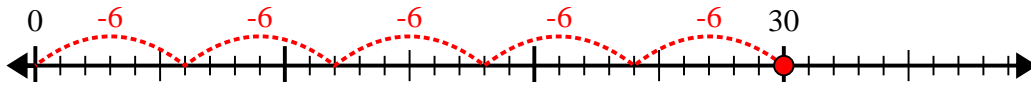
6) $18 \div 6 =$



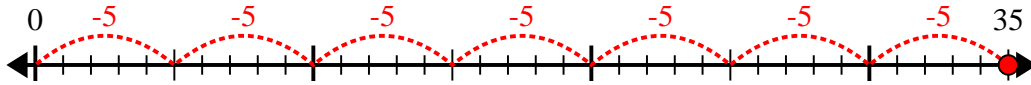
7) $24 \div 4 =$



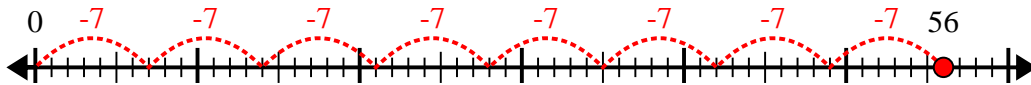
8) $30 \div 6 =$



9) $35 \div 5 =$



10) $56 \div 7 =$



Answers

1. 4

2. 7

3. 4

4. 3

5. 5

6. 3

7. 6

8. 5

9. 7

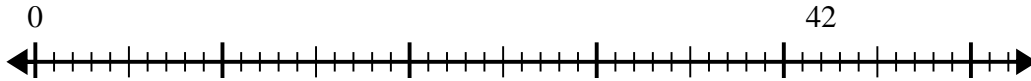
10. 8



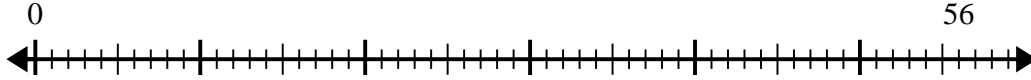
Use the number line to solve the division problem.

Answers

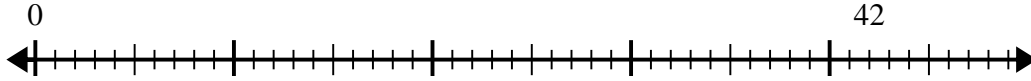
1) $42 \div 7 =$



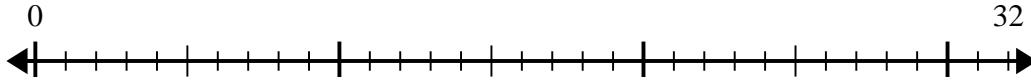
2) $56 \div 8 =$



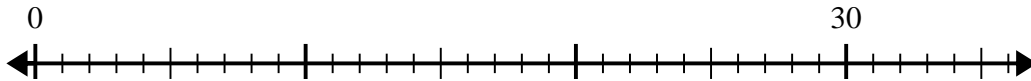
3) $42 \div 6 =$



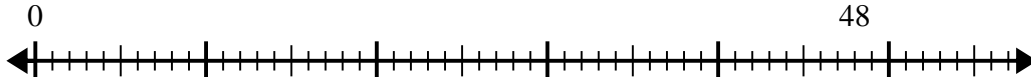
4) $32 \div 4 =$



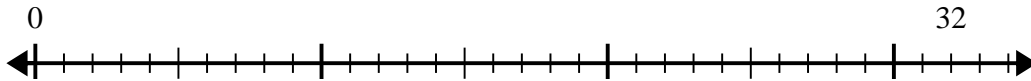
5) $30 \div 5 =$



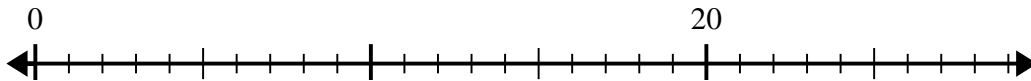
6) $48 \div 6 =$



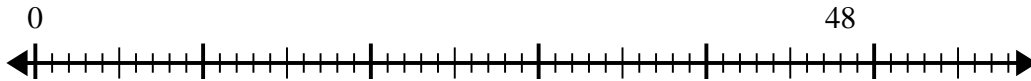
7) $32 \div 8 =$



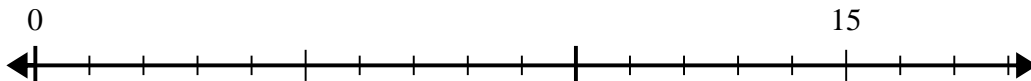
8) $20 \div 4 =$



9) $48 \div 8 =$



10) $15 \div 5 =$

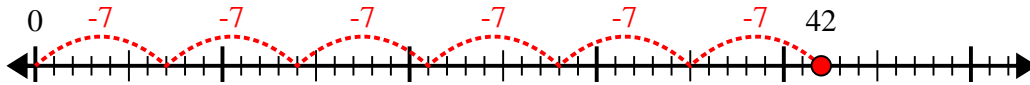


- 1. _____
- 2. _____
- 3. _____
- 4. _____
- 5. _____
- 6. _____
- 7. _____
- 8. _____
- 9. _____
- 10. _____

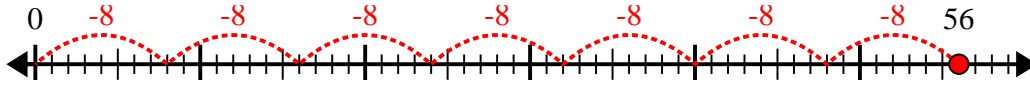


Use the number line to solve the division problem.

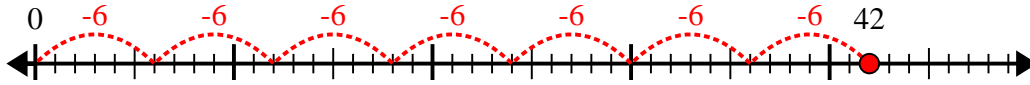
1) $42 \div 7 =$



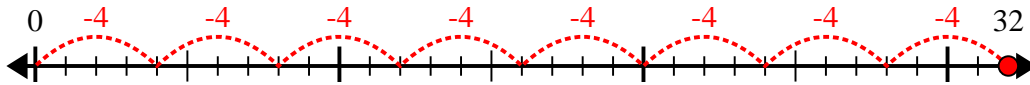
2) $56 \div 8 =$



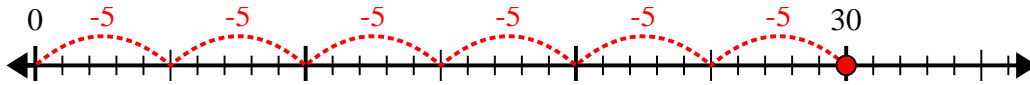
3) $42 \div 6 =$



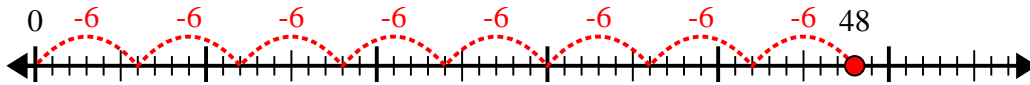
4) $32 \div 4 =$



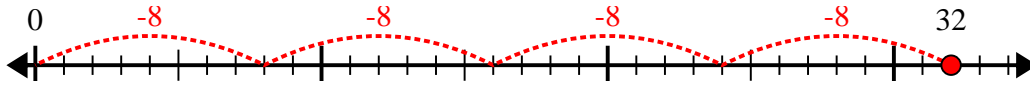
5) $30 \div 5 =$



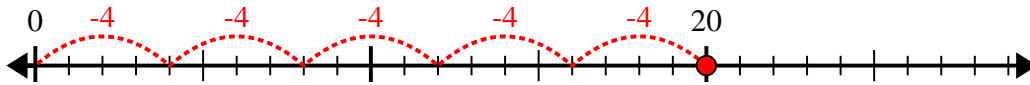
6) $48 \div 6 =$



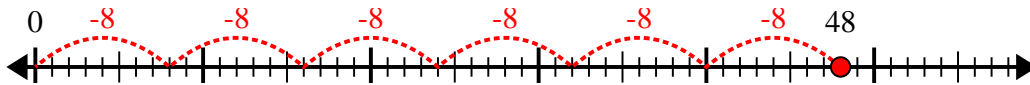
7) $32 \div 8 =$



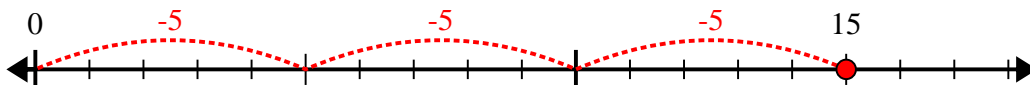
8) $20 \div 4 =$



9) $48 \div 8 =$



10) $15 \div 5 =$



Answers

1. 6

2. 7

3. 7

4. 8

5. 6

6. 8

7. 4

8. 5

9. 6

10. 3

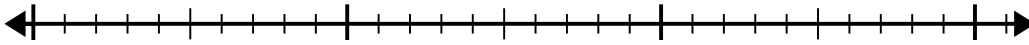


Use the number line to solve the division problem.

1) $28 \div 4 =$

0

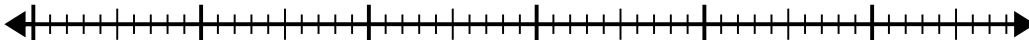
28



2) $48 \div 6 =$

0

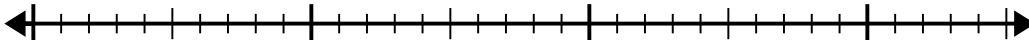
48



3) $35 \div 5 =$

0

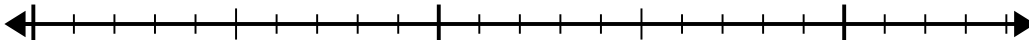
35



4) $21 \div 7 =$

0

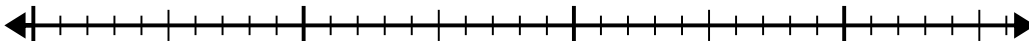
21



5) $35 \div 7 =$

0

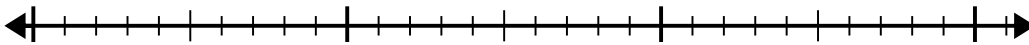
35



6) $24 \div 4 =$

0

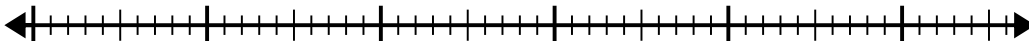
24



7) $48 \div 8 =$

0

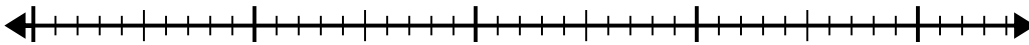
48



8) $40 \div 8 =$

0

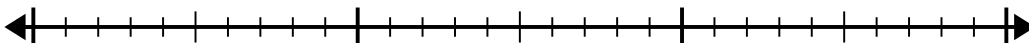
40



9) $20 \div 4 =$

0

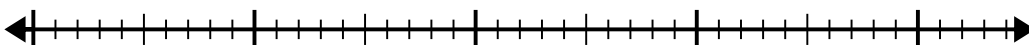
20



10) $42 \div 6 =$

0

42



Answers

1. _____

2. _____

3. _____

4. _____

5. _____

6. _____

7. _____

8. _____

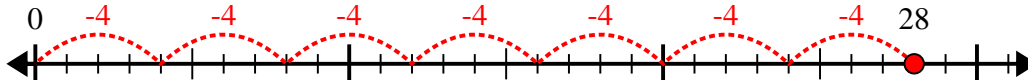
9. _____

10. _____

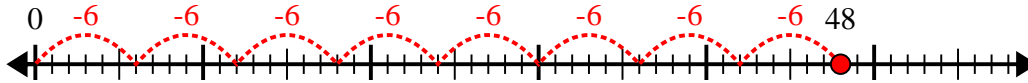


Use the number line to solve the division problem.

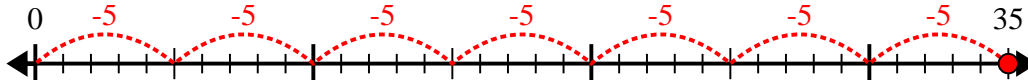
1) $28 \div 4 =$



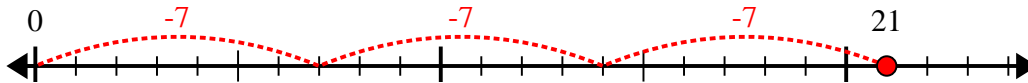
2) $48 \div 6 =$



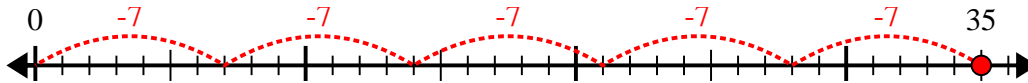
3) $35 \div 5 =$



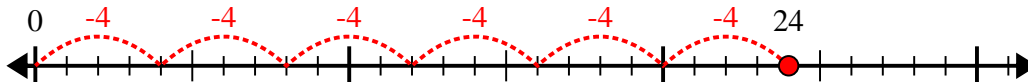
4) $21 \div 7 =$



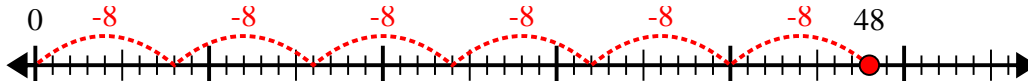
5) $35 \div 7 =$



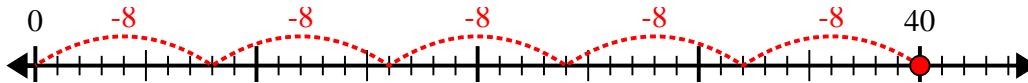
6) $24 \div 4 =$



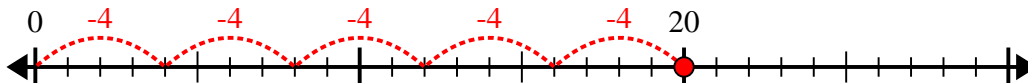
7) $48 \div 8 =$



8) $40 \div 8 =$



9) $20 \div 4 =$



10) $42 \div 6 =$



Answers

1. 7

2. 8

3. 7

4. 3

5. 5

6. 6

7. 6

8. 5

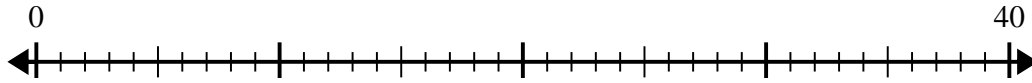
9. 5

10. 7

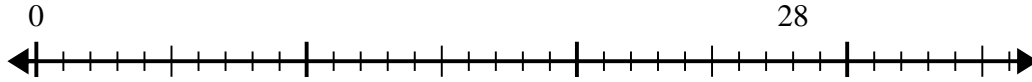


Use the number line to solve the division problem.

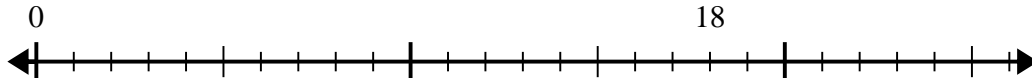
1) $40 \div 8 =$



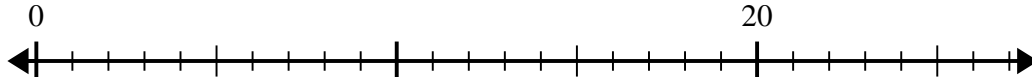
2) $28 \div 7 =$



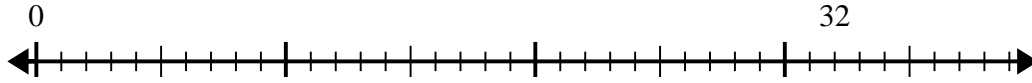
3) $18 \div 6 =$



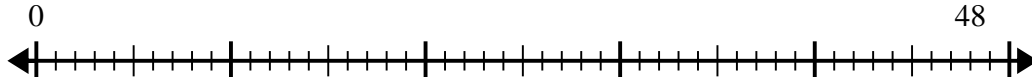
4) $20 \div 4 =$



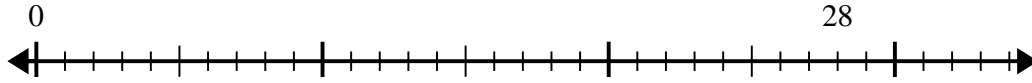
5) $32 \div 8 =$



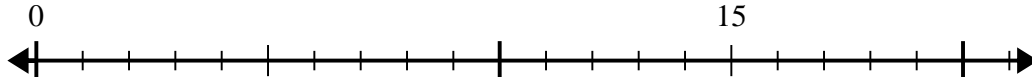
6) $48 \div 8 =$



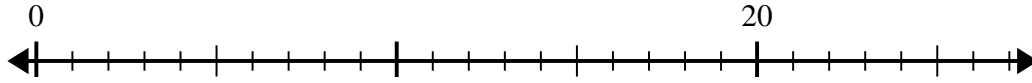
7) $28 \div 4 =$



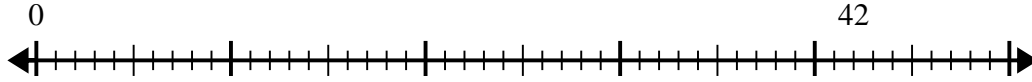
8) $15 \div 5 =$



9) $20 \div 5 =$



10) $42 \div 6 =$



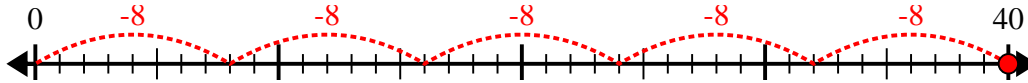
Answers

- 1. _____
- 2. _____
- 3. _____
- 4. _____
- 5. _____
- 6. _____
- 7. _____
- 8. _____
- 9. _____
- 10. _____

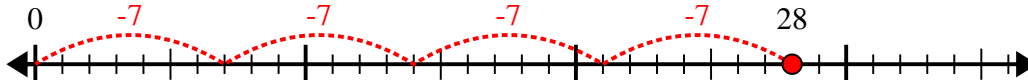


Use the number line to solve the division problem.

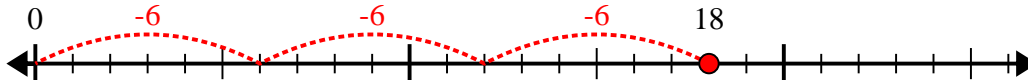
1) $40 \div 8 =$



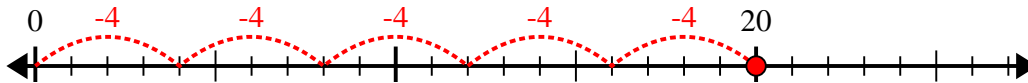
2) $28 \div 7 =$



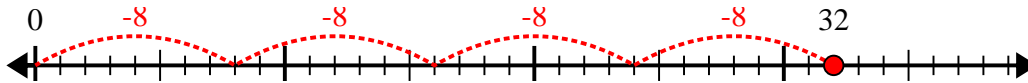
3) $18 \div 6 =$



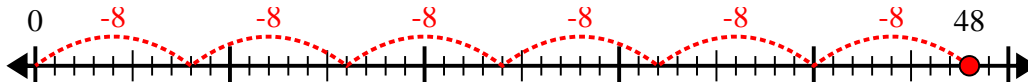
4) $20 \div 4 =$



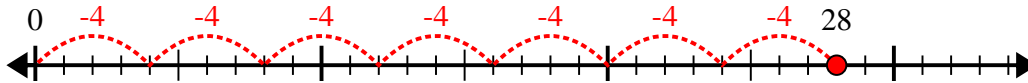
5) $32 \div 8 =$



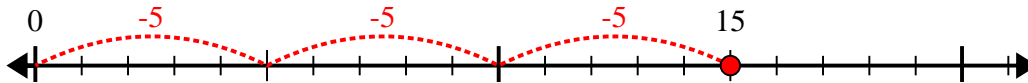
6) $48 \div 8 =$



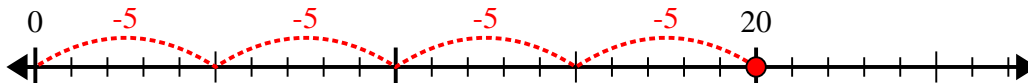
7) $28 \div 4 =$



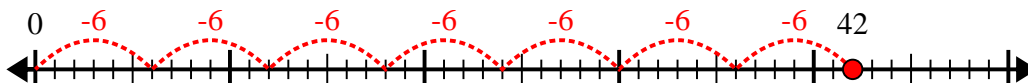
8) $15 \div 5 =$



9) $20 \div 5 =$



10) $42 \div 6 =$



Answers

1. 5

2. 4

3. 3

4. 5

5. 4

6. 6

7. 7

8. 3

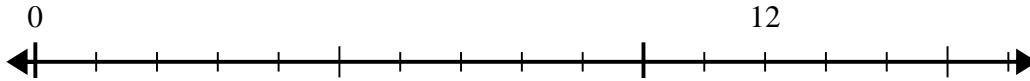
9. 4

10. 7

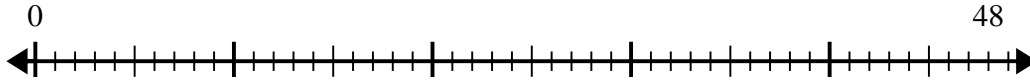


Use the number line to solve the division problem.

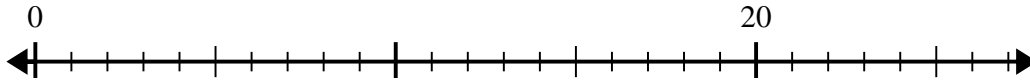
1) $12 \div 4 =$



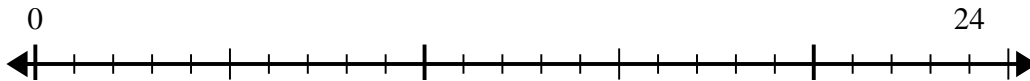
2) $48 \div 6 =$



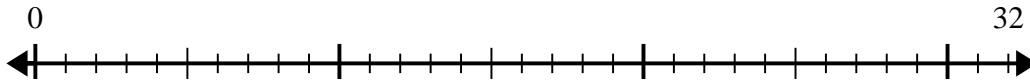
3) $20 \div 4 =$



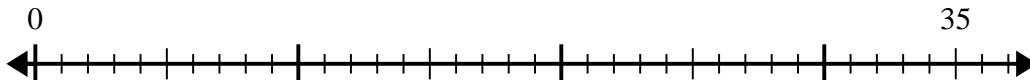
4) $24 \div 8 =$



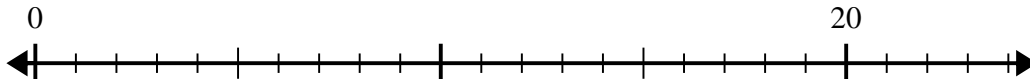
5) $32 \div 4 =$



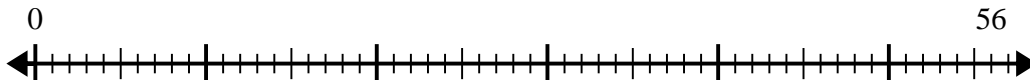
6) $35 \div 7 =$



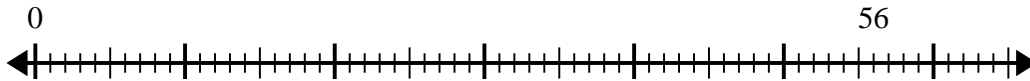
7) $20 \div 5 =$



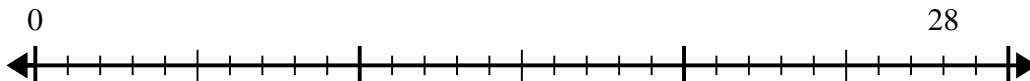
8) $56 \div 7 =$



9) $56 \div 8 =$



10) $28 \div 4 =$



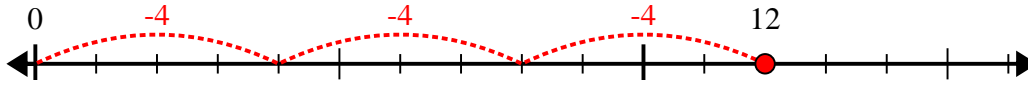
Answers

1. _____
2. _____
3. _____
4. _____
5. _____
6. _____
7. _____
8. _____
9. _____
10. _____

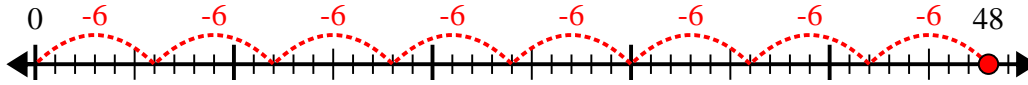


Use the number line to solve the division problem.

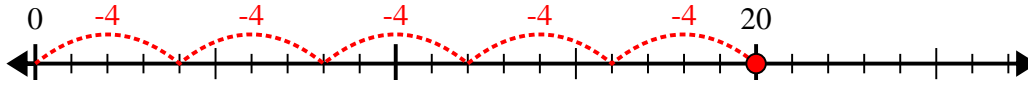
1) $12 \div 4 =$



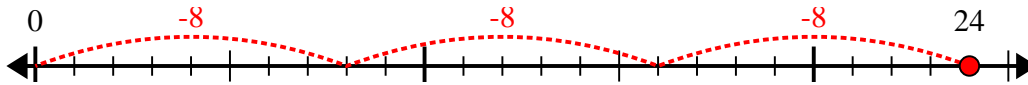
2) $48 \div 6 =$



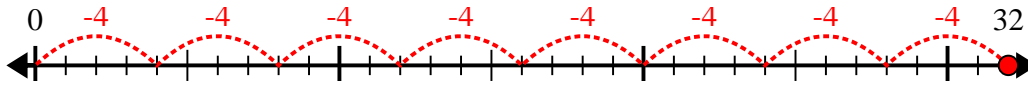
3) $20 \div 4 =$



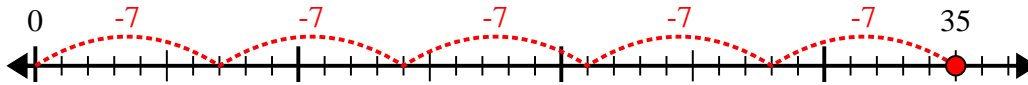
4) $24 \div 8 =$



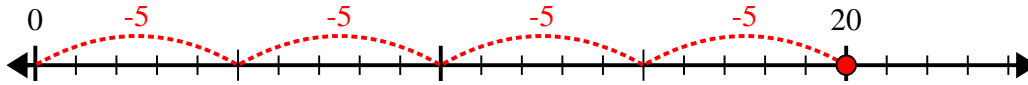
5) $32 \div 4 =$



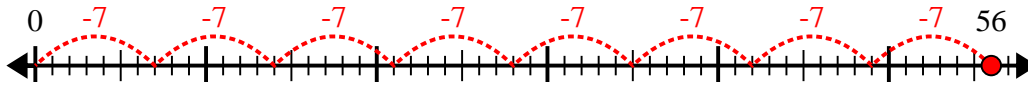
6) $35 \div 7 =$



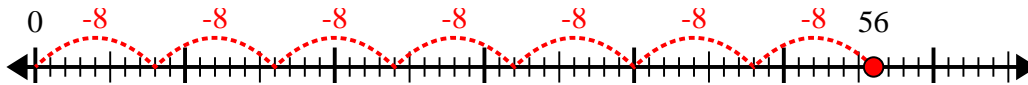
7) $20 \div 5 =$



8) $56 \div 7 =$



9) $56 \div 8 =$



10) $28 \div 4 =$



Answers

1. 3

2. 8

3. 5

4. 3

5. 8

6. 5

7. 4

8. 8

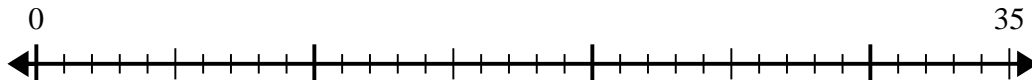
9. 7

10. 7

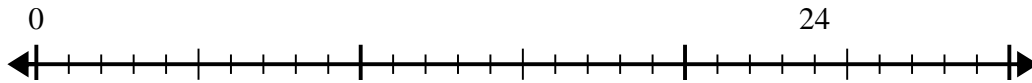


Use the number line to solve the division problem.

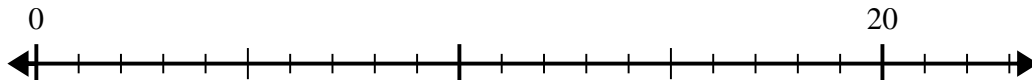
1) $35 \div 7 =$



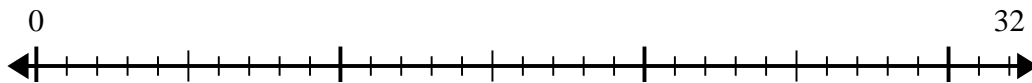
2) $24 \div 6 =$



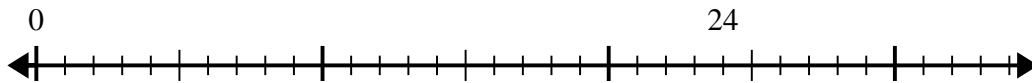
3) $20 \div 5 =$



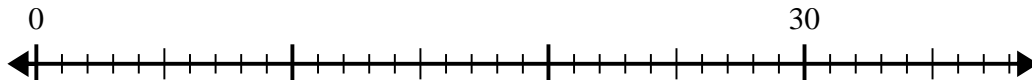
4) $32 \div 4 =$



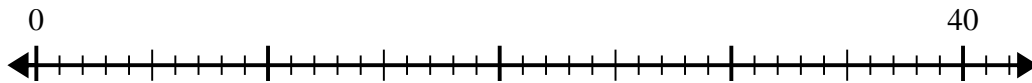
5) $24 \div 4 =$



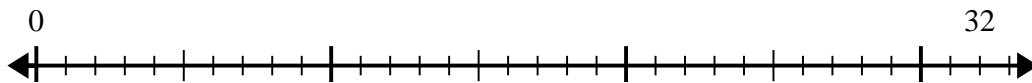
6) $30 \div 6 =$



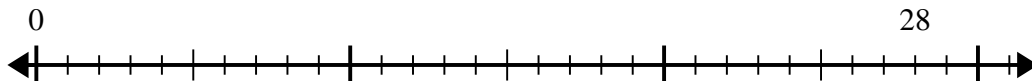
7) $40 \div 5 =$



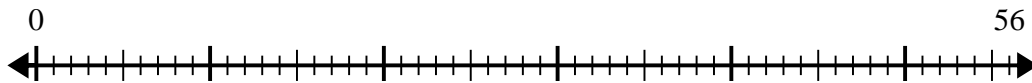
8) $32 \div 8 =$



9) $28 \div 4 =$



10) $56 \div 7 =$



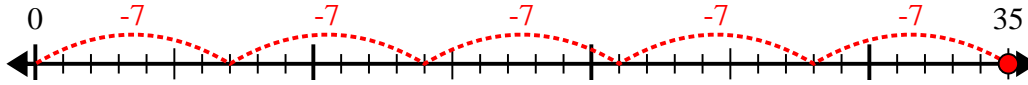
Answers

- 1. _____
- 2. _____
- 3. _____
- 4. _____
- 5. _____
- 6. _____
- 7. _____
- 8. _____
- 9. _____
- 10. _____

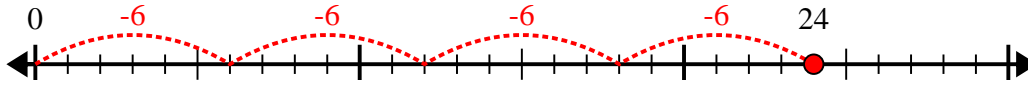


Use the number line to solve the division problem.

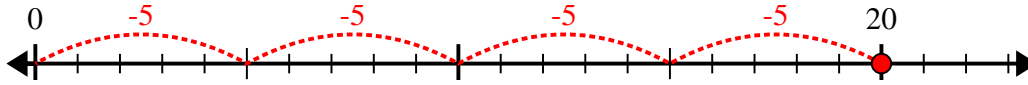
1) $35 \div 7 =$



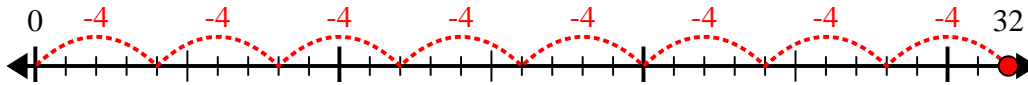
2) $24 \div 6 =$



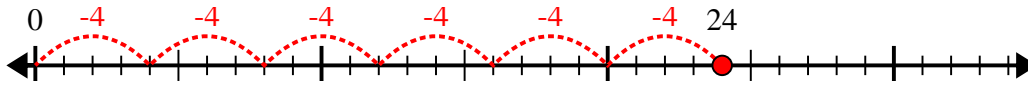
3) $20 \div 5 =$



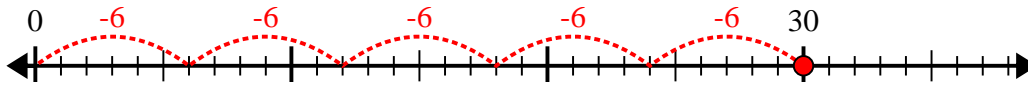
4) $32 \div 4 =$



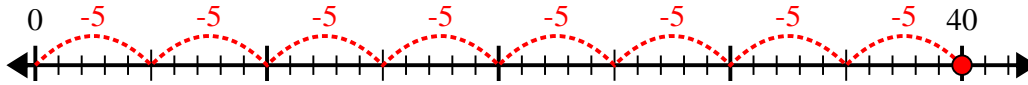
5) $24 \div 4 =$



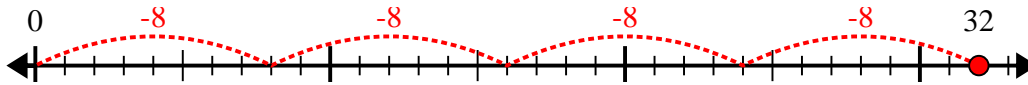
6) $30 \div 6 =$



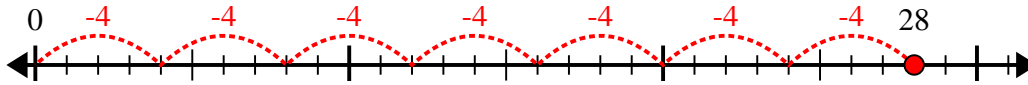
7) $40 \div 5 =$



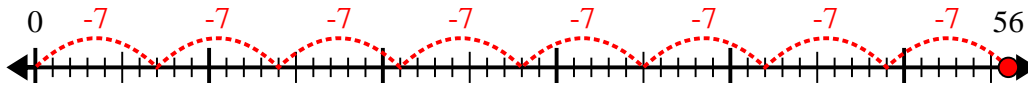
8) $32 \div 8 =$



9) $28 \div 4 =$



10) $56 \div 7 =$



Answers

1. 5

2. 4

3. 4

4. 8

5. 6

6. 5

7. 8

8. 4

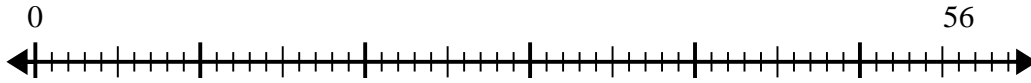
9. 7

10. 8

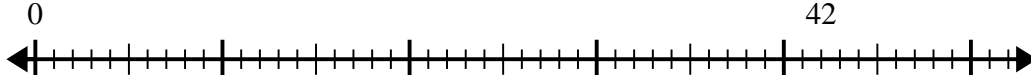


Use the number line to solve the division problem.

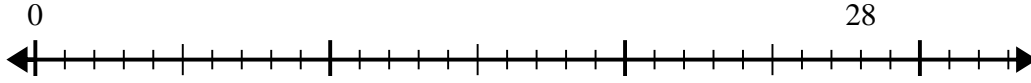
1) $56 \div 8 =$



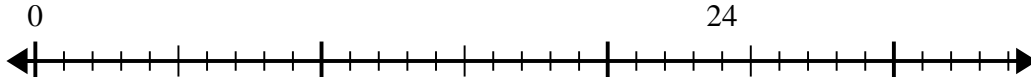
2) $42 \div 6 =$



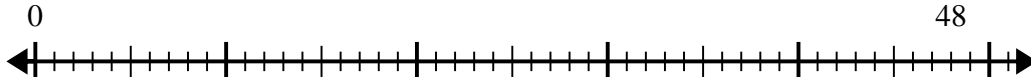
3) $28 \div 7 =$



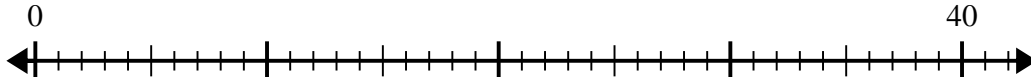
4) $24 \div 6 =$



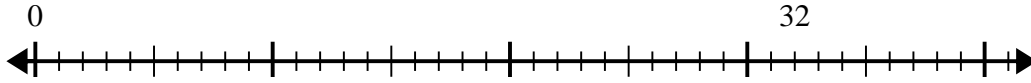
5) $48 \div 6 =$



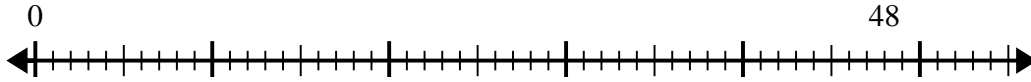
6) $40 \div 8 =$



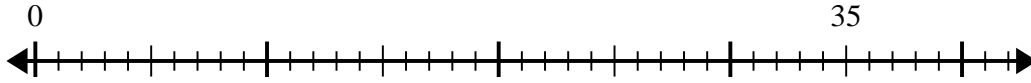
7) $32 \div 8 =$



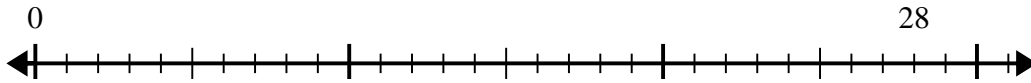
8) $48 \div 8 =$



9) $35 \div 5 =$



10) $28 \div 4 =$



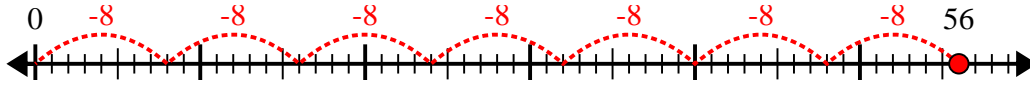
Answers

- 1. _____
- 2. _____
- 3. _____
- 4. _____
- 5. _____
- 6. _____
- 7. _____
- 8. _____
- 9. _____
- 10. _____

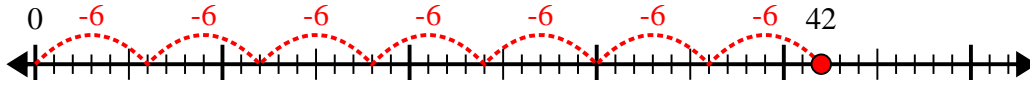


Use the number line to solve the division problem.

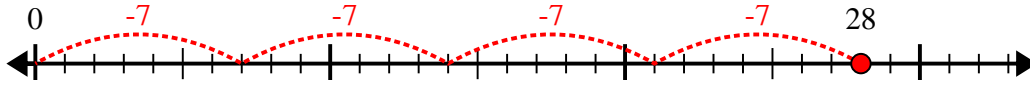
1) $56 \div 8 =$



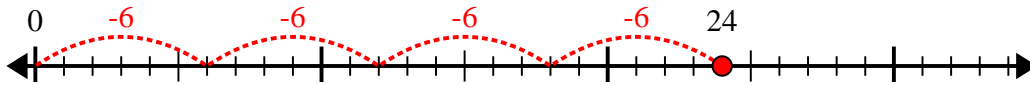
2) $42 \div 6 =$



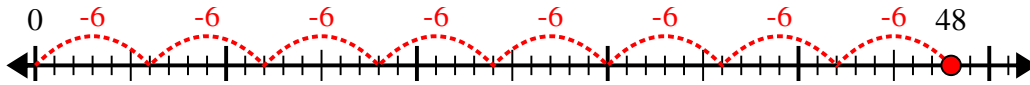
3) $28 \div 7 =$



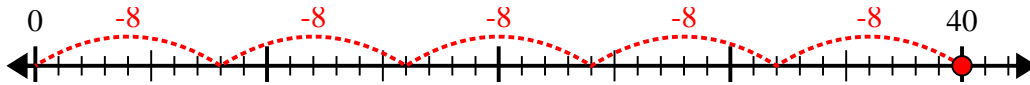
4) $24 \div 6 =$



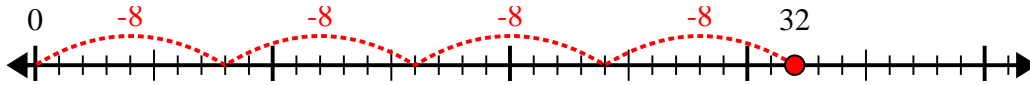
5) $48 \div 6 =$



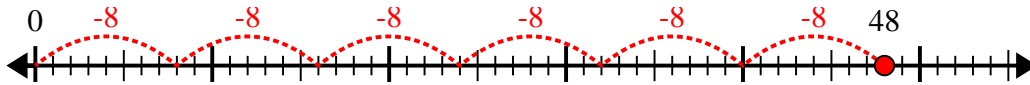
6) $40 \div 8 =$



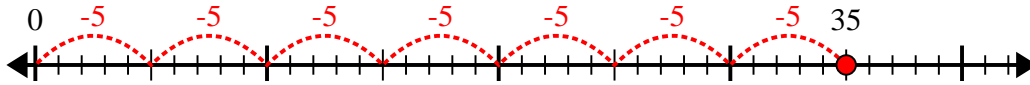
7) $32 \div 8 =$



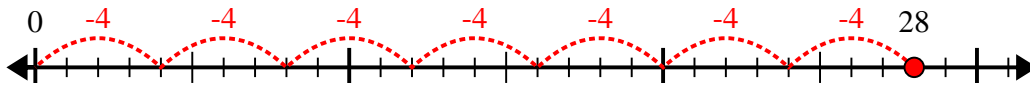
8) $48 \div 8 =$



9) $35 \div 5 =$



10) $28 \div 4 =$



Answers

1. 7
2. 7
3. 4
4. 4
5. 8
6. 5
7. 4
8. 6
9. 7
10. 7