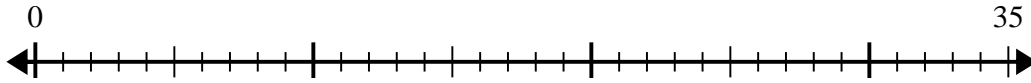


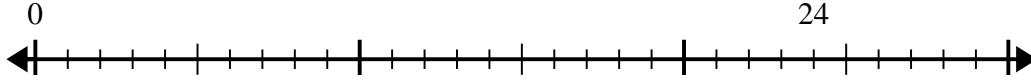


Use the number line to solve the division problem.

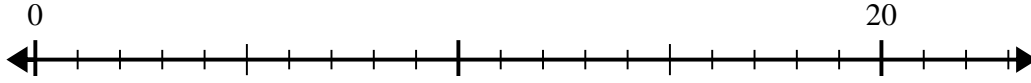
1) $35 \div 7 =$



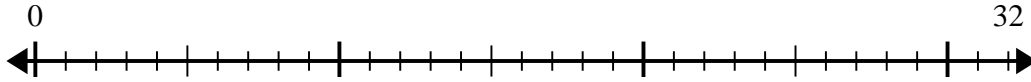
2) $24 \div 6 =$



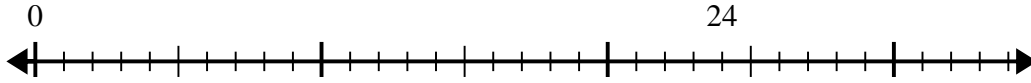
3) $20 \div 5 =$



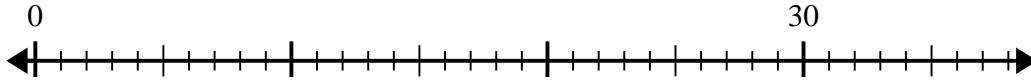
4) $32 \div 4 =$



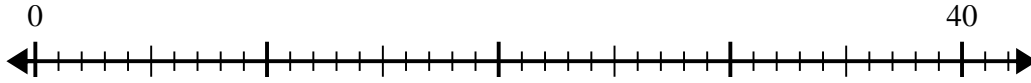
5) $24 \div 4 =$



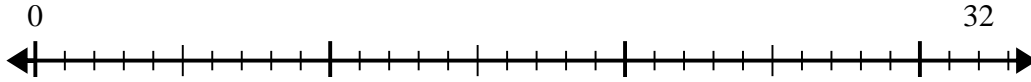
6) $30 \div 6 =$



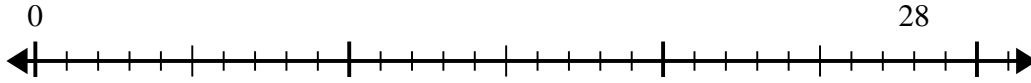
7) $40 \div 5 =$



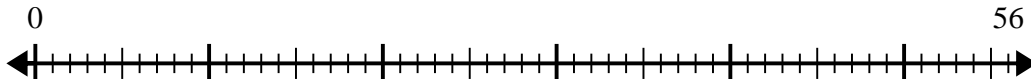
8) $32 \div 8 =$



9) $28 \div 4 =$



10) $56 \div 7 =$



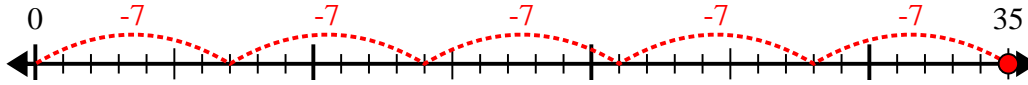
Answers

- 1. _____
- 2. _____
- 3. _____
- 4. _____
- 5. _____
- 6. _____
- 7. _____
- 8. _____
- 9. _____
- 10. _____

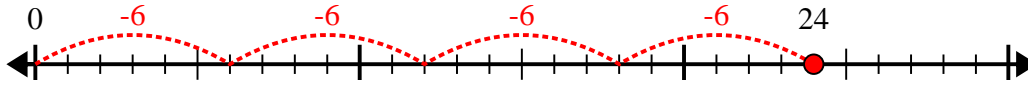


Use the number line to solve the division problem.

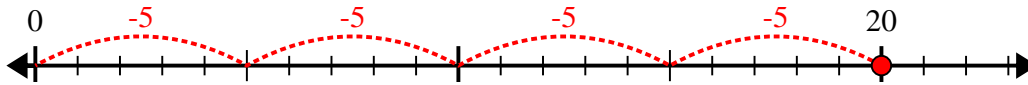
1) $35 \div 7 =$



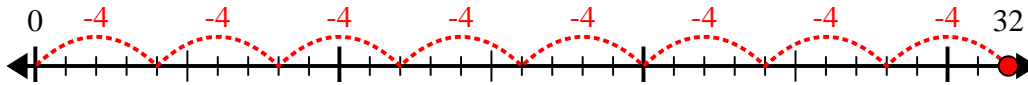
2) $24 \div 6 =$



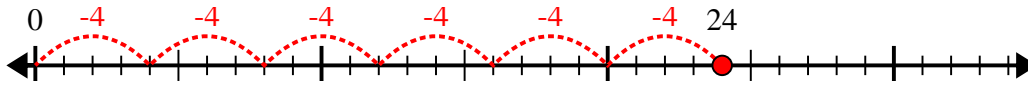
3) $20 \div 5 =$



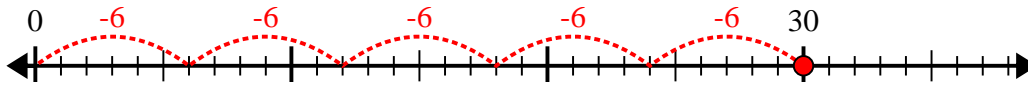
4) $32 \div 4 =$



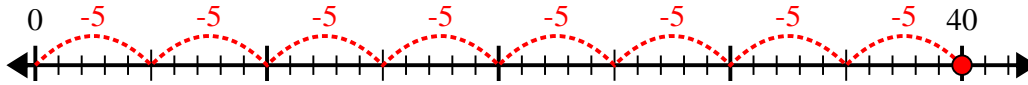
5) $24 \div 4 =$



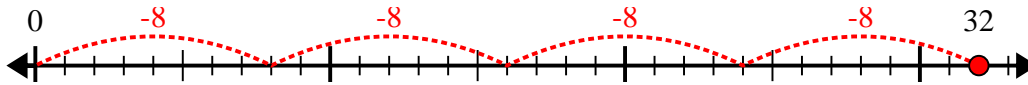
6) $30 \div 6 =$



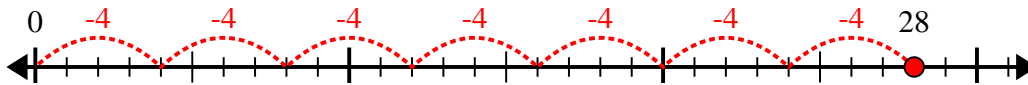
7) $40 \div 5 =$



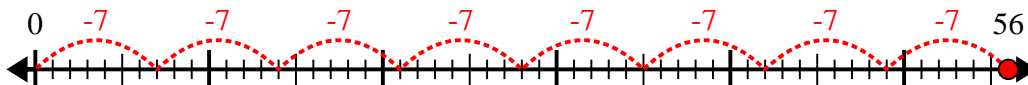
8) $32 \div 8 =$



9) $28 \div 4 =$



10) $56 \div 7 =$



Answers

1. 5

2. 4

3. 4

4. 8

5. 6

6. 5

7. 8

8. 4

9. 7

10. 8