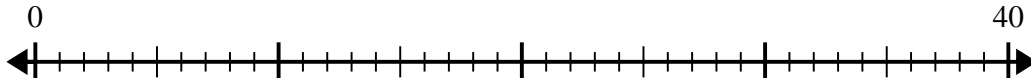


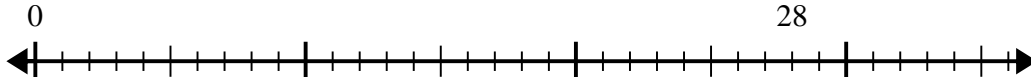


Use the number line to solve the division problem.

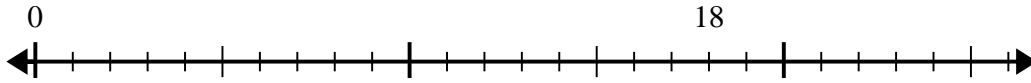
1) $40 \div 8 =$



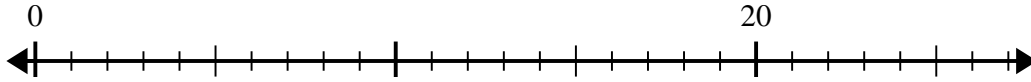
2) $28 \div 7 =$



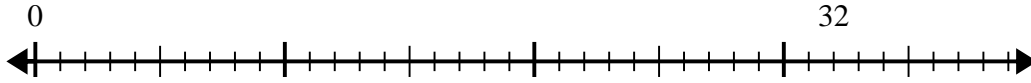
3) $18 \div 6 =$



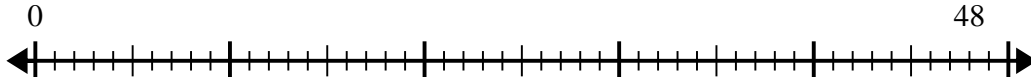
4) $20 \div 4 =$



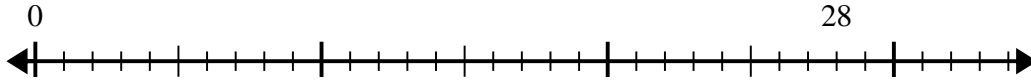
5) $32 \div 8 =$



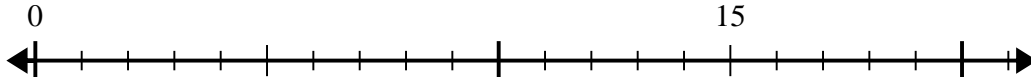
6) $48 \div 8 =$



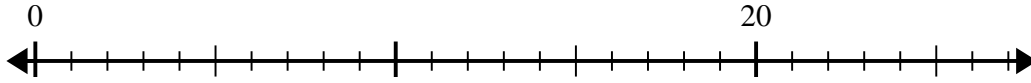
7) $28 \div 4 =$



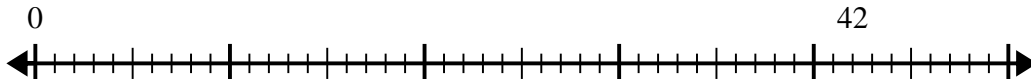
8) $15 \div 5 =$



9) $20 \div 5 =$



10) $42 \div 6 =$



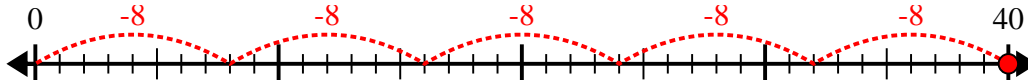
Answers

- 1. _____
- 2. _____
- 3. _____
- 4. _____
- 5. _____
- 6. _____
- 7. _____
- 8. _____
- 9. _____
- 10. _____

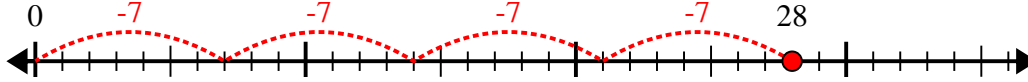


Use the number line to solve the division problem.

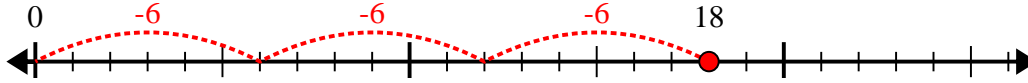
1) $40 \div 8 =$



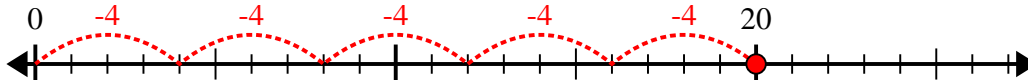
2) $28 \div 7 =$



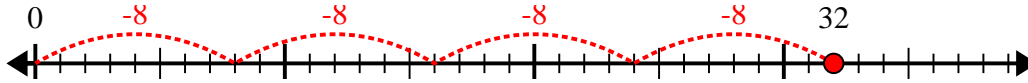
3) $18 \div 6 =$



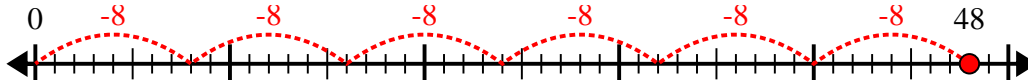
4) $20 \div 4 =$



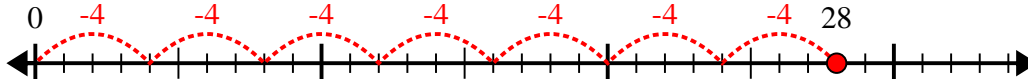
5) $32 \div 8 =$



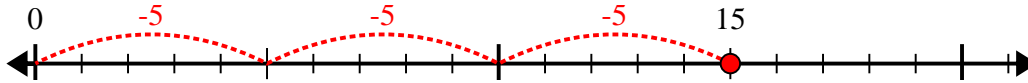
6) $48 \div 8 =$



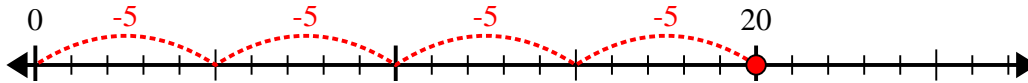
7) $28 \div 4 =$



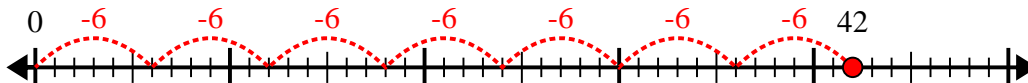
8) $15 \div 5 =$



9) $20 \div 5 =$



10) $42 \div 6 =$



Answers

1. 5

2. 4

3. 3

4. 5

5. 4

6. 6

7. 7

8. 3

9. 4

10. 7