

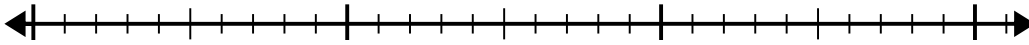


Use the number line to solve the division problem.

1) $28 \div 4 =$

0

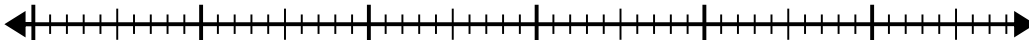
28



2) $48 \div 6 =$

0

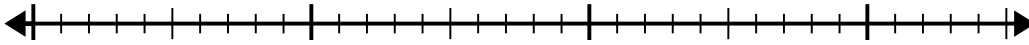
48



3) $35 \div 5 =$

0

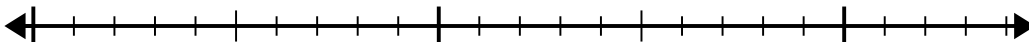
35



4) $21 \div 7 =$

0

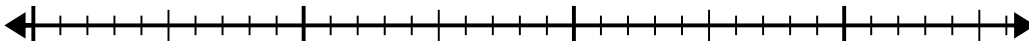
21



5) $35 \div 7 =$

0

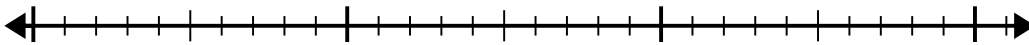
35



6) $24 \div 4 =$

0

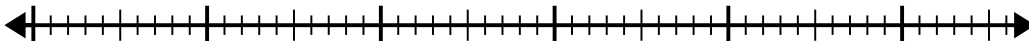
24



7) $48 \div 8 =$

0

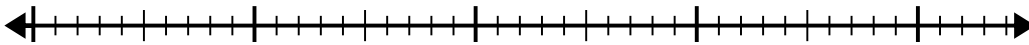
48



8) $40 \div 8 =$

0

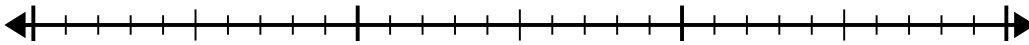
40



9) $20 \div 4 =$

0

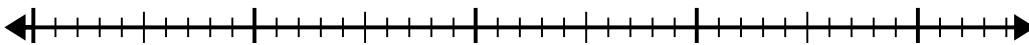
20



10) $42 \div 6 =$

0

42



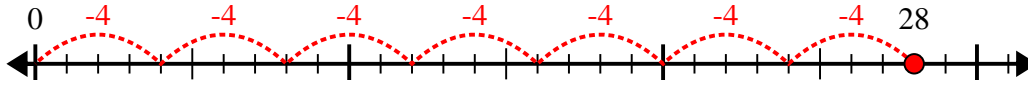
Answers

- 1. _____
- 2. _____
- 3. _____
- 4. _____
- 5. _____
- 6. _____
- 7. _____
- 8. _____
- 9. _____
- 10. _____

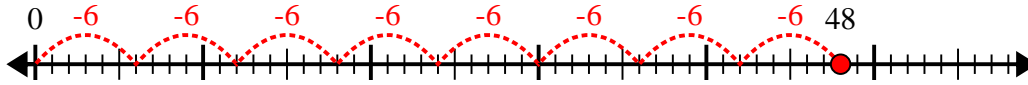


Use the number line to solve the division problem.

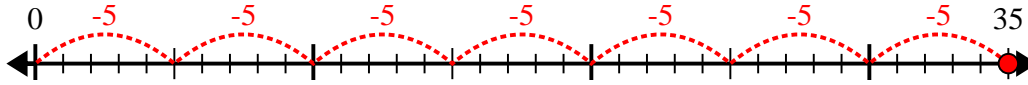
1) $28 \div 4 =$



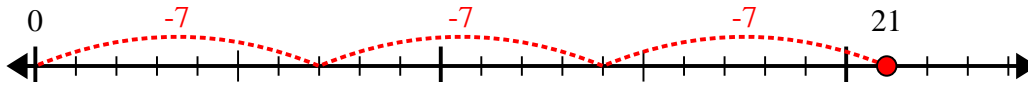
2) $48 \div 6 =$



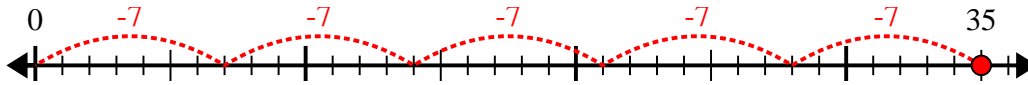
3) $35 \div 5 =$



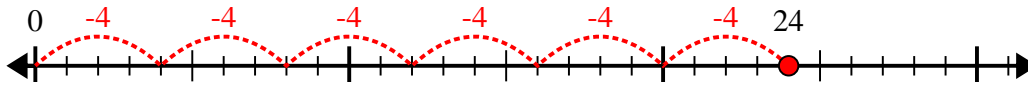
4) $21 \div 7 =$



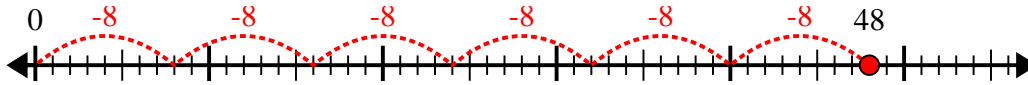
5) $35 \div 7 =$



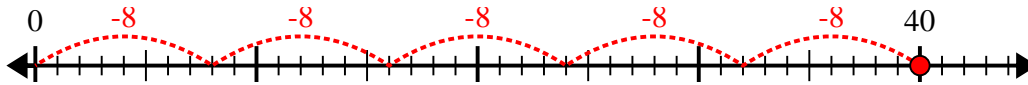
6) $24 \div 4 =$



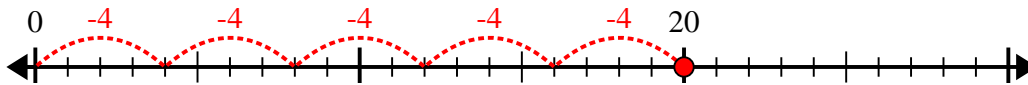
7) $48 \div 8 =$



8) $40 \div 8 =$



9) $20 \div 4 =$



10) $42 \div 6 =$



Answers

1. 7

2. 8

3. 7

4. 3

5. 5

6. 6

7. 6

8. 5

9. 5

10. 7