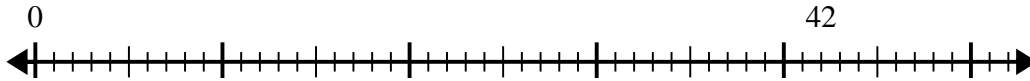


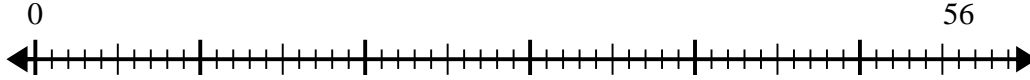


Use the number line to solve the division problem.

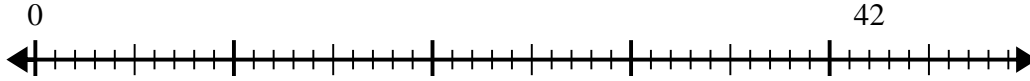
1) $42 \div 7 =$



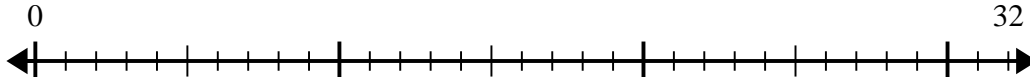
2) $56 \div 8 =$



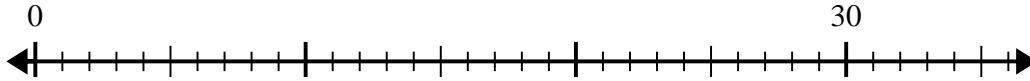
3) $42 \div 6 =$



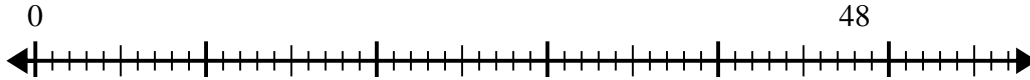
4) $32 \div 4 =$



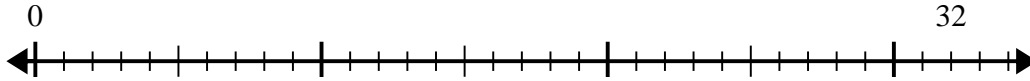
5) $30 \div 5 =$



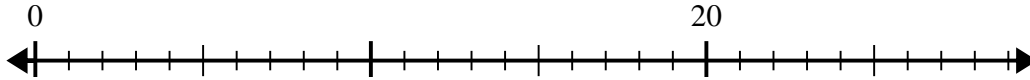
6) $48 \div 6 =$



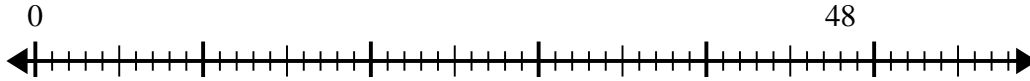
7) $32 \div 8 =$



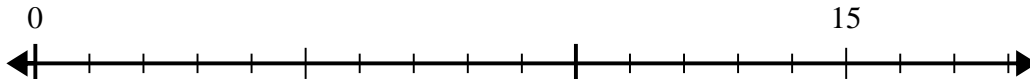
8) $20 \div 4 =$



9) $48 \div 8 =$



10) $15 \div 5 =$



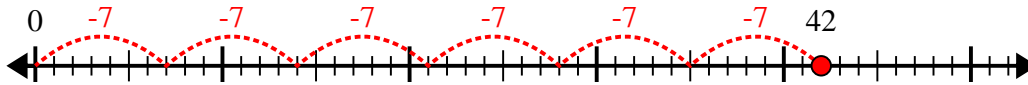
Answers

1. _____
2. _____
3. _____
4. _____
5. _____
6. _____
7. _____
8. _____
9. _____
10. _____

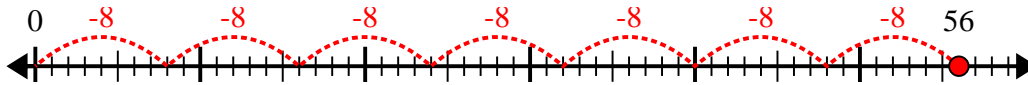


Use the number line to solve the division problem.

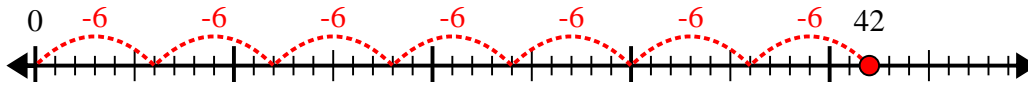
1) $42 \div 7 =$



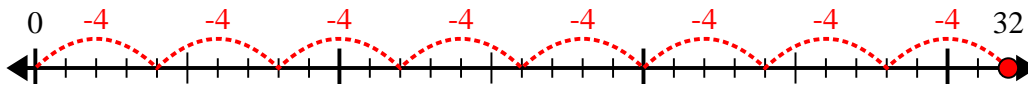
2) $56 \div 8 =$



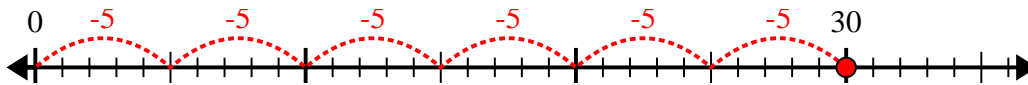
3) $42 \div 6 =$



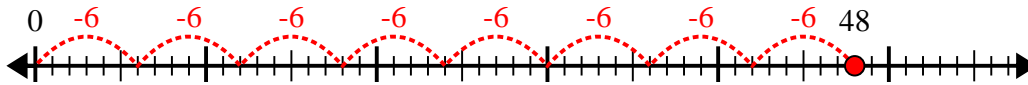
4) $32 \div 4 =$



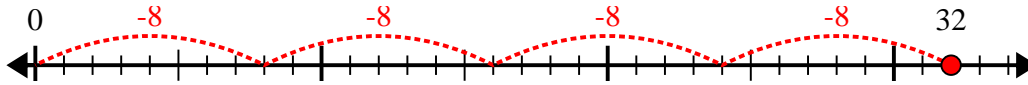
5) $30 \div 5 =$



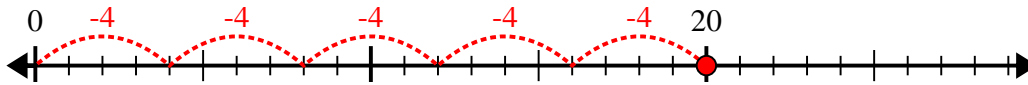
6) $48 \div 6 =$



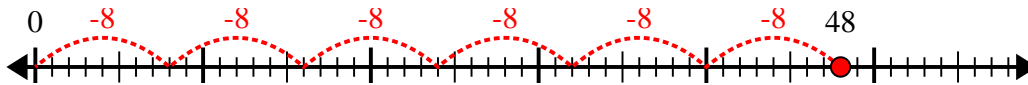
7) $32 \div 8 =$



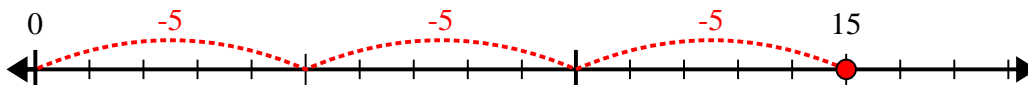
8) $20 \div 4 =$



9) $48 \div 8 =$



10) $15 \div 5 =$



Answers

1. 6

2. 7

3. 7

4. 8

5. 6

6. 8

7. 4

8. 5

9. 6

10. 3