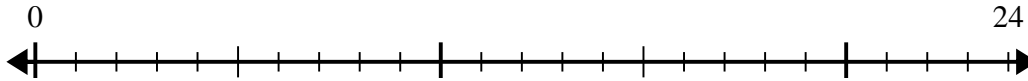


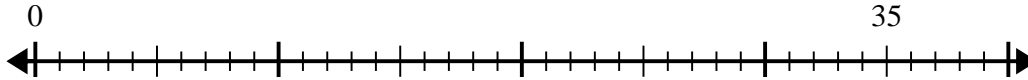


Use the number line to solve the division problem.

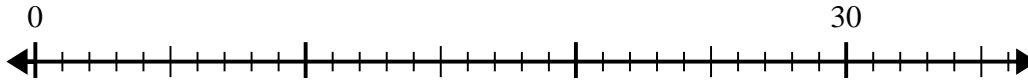
1) $24 \div 8 =$



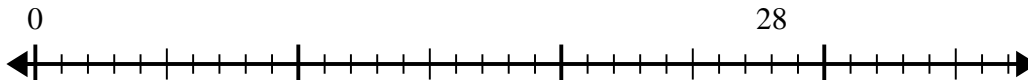
2) $35 \div 7 =$



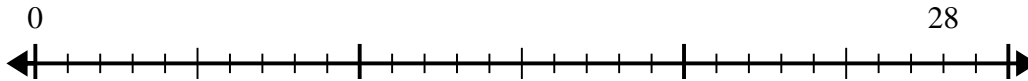
3) $30 \div 6 =$



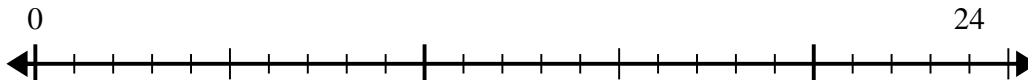
4) $28 \div 4 =$



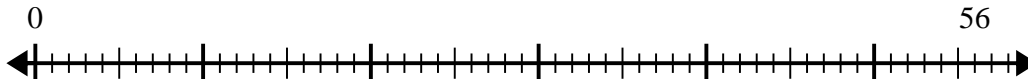
5) $28 \div 7 =$



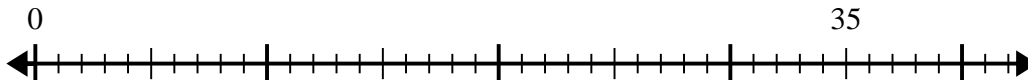
6) $24 \div 6 =$



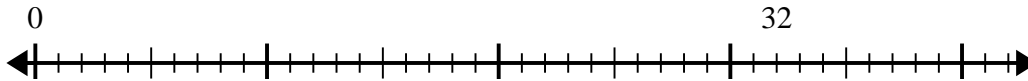
7) $56 \div 8 =$



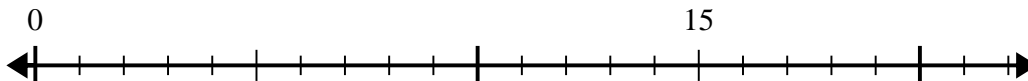
8) $35 \div 5 =$



9) $32 \div 4 =$



10) $15 \div 5 =$



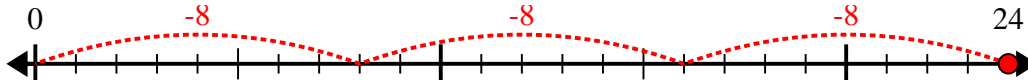
Answers

1. _____
2. _____
3. _____
4. _____
5. _____
6. _____
7. _____
8. _____
9. _____
10. _____

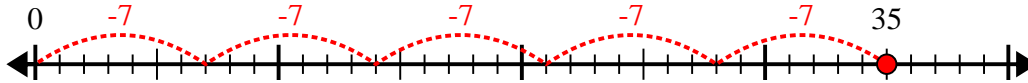


Use the number line to solve the division problem.

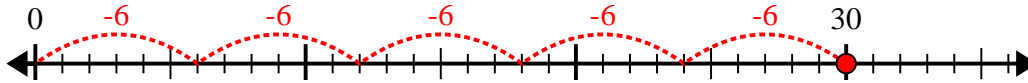
1) $24 \div 8 =$



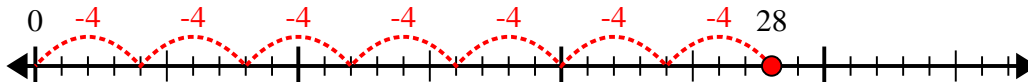
2) $35 \div 7 =$



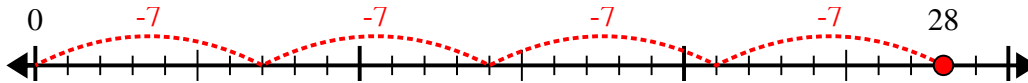
3) $30 \div 6 =$



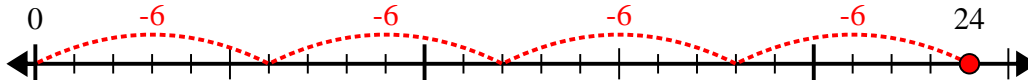
4) $28 \div 4 =$



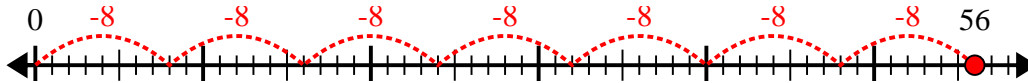
5) $28 \div 7 =$



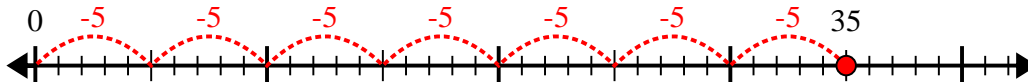
6) $24 \div 6 =$



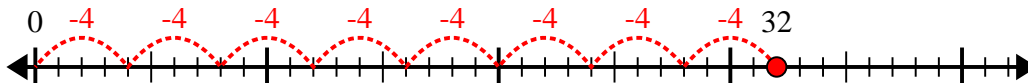
7) $56 \div 8 =$



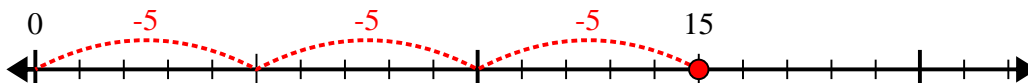
8) $35 \div 5 =$



9) $32 \div 4 =$



10) $15 \div 5 =$



Answers

1. 3

2. 5

3. 5

4. 7

5. 4

6. 4

7. 7

8. 7

9. 8

10. 3