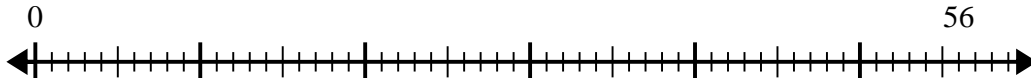


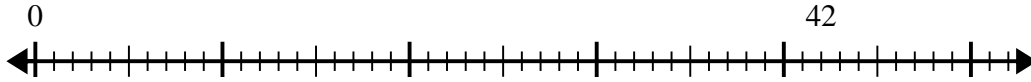


Use the number line to solve the division problem.

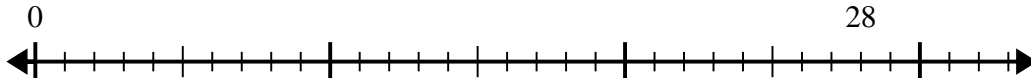
1) $56 \div 8 =$



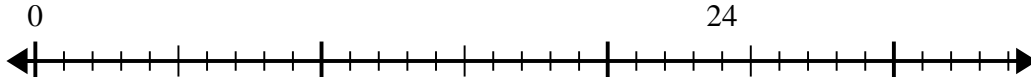
2) $42 \div 6 =$



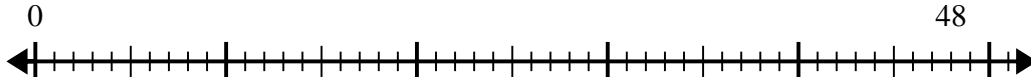
3) $28 \div 7 =$



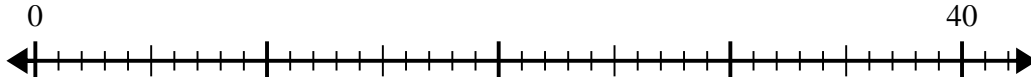
4) $24 \div 6 =$



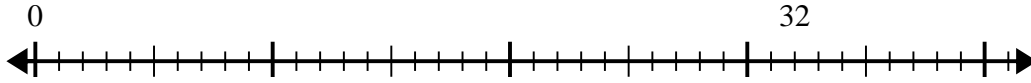
5) $48 \div 6 =$



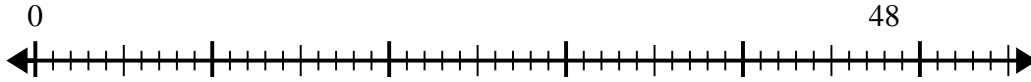
6) $40 \div 8 =$



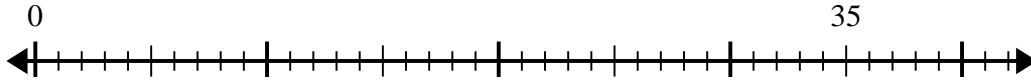
7) $32 \div 8 =$



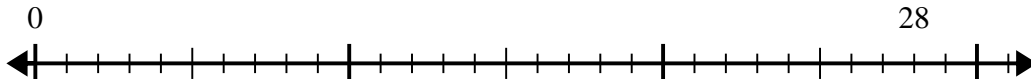
8) $48 \div 8 =$



9) $35 \div 5 =$



10) $28 \div 4 =$



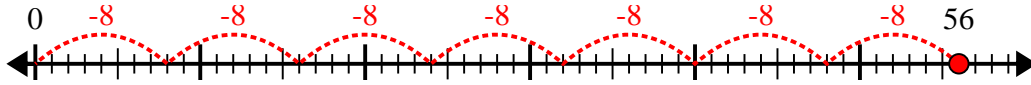
Answers

- 1. _____
- 2. _____
- 3. _____
- 4. _____
- 5. _____
- 6. _____
- 7. _____
- 8. _____
- 9. _____
- 10. _____

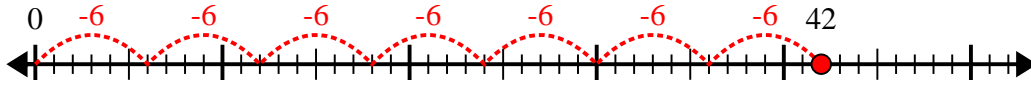


Use the number line to solve the division problem.

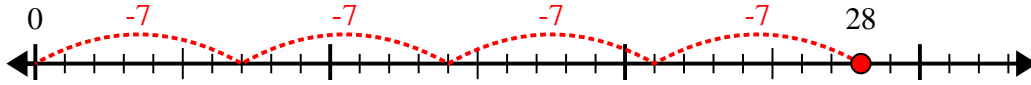
1) $56 \div 8 =$



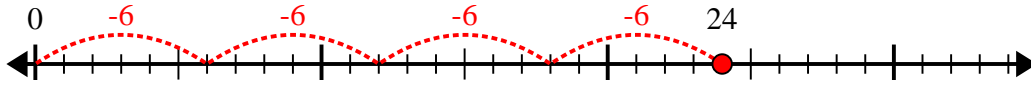
2) $42 \div 6 =$



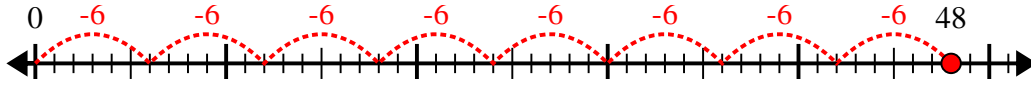
3) $28 \div 7 =$



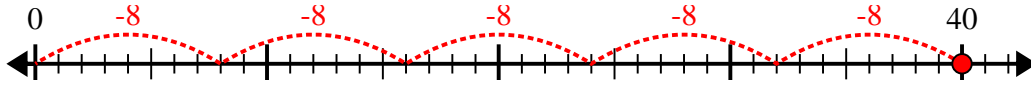
4) $24 \div 6 =$



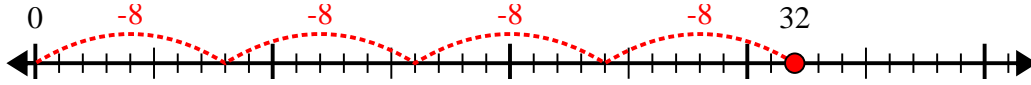
5) $48 \div 6 =$



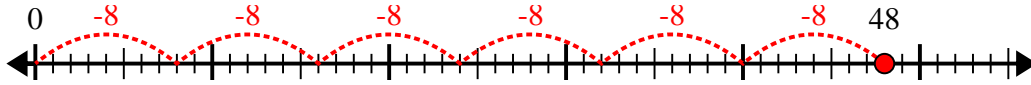
6) $40 \div 8 =$



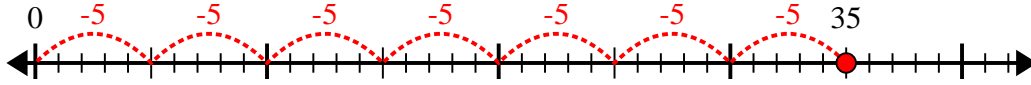
7) $32 \div 8 =$



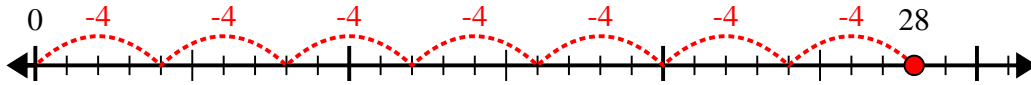
8) $48 \div 8 =$



9) $35 \div 5 =$



10) $28 \div 4 =$



Answers

1. 7

2. 7

3. 4

4. 4

5. 8

6. 5

7. 4

8. 6

9. 7

10. 7