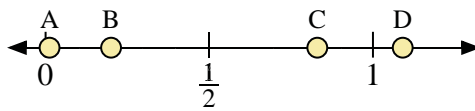
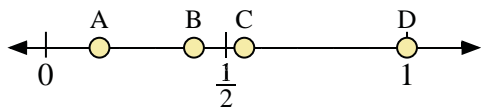


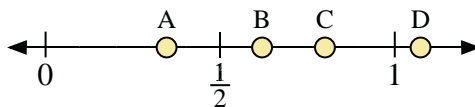
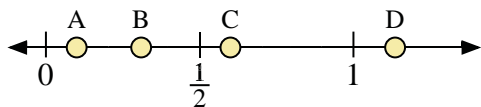


Use the number lines to answer the questions.



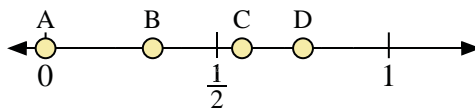
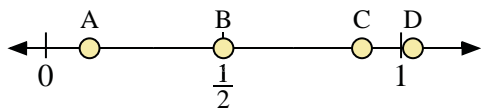
- 1) Which letter best represents the location of 1.00?
- 2) Which letter best represents the location of 0.41?

- 3) Which letter best represents the location of 0.2?
- 4) Which letter best represents the location of 0.83?



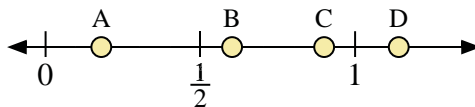
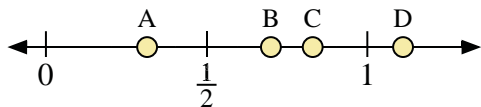
- 5) Which letter best represents the location of 0.6?
- 6) Which letter best represents the location of 0.10?

- 7) Which letter best represents the location of 0.80?
- 8) Which letter best represents the location of 0.62?



- 9) Which letter best represents the location of 0.50?
- 10) Which letter best represents the location of 0.89?

- 11) Which letter best represents the location of 0.0?
- 12) Which letter best represents the location of 0.75?



- 13) Which letter best represents the location of 0.7?
- 14) Which letter best represents the location of 0.83?

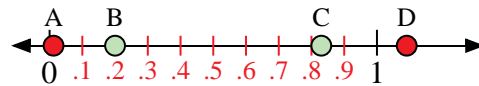
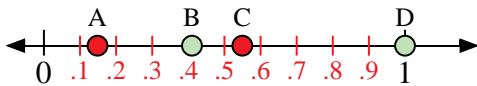
- 15) Which letter best represents the location of 0.90?
- 16) Which letter best represents the location of 0.18?

Answers

1. \_\_\_\_\_
2. \_\_\_\_\_
3. \_\_\_\_\_
4. \_\_\_\_\_
5. \_\_\_\_\_
6. \_\_\_\_\_
7. \_\_\_\_\_
8. \_\_\_\_\_
9. \_\_\_\_\_
10. \_\_\_\_\_
11. \_\_\_\_\_
12. \_\_\_\_\_
13. \_\_\_\_\_
14. \_\_\_\_\_
15. \_\_\_\_\_
16. \_\_\_\_\_

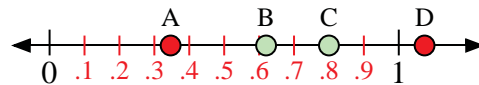
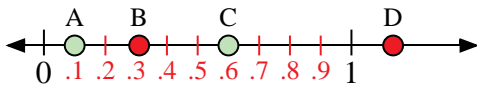


Use the number lines to answer the questions.



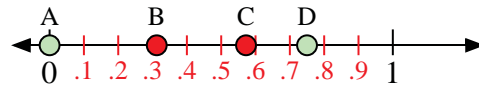
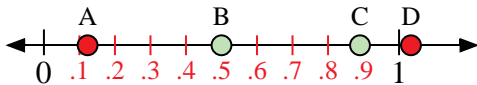
- 1) Which letter best represents the location of 1.00?
- 2) Which letter best represents the location of 0.41?

- 3) Which letter best represents the location of 0.2?
- 4) Which letter best represents the location of 0.83?



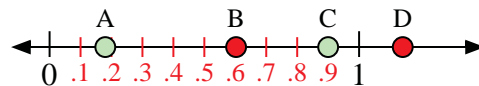
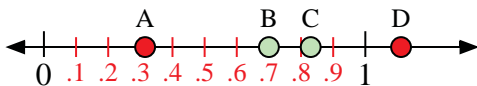
- 5) Which letter best represents the location of 0.6?
- 6) Which letter best represents the location of 0.10?

- 7) Which letter best represents the location of 0.80?
- 8) Which letter best represents the location of 0.62?



- 9) Which letter best represents the location of 0.50?
- 10) Which letter best represents the location of 0.89?

- 11) Which letter best represents the location of 0.0?
- 12) Which letter best represents the location of 0.75?



- 13) Which letter best represents the location of 0.7?
- 14) Which letter best represents the location of 0.83?

- 15) Which letter best represents the location of 0.90?
- 16) Which letter best represents the location of 0.18?

Answers

1. D
2. B
3. B
4. C
5. C
6. A
7. C
8. B
9. B
10. C
11. A
12. D
13. B
14. C
15. C
16. A