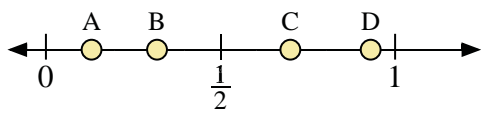
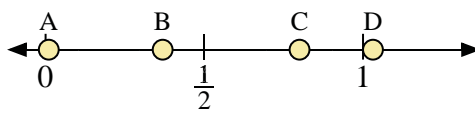




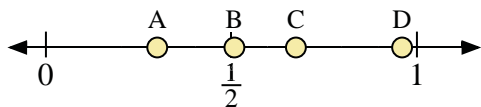
Use the number lines to answer the questions.



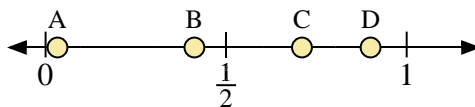
- 1) Which letter best represents the location of 0.70?
- 2) Which letter best represents the location of 0.93?



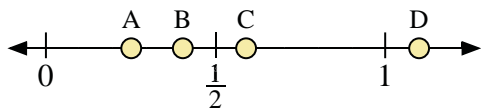
- 3) Which letter best represents the location of 0.80?
- 4) Which letter best represents the location of 0.01?



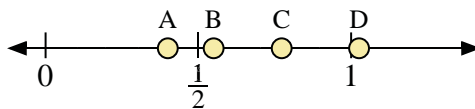
- 5) Which letter best represents the location of 0.30?
- 6) Which letter best represents the location of 0.96?



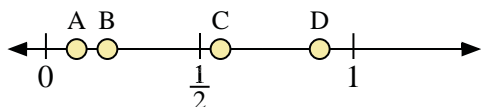
- 7) Which letter best represents the location of 0.9?
- 8) Which letter best represents the location of 0.71?



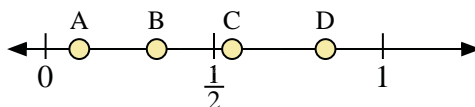
- 9) Which letter best represents the location of 1.10?
- 10) Which letter best represents the location of 0.59?



- 11) Which letter best represents the location of 0.4?
- 12) Which letter best represents the location of 0.55?



- 13) Which letter best represents the location of 0.20?
- 14) Which letter best represents the location of 0.10?




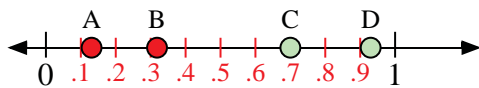
- 15) Which letter best represents the location of 0.1?
- 16) Which letter best represents the location of 0.83?

**Answers**

1. \_\_\_\_\_
2. \_\_\_\_\_
3. \_\_\_\_\_
4. \_\_\_\_\_
5. \_\_\_\_\_
6. \_\_\_\_\_
7. \_\_\_\_\_
8. \_\_\_\_\_
9. \_\_\_\_\_
10. \_\_\_\_\_
11. \_\_\_\_\_
12. \_\_\_\_\_
13. \_\_\_\_\_
14. \_\_\_\_\_
15. \_\_\_\_\_
16. \_\_\_\_\_

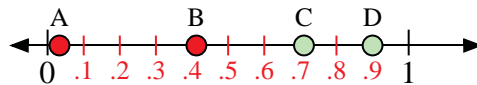
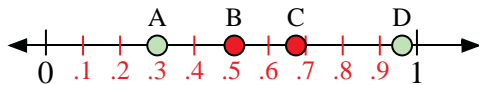


Use the number lines to answer the questions.



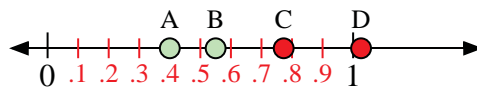
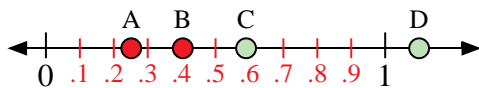
- 1) Which letter best represents the location of 0.70?
- 2) Which letter best represents the location of 0.93?

- 3) Which letter best represents the location of 0.80?
- 4) Which letter best represents the location of 0.01?



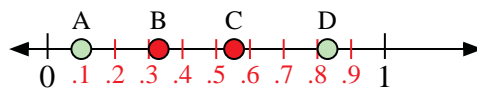
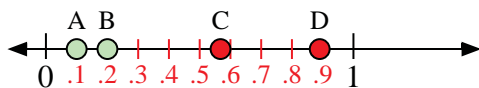
- 5) Which letter best represents the location of 0.30?
- 6) Which letter best represents the location of 0.96?

- 7) Which letter best represents the location of 0.9?
- 8) Which letter best represents the location of 0.71?



- 9) Which letter best represents the location of 1.10?
- 10) Which letter best represents the location of 0.59?

- 11) Which letter best represents the location of 0.4?
- 12) Which letter best represents the location of 0.55?



- 13) Which letter best represents the location of 0.20?
- 14) Which letter best represents the location of 0.10?

- 15) Which letter best represents the location of 0.1?
- 16) Which letter best represents the location of 0.83?

Answers

1. C
2. D
3. C
4. A
5. A
6. D
7. D
8. C
9. D
10. C
11. A
12. B
13. B
14. A
15. A
16. D