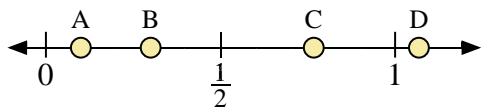
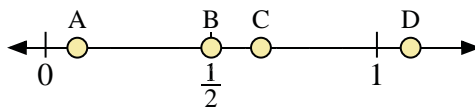




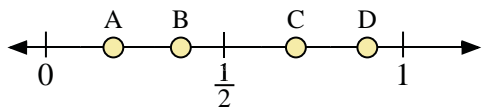
Use the number lines to answer the questions.



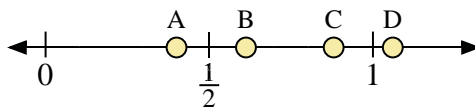
- 1) Which letter best represents the location of 0.3?
- 2) Which letter best represents the location of 0.10?



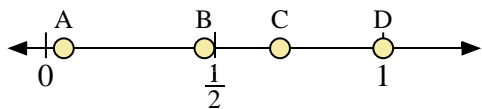
- 3) Which letter best represents the location of 0.50?
- 4) Which letter best represents the location of 0.65?



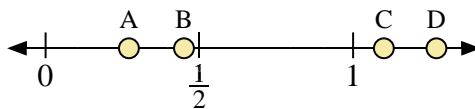
- 5) Which letter best represents the location of 0.7?
- 6) Which letter best represents the location of 0.90?



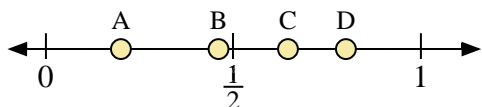
- 7) Which letter best represents the location of 0.4?
- 8) Which letter best represents the location of 0.88?



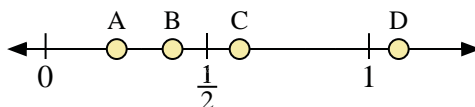
- 9) Which letter best represents the location of 1.0?
- 10) Which letter best represents the location of 0.47?



- 11) Which letter best represents the location of 1.1?
- 12) Which letter best represents the location of 0.45?



- 13) Which letter best represents the location of 0.20?
- 14) Which letter best represents the location of 0.80?



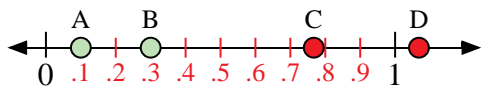
- 15) Which letter best represents the location of 0.60?
- 16) Which letter best represents the location of 0.22?

Answers

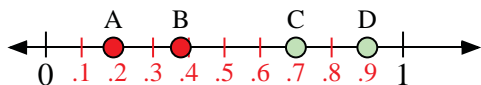
1. \_\_\_\_\_
2. \_\_\_\_\_
3. \_\_\_\_\_
4. \_\_\_\_\_
5. \_\_\_\_\_
6. \_\_\_\_\_
7. \_\_\_\_\_
8. \_\_\_\_\_
9. \_\_\_\_\_
10. \_\_\_\_\_
11. \_\_\_\_\_
12. \_\_\_\_\_
13. \_\_\_\_\_
14. \_\_\_\_\_
15. \_\_\_\_\_
16. \_\_\_\_\_



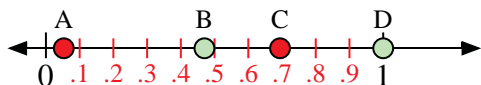
Use the number lines to answer the questions.



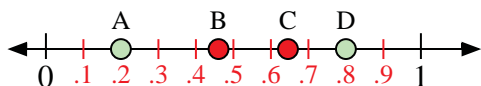
- 1) Which letter best represents the location of 0.3?
- 2) Which letter best represents the location of 0.10?



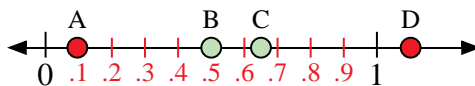
- 5) Which letter best represents the location of 0.7?
- 6) Which letter best represents the location of 0.90?



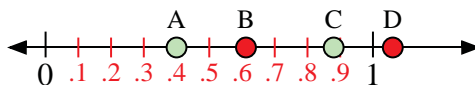
- 9) Which letter best represents the location of 1.0?
- 10) Which letter best represents the location of 0.47?




- 13) Which letter best represents the location of 0.20?
- 14) Which letter best represents the location of 0.80?



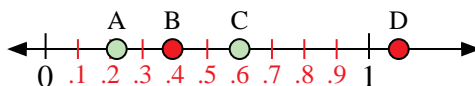
- 3) Which letter best represents the location of 0.50?
- 4) Which letter best represents the location of 0.65?



- 7) Which letter best represents the location of 0.4?
- 8) Which letter best represents the location of 0.88?



- 11) Which letter best represents the location of 1.1?
- 12) Which letter best represents the location of 0.45?



- 15) Which letter best represents the location of 0.60?
- 16) Which letter best represents the location of 0.22?

Answers

1. B
2. A
3. B
4. C
5. C
6. D
7. A
8. C
9. D
10. B
11. C
12. B
13. A
14. D
15. C
16. A