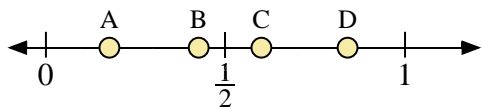
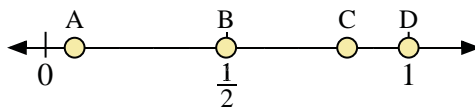




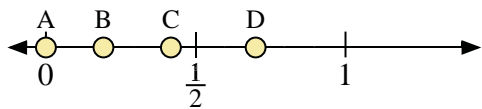
Use the number lines to answer the questions.



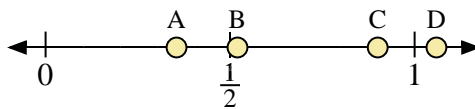
- 1) Which letter best represents the location of 0.6?
- 2) Which letter best represents the location of 0.84?



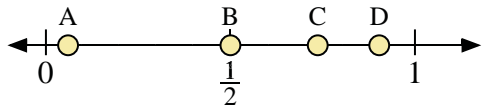
- 3) Which letter best represents the location of 1.00?
- 4) Which letter best represents the location of 0.08?



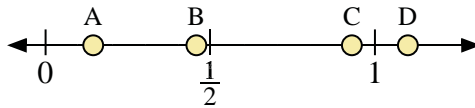
- 5) Which letter best represents the location of 0.0?
- 6) Which letter best represents the location of 0.70?



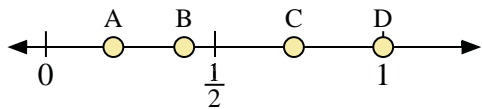
- 7) Which letter best represents the location of 0.90?
- 8) Which letter best represents the location of 0.52?



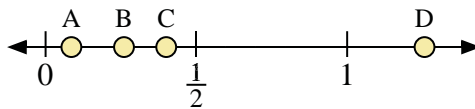
- 9) Which letter best represents the location of 0.5?
- 10) Which letter best represents the location of 0.06?



- 11) Which letter best represents the location of 1.10?
- 12) Which letter best represents the location of 0.93?



- 13) Which letter best represents the location of 0.2?
- 14) Which letter best represents the location of 0.41?



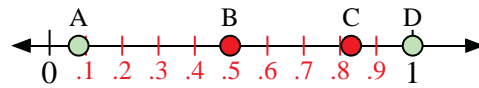
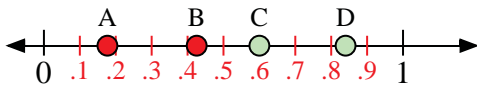
- 15) Which letter best represents the location of 0.4?
- 16) Which letter best represents the location of 0.26?

Answers

1. \_\_\_\_\_
2. \_\_\_\_\_
3. \_\_\_\_\_
4. \_\_\_\_\_
5. \_\_\_\_\_
6. \_\_\_\_\_
7. \_\_\_\_\_
8. \_\_\_\_\_
9. \_\_\_\_\_
10. \_\_\_\_\_
11. \_\_\_\_\_
12. \_\_\_\_\_
13. \_\_\_\_\_
14. \_\_\_\_\_
15. \_\_\_\_\_
16. \_\_\_\_\_

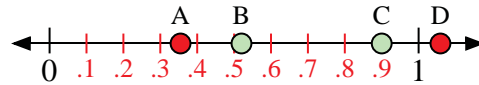
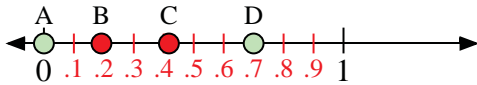


Use the number lines to answer the questions.



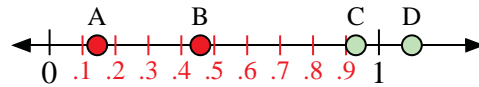
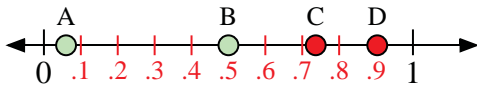
- 1) Which letter best represents the location of 0.6?
- 2) Which letter best represents the location of 0.84?

- 3) Which letter best represents the location of 1.00?
- 4) Which letter best represents the location of 0.08?




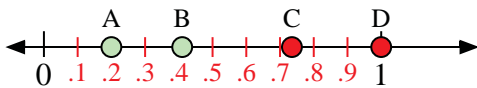
- 5) Which letter best represents the location of 0.0?
- 6) Which letter best represents the location of 0.70?

- 7) Which letter best represents the location of 0.90?
- 8) Which letter best represents the location of 0.52?



- 9) Which letter best represents the location of 0.5?
- 10) Which letter best represents the location of 0.06?

- 11) Which letter best represents the location of 1.10?
- 12) Which letter best represents the location of 0.93?



- 13) Which letter best represents the location of 0.2?
- 14) Which letter best represents the location of 0.41?

- 15) Which letter best represents the location of 0.4?
- 16) Which letter best represents the location of 0.26?

Answers

1. C
2. D
3. D
4. A
5. A
6. D
7. C
8. B
9. B
10. A
11. D
12. C
13. A
14. B
15. C
16. B