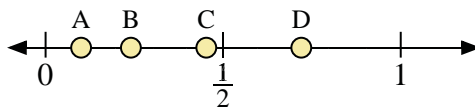
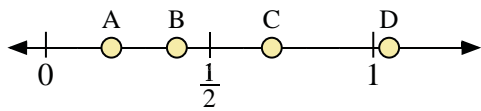


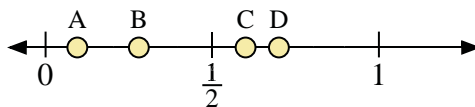
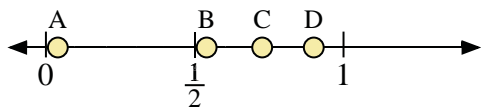


Use the number lines to answer the questions.



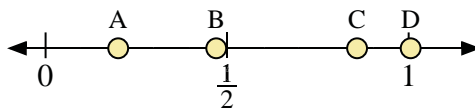
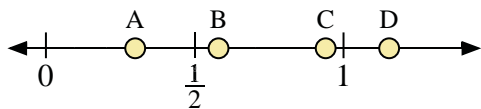
- 1) Which letter best represents the location of 0.4?
- 2) Which letter best represents the location of 0.69?

- 3) Which letter best represents the location of 0.10?
- 4) Which letter best represents the location of 0.72?



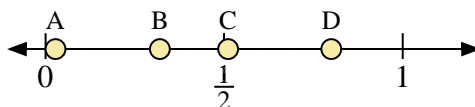
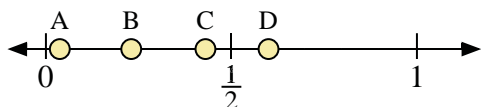
- 5) Which letter best represents the location of 0.90?
- 6) Which letter best represents the location of 0.54?

- 7) Which letter best represents the location of 0.7?
- 8) Which letter best represents the location of 0.60?



- 9) Which letter best represents the location of 0.3?
- 10) Which letter best represents the location of 0.58?

- 11) Which letter best represents the location of 0.20?
- 12) Which letter best represents the location of 0.47?



- 13) Which letter best represents the location of 0.6?
- 14) Which letter best represents the location of 0.43?

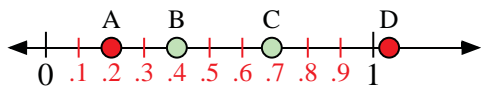
- 15) Which letter best represents the location of 0.80?
- 16) Which letter best represents the location of 0.32?

Answers

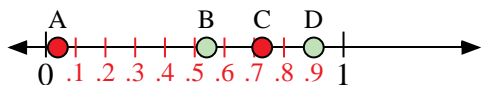
1. \_\_\_\_\_
2. \_\_\_\_\_
3. \_\_\_\_\_
4. \_\_\_\_\_
5. \_\_\_\_\_
6. \_\_\_\_\_
7. \_\_\_\_\_
8. \_\_\_\_\_
9. \_\_\_\_\_
10. \_\_\_\_\_
11. \_\_\_\_\_
12. \_\_\_\_\_
13. \_\_\_\_\_
14. \_\_\_\_\_
15. \_\_\_\_\_
16. \_\_\_\_\_



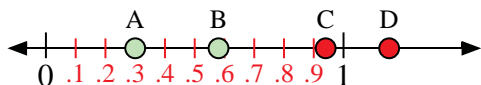
Use the number lines to answer the questions.



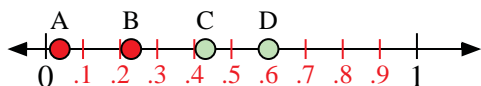
- 1) Which letter best represents the location of 0.4?
- 2) Which letter best represents the location of 0.69?



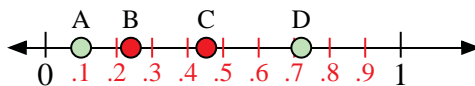
- 5) Which letter best represents the location of 0.90?
- 6) Which letter best represents the location of 0.54?



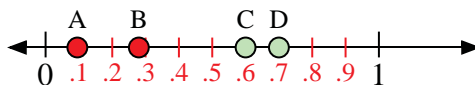
- 9) Which letter best represents the location of 0.3?
- 10) Which letter best represents the location of 0.58?



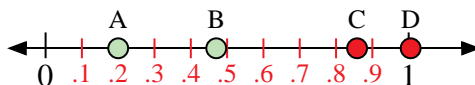
- 13) Which letter best represents the location of 0.6?
- 14) Which letter best represents the location of 0.43?



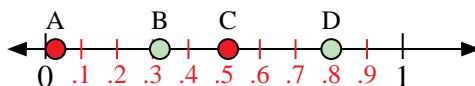
- 3) Which letter best represents the location of 0.10?
- 4) Which letter best represents the location of 0.72?



- 7) Which letter best represents the location of 0.7?
- 8) Which letter best represents the location of 0.60?



- 11) Which letter best represents the location of 0.20?
- 12) Which letter best represents the location of 0.47?



- 15) Which letter best represents the location of 0.80?
- 16) Which letter best represents the location of 0.32?

Answers

1. **B**
2. **C**
3. **A**
4. **D**
5. **D**
6. **B**
7. **D**
8. **C**
9. **A**
10. **B**
11. **A**
12. **B**
13. **D**
14. **C**
15. **D**
16. **B**