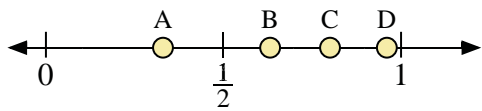
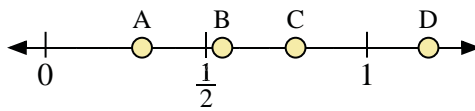




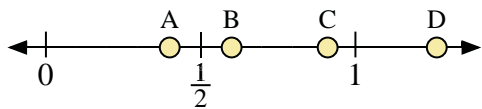
Use the number lines to answer the questions.



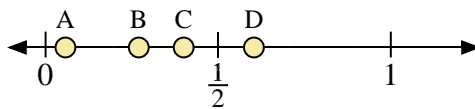
- 1) Which letter best represents the location of 0.8?
- 2) Which letter best represents the location of 0.96?



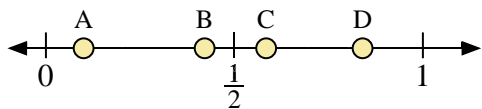
- 3) Which letter best represents the location of 0.3?
- 4) Which letter best represents the location of 0.55?



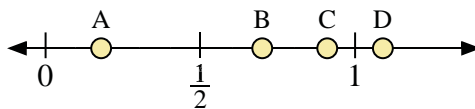
- 5) Which letter best represents the location of 0.6?
- 6) Which letter best represents the location of 0.40?



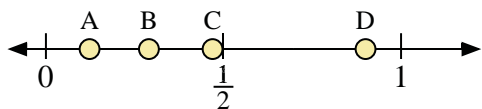
- 7) Which letter best represents the location of 0.4?
- 8) Which letter best represents the location of 0.27?



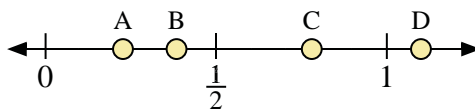
- 9) Which letter best represents the location of 0.10?
- 10) Which letter best represents the location of 0.84?



- 11) Which letter best represents the location of 0.7?
- 12) Which letter best represents the location of 0.91?



- 13) Which letter best represents the location of 0.90?
- 14) Which letter best represents the location of 0.29?



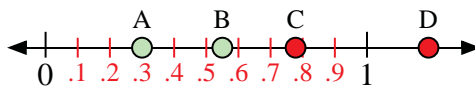
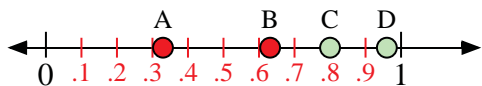
- 15) Which letter best represents the location of 1.10?
- 16) Which letter best represents the location of 0.78?

Answers

1. _____
2. _____
3. _____
4. _____
5. _____
6. _____
7. _____
8. _____
9. _____
10. _____
11. _____
12. _____
13. _____
14. _____
15. _____
16. _____

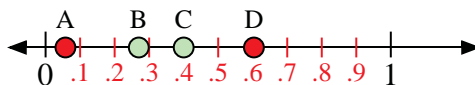
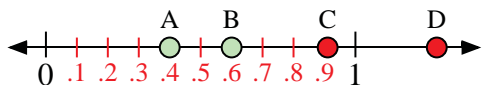


Use the number lines to answer the questions.



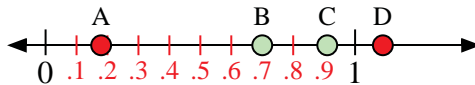
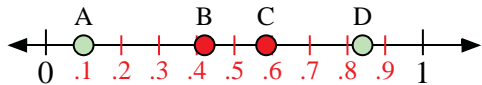
- 1) Which letter best represents the location of 0.8?
- 2) Which letter best represents the location of 0.96?

- 3) Which letter best represents the location of 0.3?
- 4) Which letter best represents the location of 0.55?



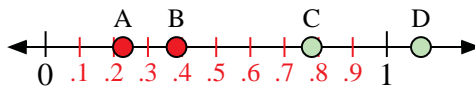
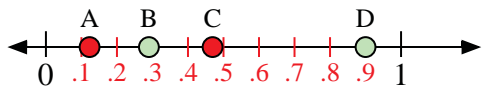
- 5) Which letter best represents the location of 0.6?
- 6) Which letter best represents the location of 0.40?

- 7) Which letter best represents the location of 0.4?
- 8) Which letter best represents the location of 0.27?



- 9) Which letter best represents the location of 0.10?
- 10) Which letter best represents the location of 0.84?

- 11) Which letter best represents the location of 0.7?
- 12) Which letter best represents the location of 0.91?



- 13) Which letter best represents the location of 0.90?
- 14) Which letter best represents the location of 0.29?

- 15) Which letter best represents the location of 1.10?
- 16) Which letter best represents the location of 0.78?

Answers

1. C
2. D
3. A
4. B
5. B
6. A
7. C
8. B
9. A
10. D
11. B
12. C
13. D
14. B
15. D
16. C