





Count the amount of each of the different objects.


Answers

1) 


---

2) 


---

3) 


---

4) 


---


5) 


---


6) 

1. \_\_\_\_\_
2. \_\_\_\_\_
3. \_\_\_\_\_
4. \_\_\_\_\_
5. \_\_\_\_\_
6. \_\_\_\_\_
7. \_\_\_\_\_
8. \_\_\_\_\_
9. \_\_\_\_\_
10. \_\_\_\_\_

7) 

8) 

9) 

10) 



Count the amount of each of the different objects.

Answers

1)

2)

3)

4)

5)

6)

1. 14
2. 4
3. 19
4. 17
5. 5
6. 7
7. 16
8. 4
9. 15
10. 8

7)

8)

9)

10)