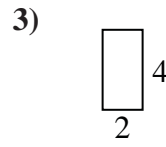

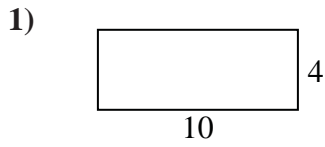


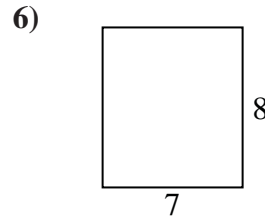
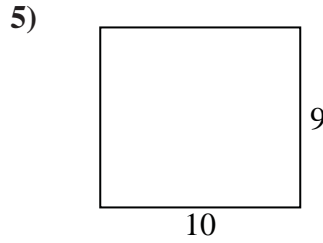
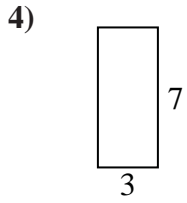


Find the perimeter and area of each figure. Each figure is in inches (in). Not to scale.

Answers



1. _____



2. _____

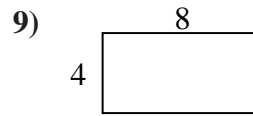
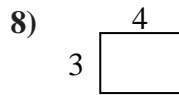

3. _____

4. _____

5. _____

6. _____

7. _____

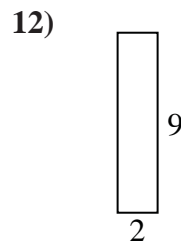
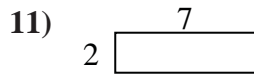
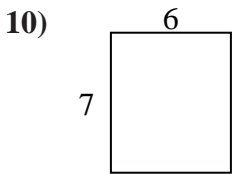


8. _____

9. _____

10. _____

11. _____

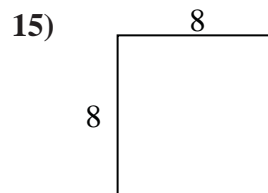
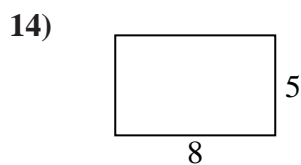
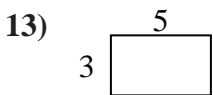


12. _____

13. _____

14. _____

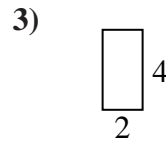

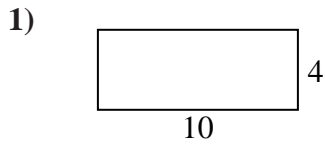
15. _____



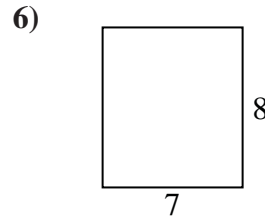
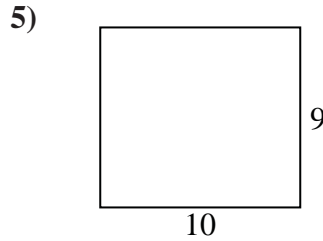
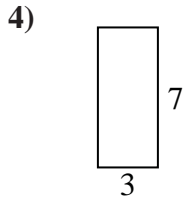


Find the perimeter and area of each figure. Each figure is in inches (in). Not to scale.

Answers



1. 28 in 40 in²



2. 24 in 20 in²

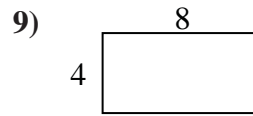
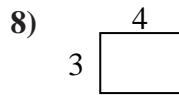

3. 12 in 8 in²

4. 20 in 21 in²

5. 38 in 90 in²

6. 30 in 56 in²

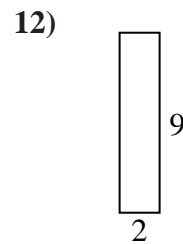
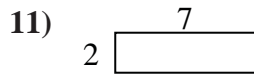
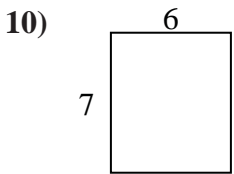
7. 26 in 30 in²



8. 14 in 12 in²

9. 24 in 32 in²

10. 26 in 42 in²



11. 18 in 14 in²

12. 22 in 18 in²

13. 16 in 15 in²

14. 26 in 40 in²

15. 32 in 64 in²

