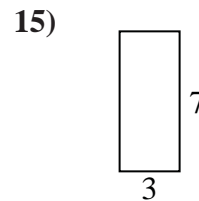
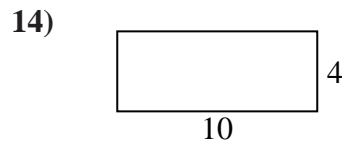
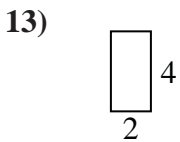
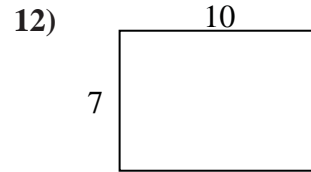
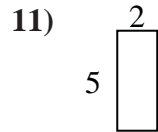
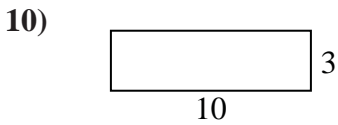
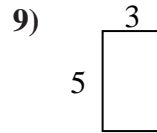
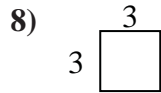
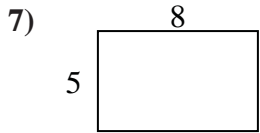
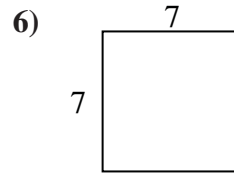
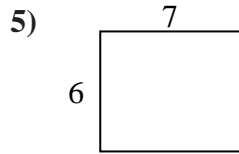
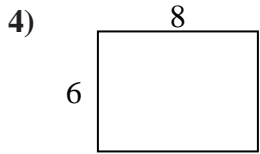
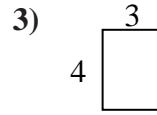
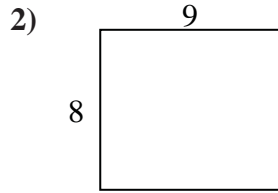
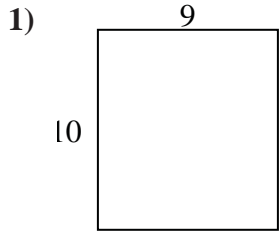




Find the perimeter and area of each figure. Each figure is in inches (in). Not to scale.

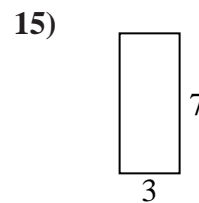
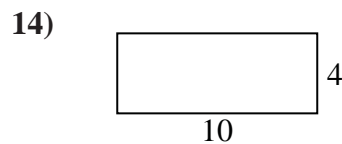
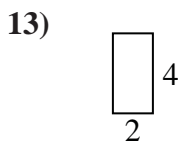
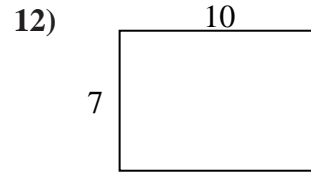
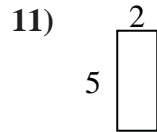
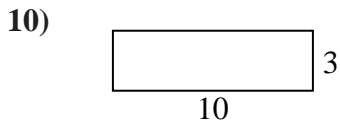
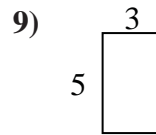
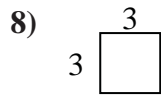
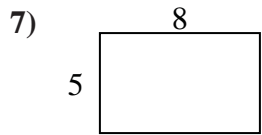
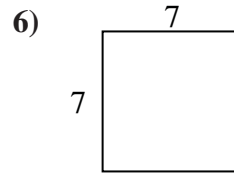
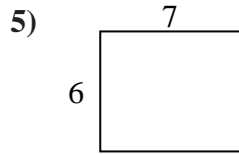
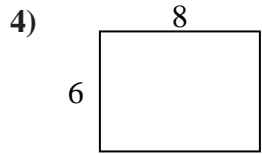
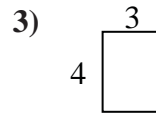
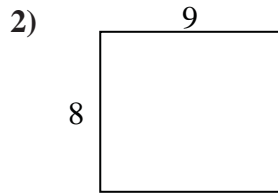
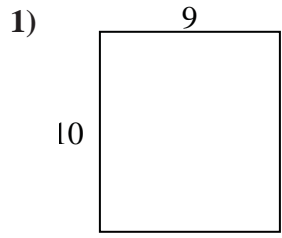
Answers



- 1. _____
- 2. _____
- 3. _____
- 4. _____
- 5. _____
- 6. _____
- 7. _____
- 8. _____
- 9. _____
- 10. _____
- 11. _____
- 12. _____
- 13. _____
- 14. _____
- 15. _____



Find the perimeter and area of each figure. Each figure is in inches (in). Not to scale.



Answers

1. 38 in 90 in²
2. 34 in 72 in²
3. 14 in 12 in²
4. 28 in 48 in²
5. 26 in 42 in²
6. 28 in 49 in²
7. 26 in 40 in²
8. 12 in 9 in²
9. 16 in 15 in²
10. 26 in 30 in²
11. 14 in 10 in²
12. 34 in 70 in²
13. 12 in 8 in²
14. 28 in 40 in²
15. 20 in 21 in²