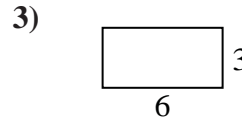
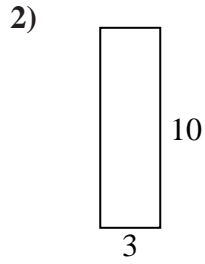
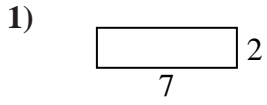


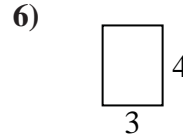
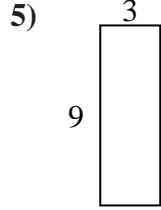
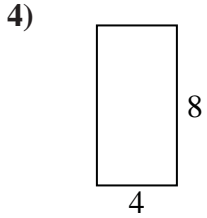


Find the perimeter and area of each figure. Each figure is in inches (in). Not to scale.

Answers



1. _____



2. _____

3. _____

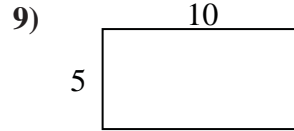
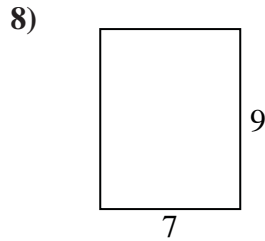
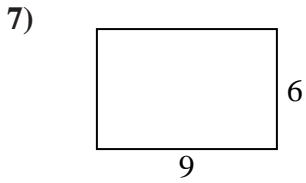
4. _____

5. _____

6. _____

7. _____

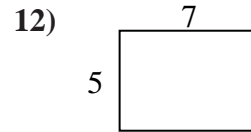
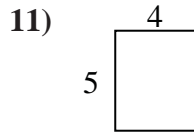
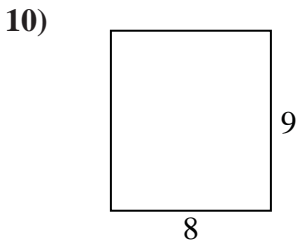
8. _____



9. _____

10. _____

11. _____


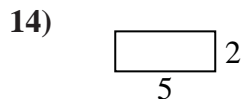
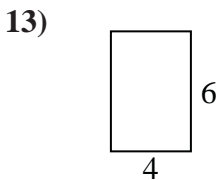


12. _____

13. _____


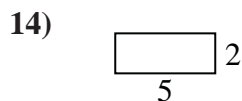
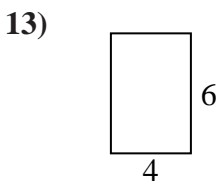
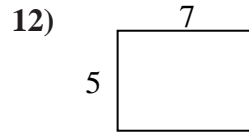
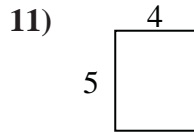
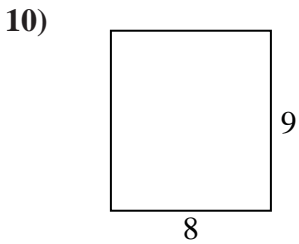
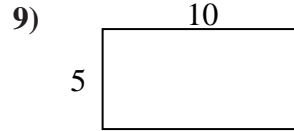
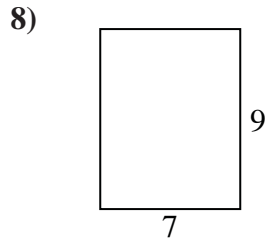
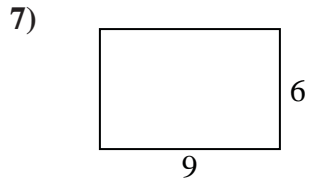
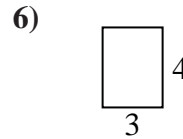
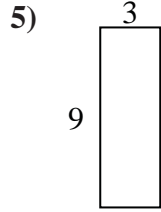
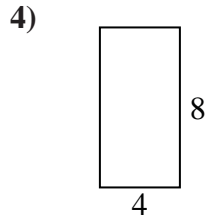
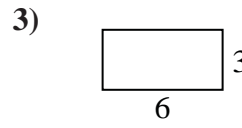
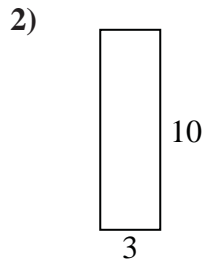
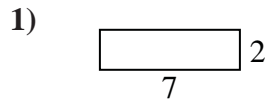
14. _____

15. _____





Find the perimeter and area of each figure. Each figure is in inches (in). Not to scale.



Answers

1. 18 in 14 in²
2. 26 in 30 in²
3. 18 in 18 in²
4. 24 in 32 in²
5. 24 in 27 in²
6. 14 in 12 in²
7. 30 in 54 in²
8. 32 in 63 in²
9. 30 in 50 in²
10. 34 in 72 in²
11. 18 in 20 in²
12. 24 in 35 in²
13. 20 in 24 in²
14. 14 in 10 in²
15. 22 in 18 in²