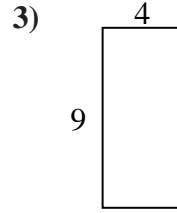
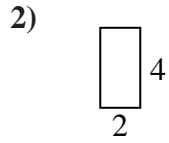
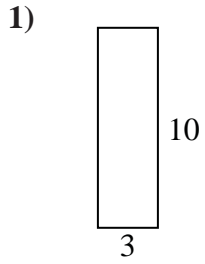


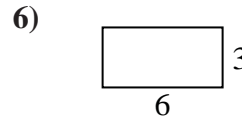
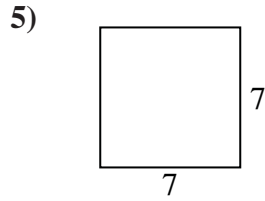
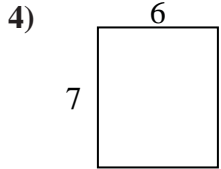


Find the perimeter and area of each figure. Each figure is in inches (in). Not to scale.

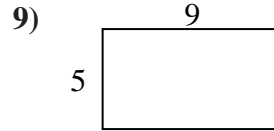
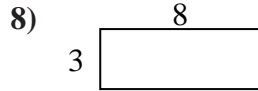
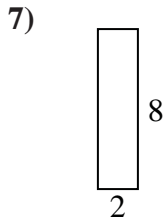
Answers



1. _____



2. _____



3. _____

4. _____

5. _____

6. _____

7. _____

8. _____

9. _____

10. _____

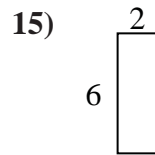
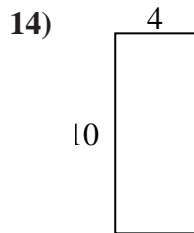
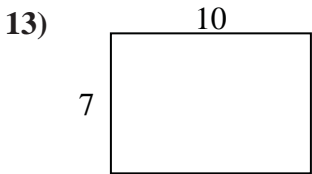
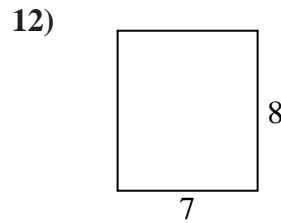
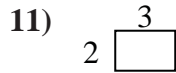
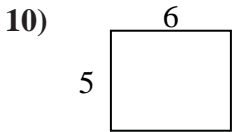
11. _____

12. _____

13. _____

14. _____

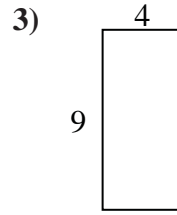
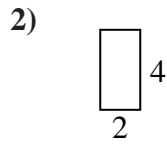
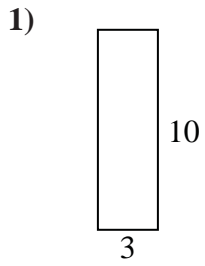
15. _____





Find the perimeter and area of each figure. Each figure is in inches (in). Not to scale.

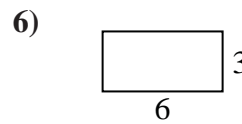
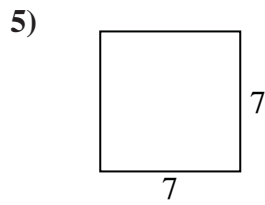
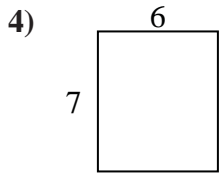
Answers



1. 26 in 30 in²

2. 12 in 8 in²

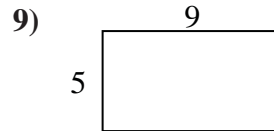
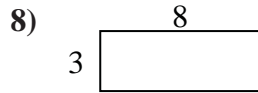
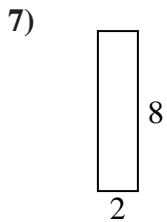
3. 26 in 36 in²



4. 26 in 42 in²

5. 28 in 49 in²

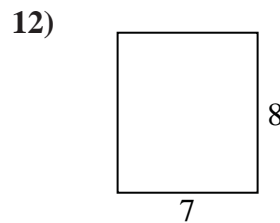
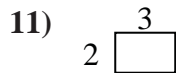
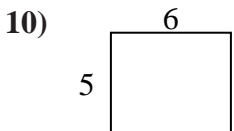
6. 18 in 18 in²



7. 20 in 16 in²

8. 22 in 24 in²

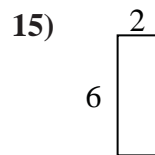
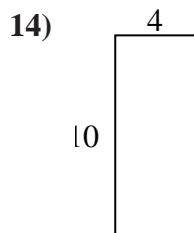
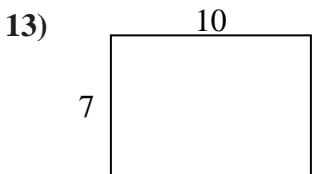
9. 28 in 45 in²



10. 22 in 30 in²

11. 10 in 6 in²

12. 30 in 56 in²



13. 34 in 70 in²

14. 28 in 40 in²

15. 16 in 12 in²