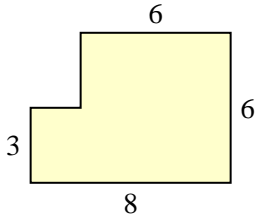


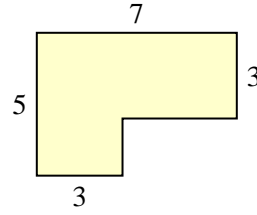


Find the total area of each shape. Measurement is in millimeters (mm). Not to scale.

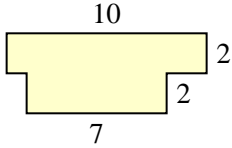
1)



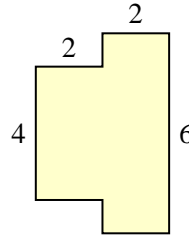
2)



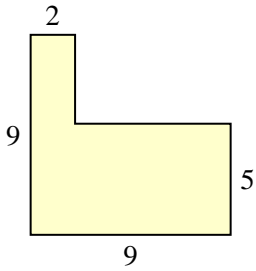
3)



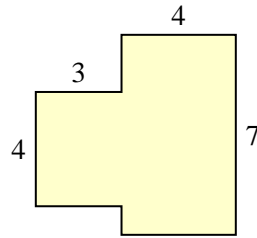
4)



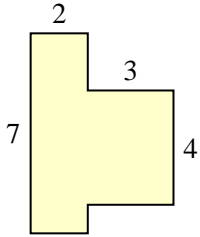
5)



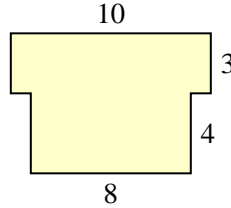
6)



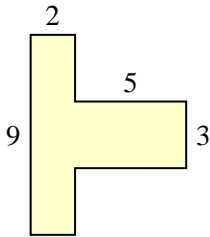
7)



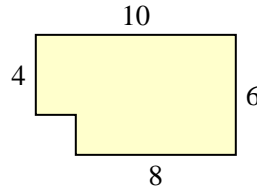
8)



9)



10)

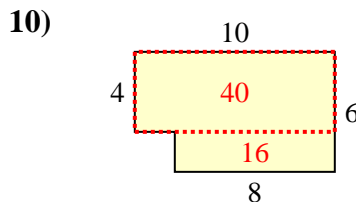
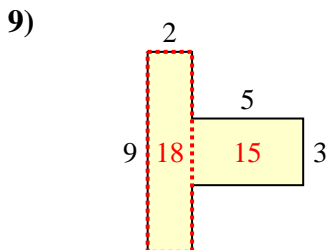
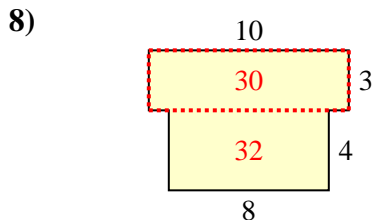
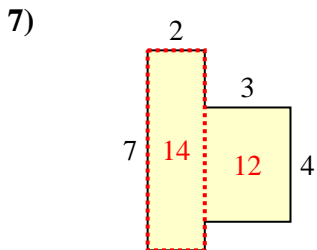
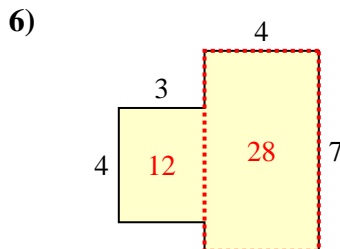
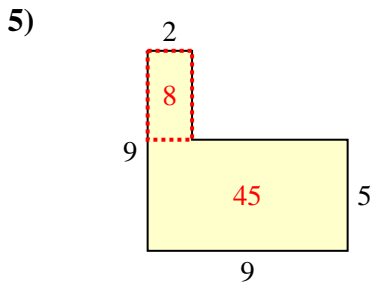
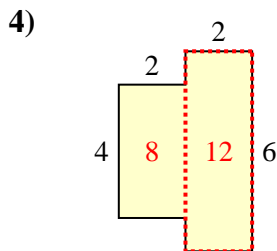
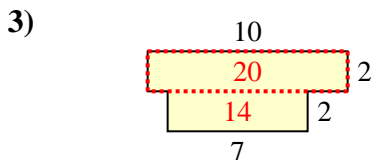
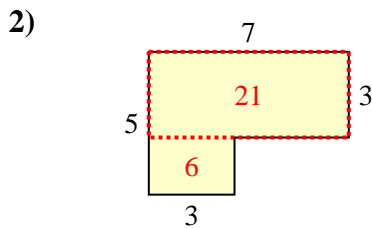
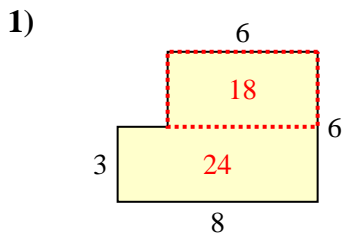


Answers

1. _____
2. _____
3. _____
4. _____
5. _____
6. _____
7. _____
8. _____
9. _____
10. _____



Find the total area of each shape. Measurement is in millimeters (mm). Not to scale.



Answers

1. 42 mm²
2. 27 mm²
3. 34 mm²
4. 20 mm²
5. 53 mm²
6. 40 mm²
7. 26 mm²
8. 62 mm²
9. 33 mm²
10. 56 mm²