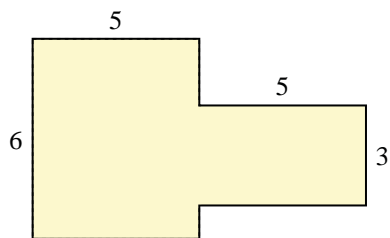




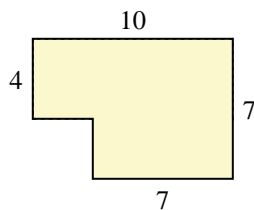
Find the total area of each shape. Measurement is in millimeters (mm). Not to scale.

Answers

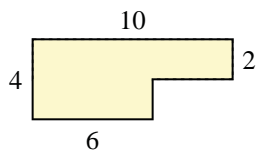
1)



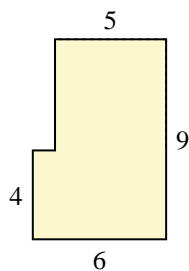
2)



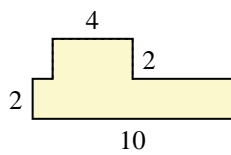
3)



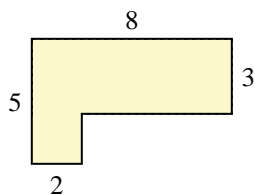
4)



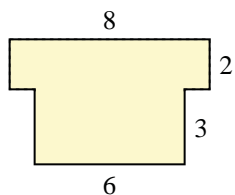
5)



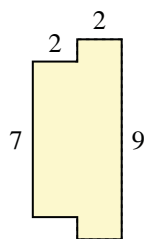
6)



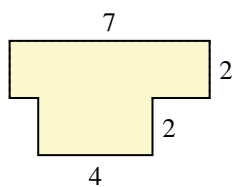
7)



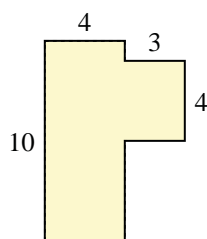
8)



9)



10)



1. \_\_\_\_\_

2. \_\_\_\_\_

3. \_\_\_\_\_

4. \_\_\_\_\_

5. \_\_\_\_\_

6. \_\_\_\_\_

7. \_\_\_\_\_

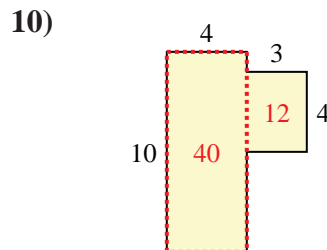
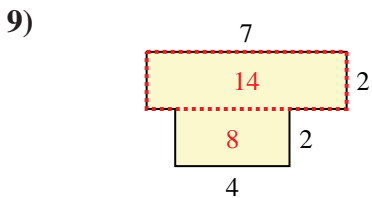
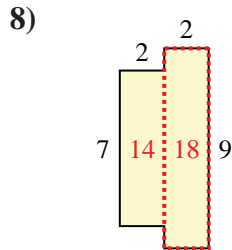
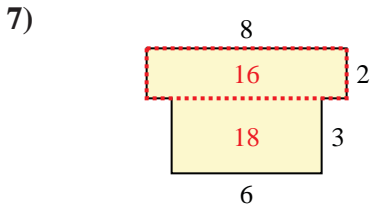
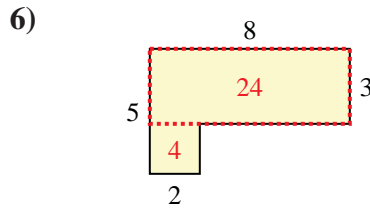
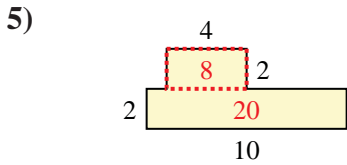
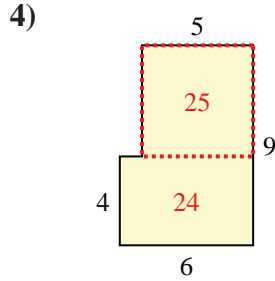
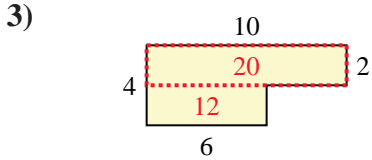
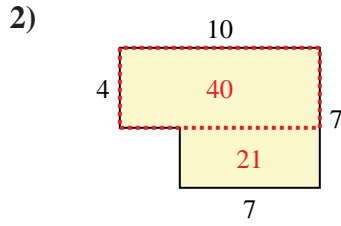
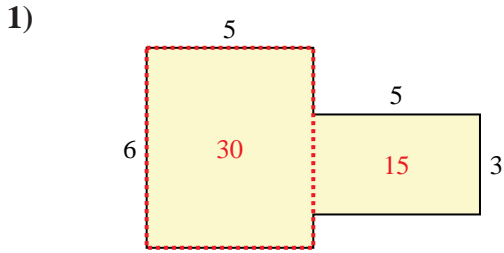
8. \_\_\_\_\_

9. \_\_\_\_\_

10. \_\_\_\_\_



Find the total area of each shape. Measurement is in millimeters (mm). Not to scale.



**Answers**

1. 45 mm<sup>2</sup>

2. 61 mm<sup>2</sup>

3. 32 mm<sup>2</sup>

4. 49 mm<sup>2</sup>

5. 28 mm<sup>2</sup>

6. 28 mm<sup>2</sup>

7. 34 mm<sup>2</sup>

8. 32 mm<sup>2</sup>

9. 22 mm<sup>2</sup>

10. 52 mm<sup>2</sup>