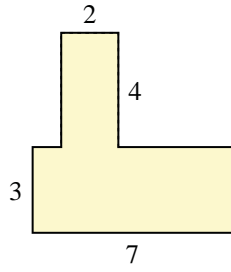




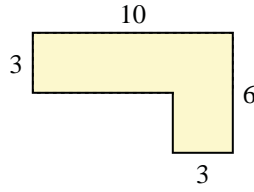
Find the total area of each shape. Measurement is in millimeters (mm). Not to scale.

Answers

1)



2)



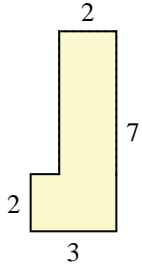
1. _____

2. _____

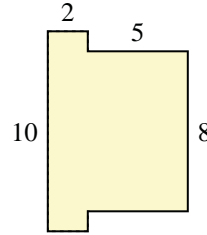
3. _____

4. _____

3)



4)



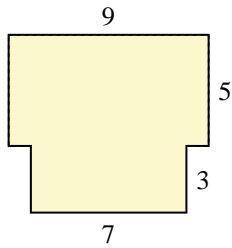
5. _____

6. _____

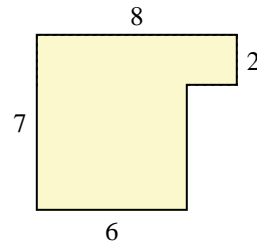
7. _____

8. _____

5)



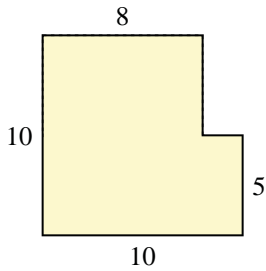
6)



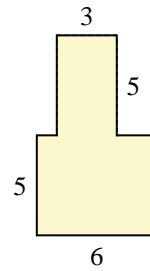
9. _____

10. _____

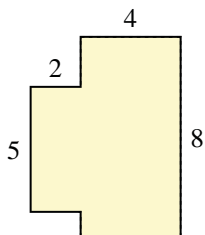
7)



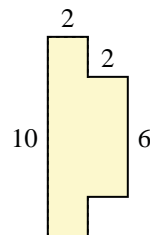
8)



9)

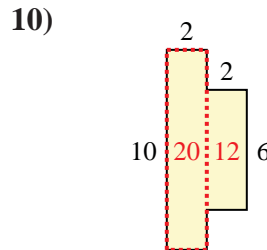
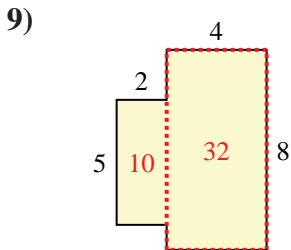
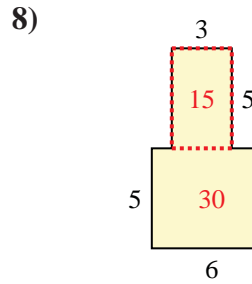
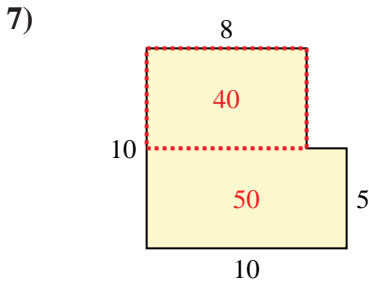
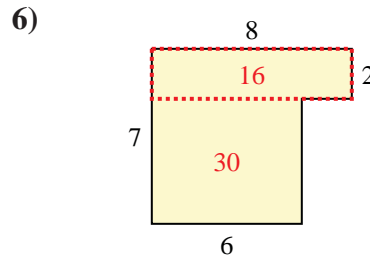
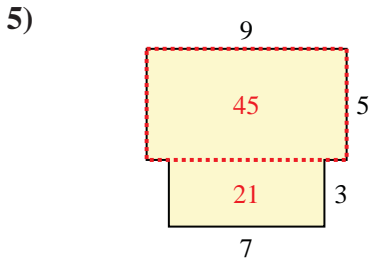
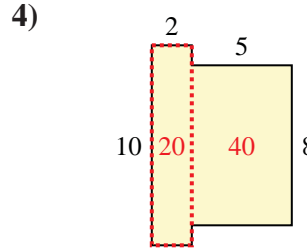
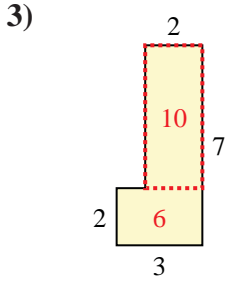
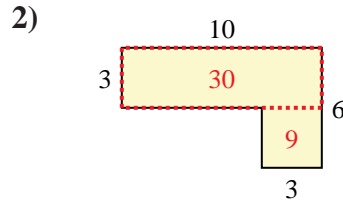
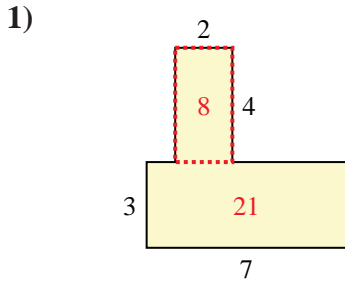


10)





Find the total area of each shape. Measurement is in millimeters (mm). Not to scale.



Answers

1. 29 mm²

2. 39 mm²

3. 16 mm²

4. 60 mm²

5. 66 mm²

6. 46 mm²

7. 90 mm²

8. 45 mm²

9. 42 mm²

10. 32 mm²