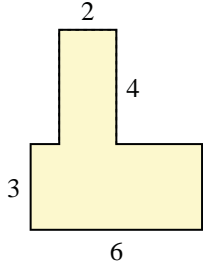




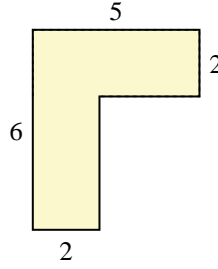
Find the total area of each shape. Measurement is in millimeters (mm). Not to scale.

Answers

1)

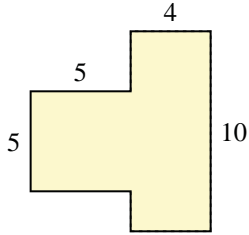


2)

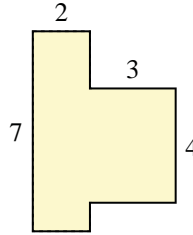


1. _____

3)



4)



2. _____

3. _____

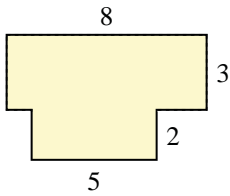
4. _____

5. _____

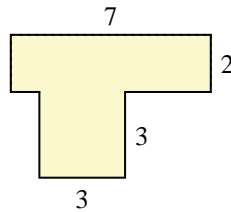
6. _____

7. _____

5)



6)

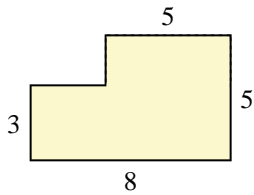


8. _____

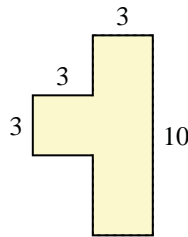
9. _____

10. _____

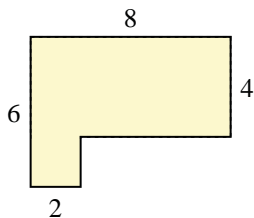
7)



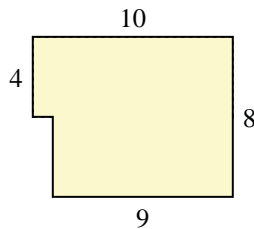
8)



9)



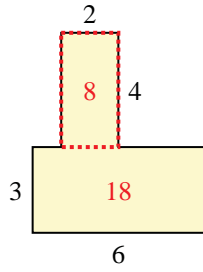
10)



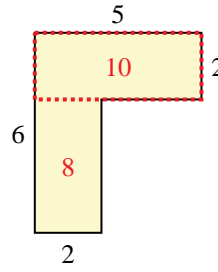


Find the total area of each shape. Measurement is in millimeters (mm). Not to scale.

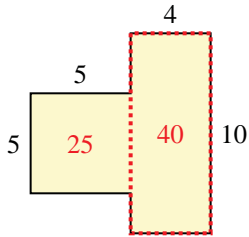
1)



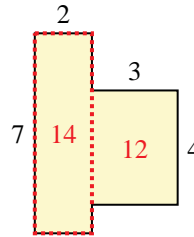
2)



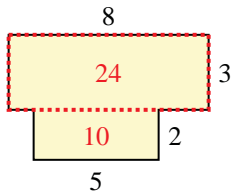
3)



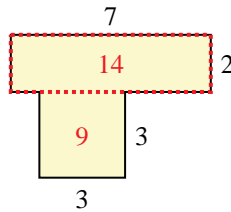
4)



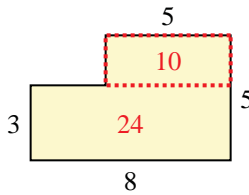
5)



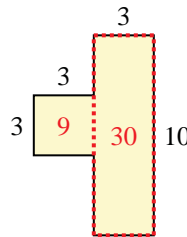
6)



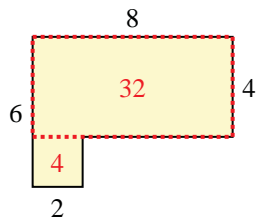
7)



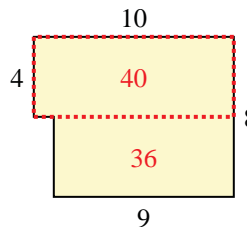
8)



9)



10)



Answers

1. 26 mm²

2. 18 mm²

3. 65 mm²

4. 26 mm²

5. 34 mm²

6. 23 mm²

7. 34 mm²

8. 39 mm²

9. 36 mm²

10. 76 mm²