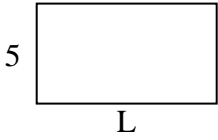


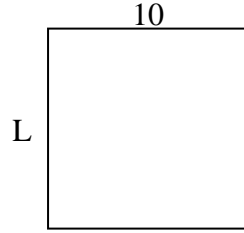


Determine the value of 'L'.

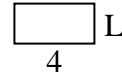
1) Area = $45 u^2$



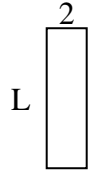
2) Area = $100 u^2$



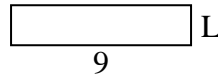
3) Area = $8 u^2$



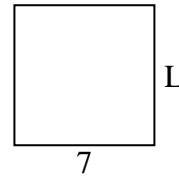
4) Area = $14 u^2$



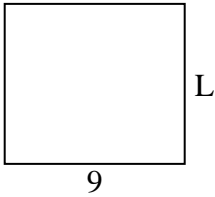
5) Area = $18 u^2$



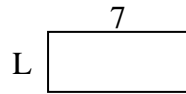
6) Area = $49 u^2$



7) Area = $72 u^2$



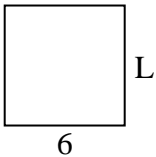
8) Area = $21 u^2$




9) Area = $12 u^2$



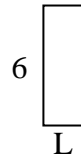
10) Area = $36 u^2$



11) Area = $20 u^2$



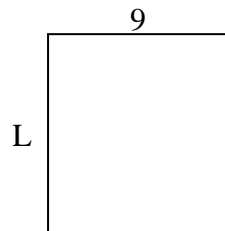
12) Area = $12 u^2$



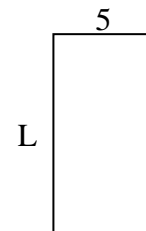
13) Area = $4 u^2$



14) Area = $90 u^2$



15) Area = $50 u^2$



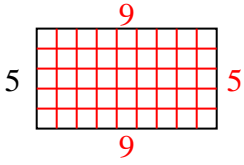
Answers

1. _____
2. _____
3. _____
4. _____
5. _____
6. _____
7. _____
8. _____
9. _____
10. _____
11. _____
12. _____
13. _____
14. _____
15. _____

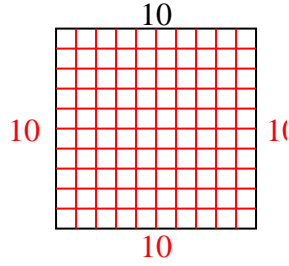


Determine the value of 'L'.

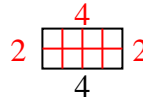
1) Area = $45 u^2$



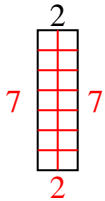
2) Area = $100 u^2$



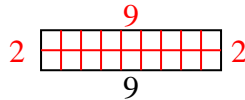
3) Area = $8 u^2$



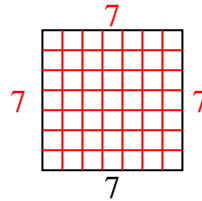
4) Area = $14 u^2$



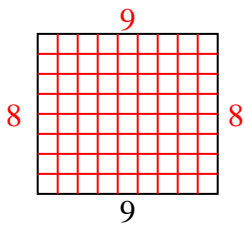
5) Area = $18 u^2$



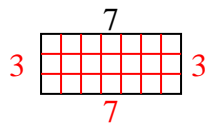
6) Area = $49 u^2$



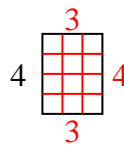
7) Area = $72 u^2$



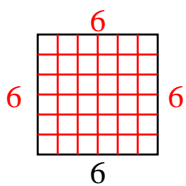
8) Area = $21 u^2$



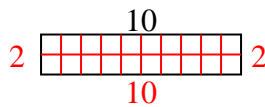
9) Area = $12 u^2$



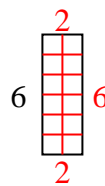
10) Area = $36 u^2$



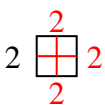
11) Area = $20 u^2$



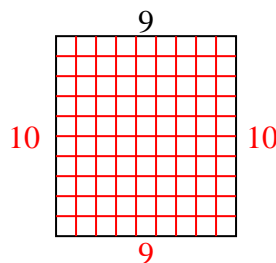
12) Area = $12 u^2$



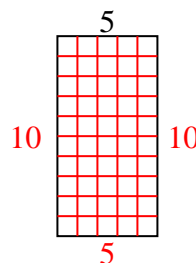
13) Area = $4 u^2$



14) Area = $90 u^2$



15) Area = $50 u^2$



Answers

1. 9
2. 10
3. 2
4. 7
5. 2
6. 7
7. 8
8. 3
9. 3
10. 6
11. 2
12. 2
13. 2
14. 10
15. 10