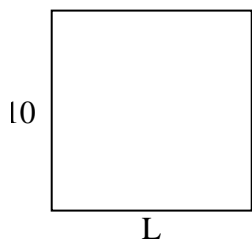


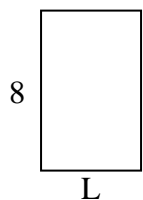


Determine the value of 'L'.

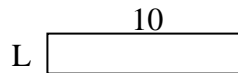
1) Area = $100 u^2$



2) Area = $40 u^2$



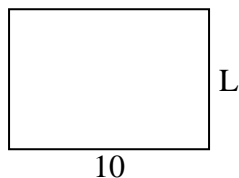
3) Area = $20 u^2$



4) Area = $30 u^2$



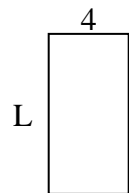
5) Area = $70 u^2$



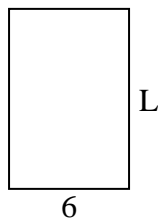
6) Area = $9 u^2$



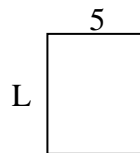
7) Area = $32 u^2$



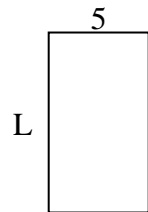
8) Area = $54 u^2$



9) Area = $30 u^2$



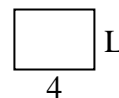
10) Area = $45 u^2$



11) Area = $10 u^2$




12) Area = $12 u^2$



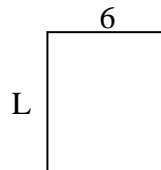
13) Area = $6 u^2$



14) Area = $18 u^2$



15) Area = $42 u^2$



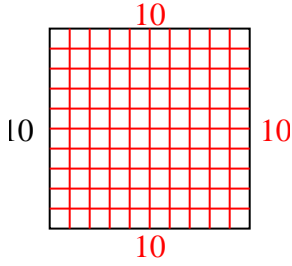
Answers

1. _____
2. _____
3. _____
4. _____
5. _____
6. _____
7. _____
8. _____
9. _____
10. _____
11. _____
12. _____
13. _____
14. _____
15. _____

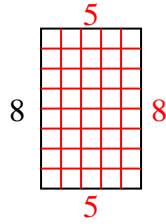


Determine the value of 'L'.

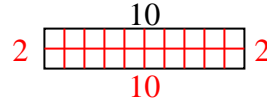
1) Area = $100 u^2$



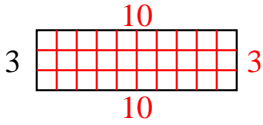
2) Area = $40 u^2$



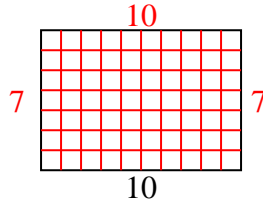
3) Area = $20 u^2$



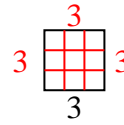
4) Area = $30 u^2$



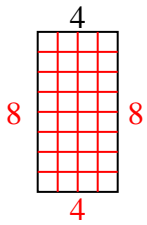
5) Area = $70 u^2$



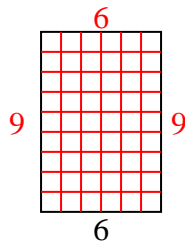
6) Area = $9 u^2$



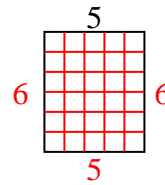
7) Area = $32 u^2$



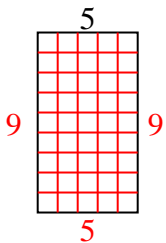
8) Area = $54 u^2$



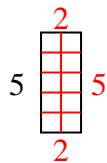
9) Area = $30 u^2$



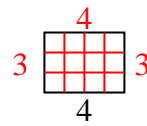
10) Area = $45 u^2$



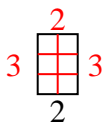
11) Area = $10 u^2$



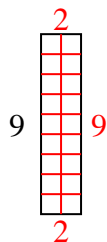
12) Area = $12 u^2$



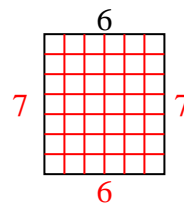
13) Area = $6 u^2$



14) Area = $18 u^2$



15) Area = $42 u^2$



Answers

1. 10
2. 5
3. 2
4. 10
5. 7
6. 3
7. 8
8. 9
9. 6
10. 9
11. 2
12. 3
13. 3
14. 2
15. 7