


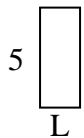


Determine the value of 'L'.

1) Area = $36 u^2$



2) Area = $10 u^2$



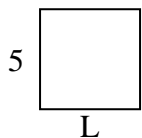
3) Area = $40 u^2$



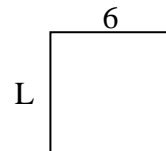
4) Area = $14 u^2$



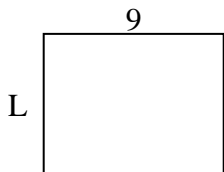
5) Area = $25 u^2$



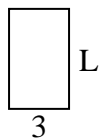
6) Area = $36 u^2$



7) Area = $63 u^2$




8) Area = $15 u^2$



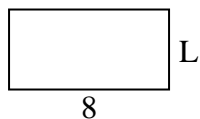
9) Area = $6 u^2$



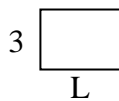
10) Area = $45 u^2$



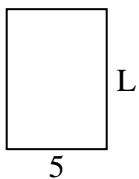
11) Area = $32 u^2$



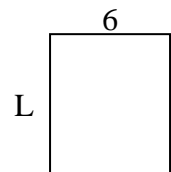
12) Area = $12 u^2$



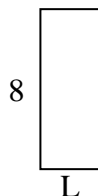
13) Area = $35 u^2$



14) Area = $42 u^2$



15) Area = $24 u^2$



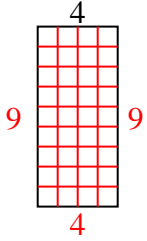
Answers

1. _____
2. _____
3. _____
4. _____
5. _____
6. _____
7. _____
8. _____
9. _____
10. _____
11. _____
12. _____
13. _____
14. _____
15. _____

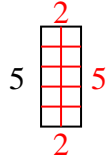


Determine the value of 'L'.

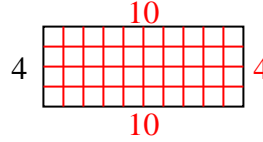
1) Area = $36 u^2$



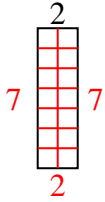
2) Area = $10 u^2$



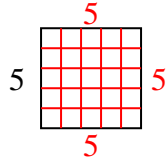
3) Area = $40 u^2$



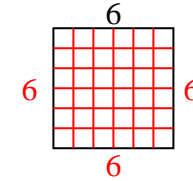
4) Area = $14 u^2$



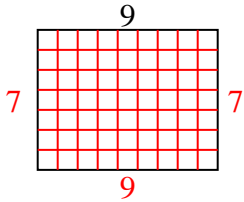
5) Area = $25 u^2$



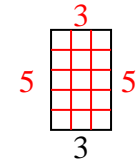
6) Area = $36 u^2$



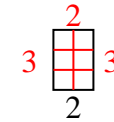
7) Area = $63 u^2$



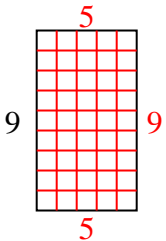
8) Area = $15 u^2$



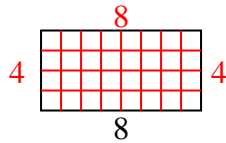
9) Area = $6 u^2$



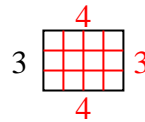
10) Area = $45 u^2$



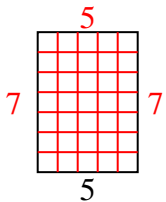
11) Area = $32 u^2$



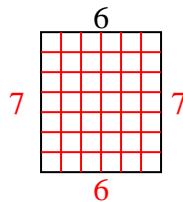
12) Area = $12 u^2$



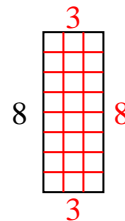
13) Area = $35 u^2$



14) Area = $42 u^2$



15) Area = $24 u^2$



Answers

1. 9

2. 2

3. 10

4. 7

5. 5

6. 6

7. 7

8. 5

9. 3

10. 5

11. 4

12. 4

13. 7

14. 7

15. 3