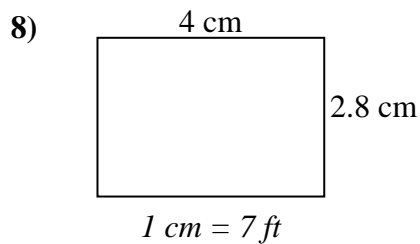
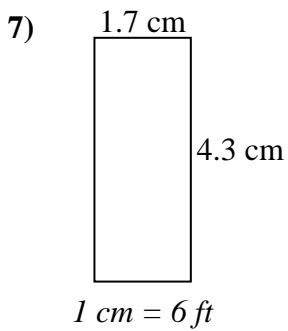
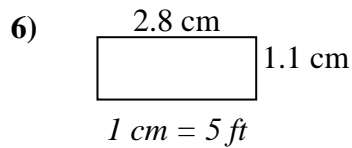
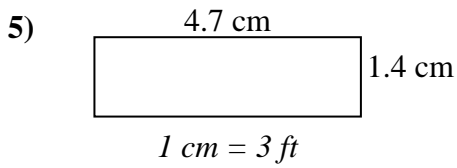
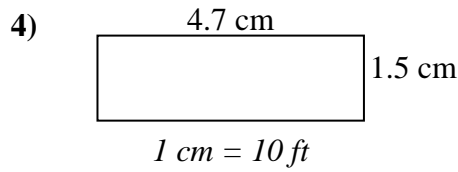
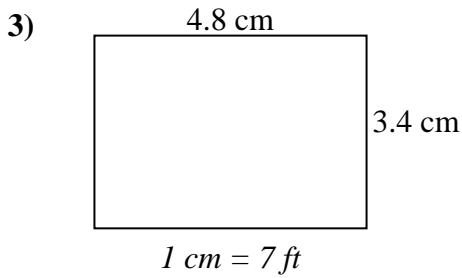
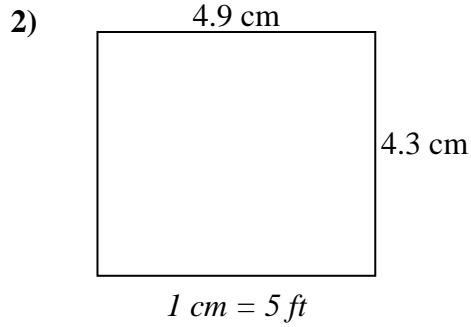
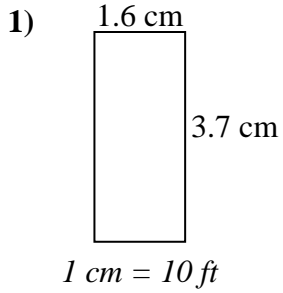




Determine the actual width, height and area of each scale rectangle.

Round the area to the nearest whole number.



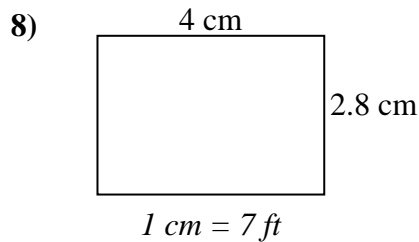
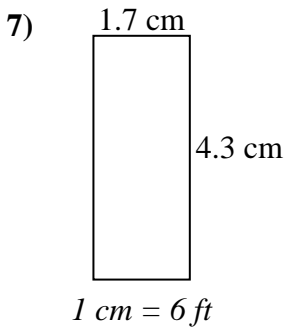
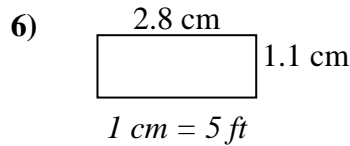
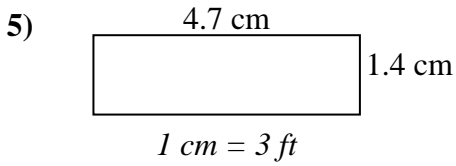
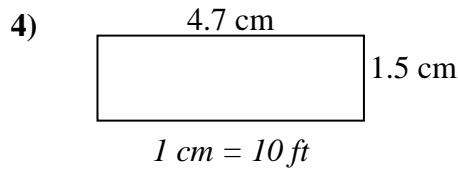
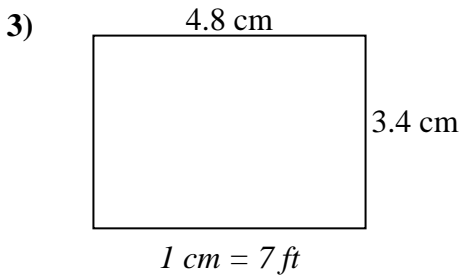
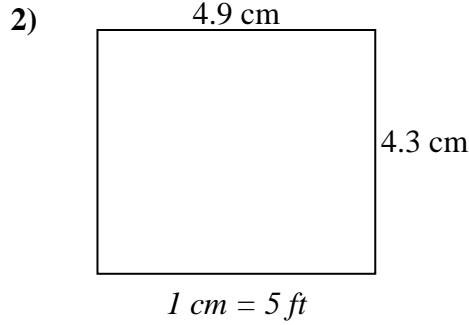
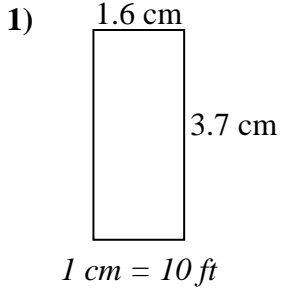
Answers

1. _____
2. _____
3. _____
4. _____
5. _____
6. _____
7. _____
8. _____



Determine the actual width, height and area of each scale rectangle.

Round the area to the nearest whole number.



Answers

1.	<u>16 ft</u>	<u>37 ft</u>	<u>592 ft²</u>
2.	<u>24.5 ft</u>	<u>21.5 ft</u>	<u>527 ft²</u>
3.	<u>33.6 ft</u>	<u>23.8 ft</u>	<u>800 ft²</u>
4.	<u>47 ft</u>	<u>15 ft</u>	<u>705 ft²</u>
5.	<u>14.1 ft</u>	<u>4.2 ft</u>	<u>59 ft²</u>
6.	<u>14 ft</u>	<u>5.5 ft</u>	<u>77 ft²</u>
7.	<u>10.2 ft</u>	<u>25.8 ft</u>	<u>263 ft²</u>
8.	<u>28 ft</u>	<u>19.6 ft</u>	<u>549 ft²</u>