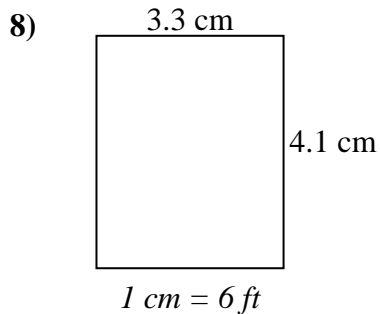
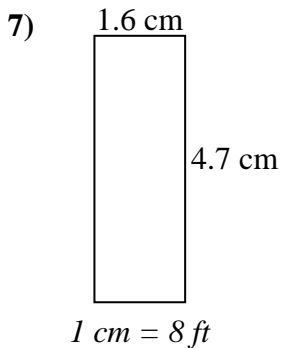
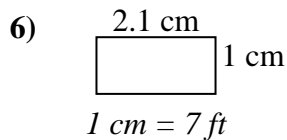
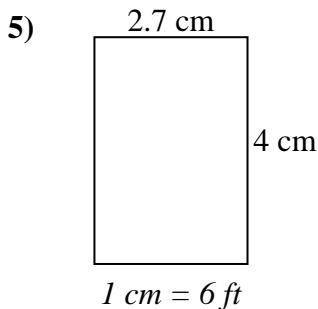
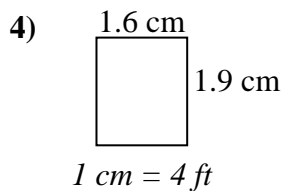
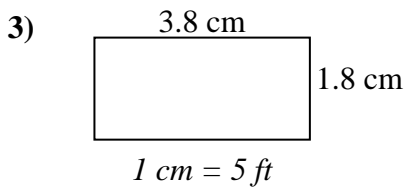
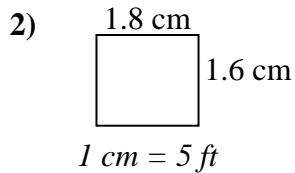
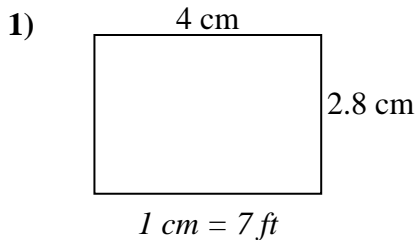




Determine the actual width, height and area of each scale rectangle.

Round the area to the nearest whole number.



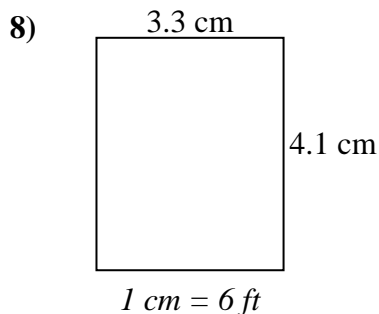
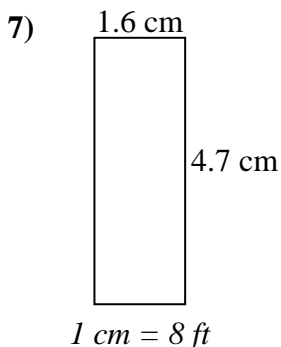
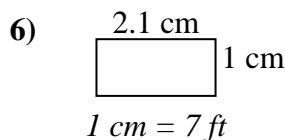
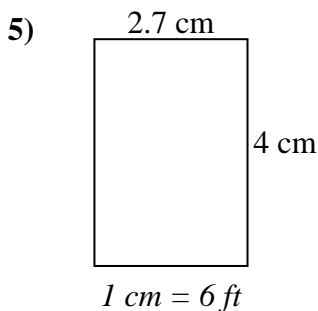
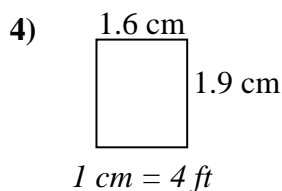
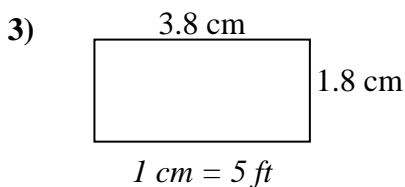
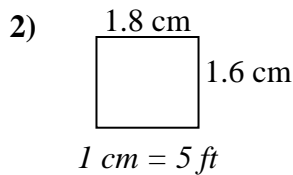
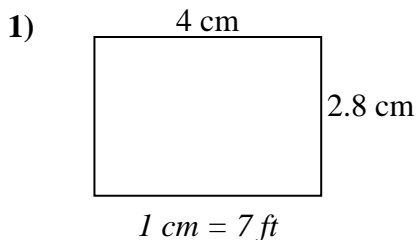
Answers

1. _____
2. _____
3. _____
4. _____
5. _____
6. _____
7. _____
8. _____



Determine the actual width, height and area of each scale rectangle.

Round the area to the nearest whole number.



Answers

1.	<u>28 ft</u>	<u>19.6 ft</u>	<u>549 ft²</u>
2.	<u>9 ft</u>	<u>8 ft</u>	<u>72 ft²</u>
3.	<u>19 ft</u>	<u>9 ft</u>	<u>171 ft²</u>
4.	<u>6.4 ft</u>	<u>7.6 ft</u>	<u>49 ft²</u>
5.	<u>16.2 ft</u>	<u>24 ft</u>	<u>389 ft²</u>
6.	<u>14.7 ft</u>	<u>7 ft</u>	<u>103 ft²</u>
7.	<u>12.8 ft</u>	<u>37.6 ft</u>	<u>481 ft²</u>
8.	<u>19.8 ft</u>	<u>24.6 ft</u>	<u>487 ft²</u>