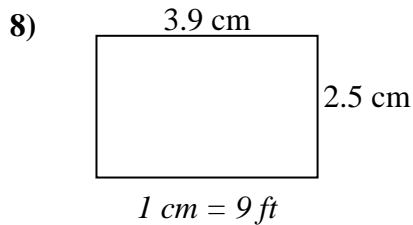
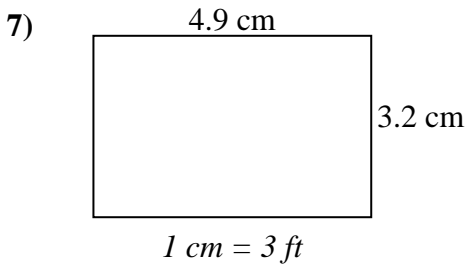
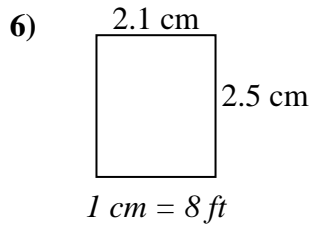
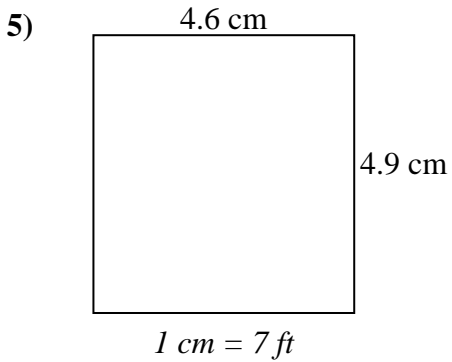
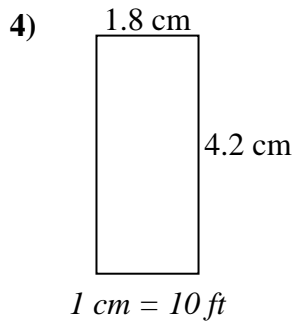
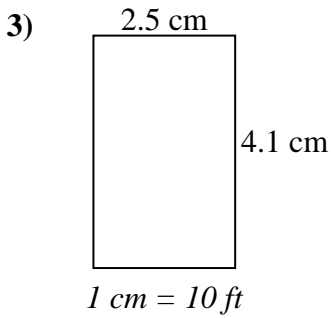
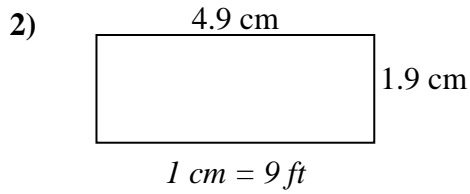
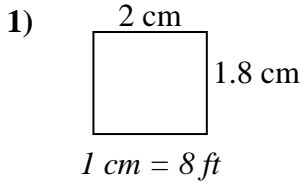




Determine the actual width, height and area of each scale rectangle.

Round the area to the nearest whole number.



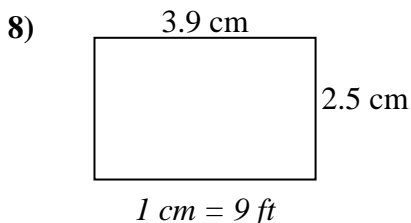
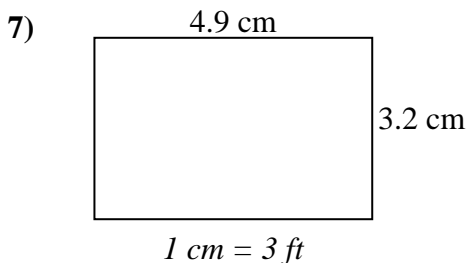
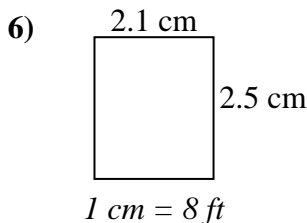
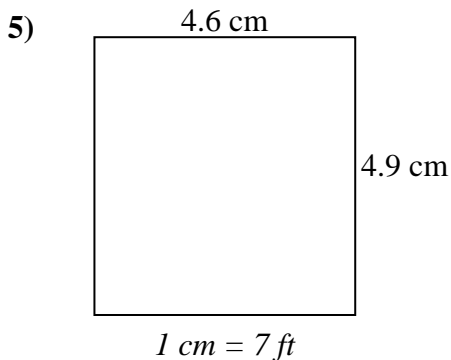
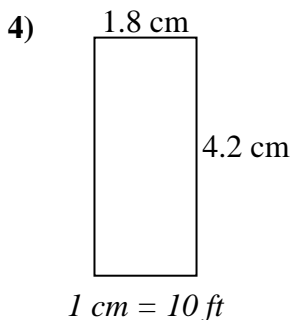
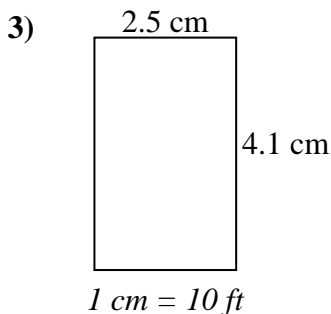
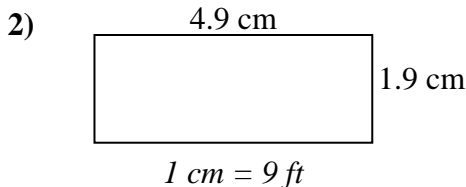
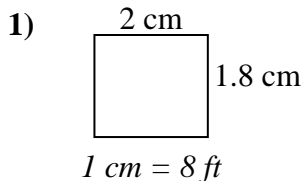
Answers

1. _____
2. _____
3. _____
4. _____
5. _____
6. _____
7. _____
8. _____



Determine the actual width, height and area of each scale rectangle.

Round the area to the nearest whole number.



Answers

1.	<u>16 ft</u>	<u>14.4 ft</u>	<u>230 ft²</u>
2.	<u>44.1 ft</u>	<u>17.1 ft</u>	<u>754 ft²</u>
3.	<u>25 ft</u>	<u>41 ft</u>	<u>1025 ft²</u>
4.	<u>18 ft</u>	<u>42 ft</u>	<u>756 ft²</u>
5.	<u>32.2 ft</u>	<u>34.3 ft</u>	<u>1104 ft²</u>
6.	<u>16.8 ft</u>	<u>20 ft</u>	<u>336 ft²</u>
7.	<u>14.7 ft</u>	<u>9.6 ft</u>	<u>141 ft²</u>
8.	<u>35.1 ft</u>	<u>22.5 ft</u>	<u>790 ft²</u>