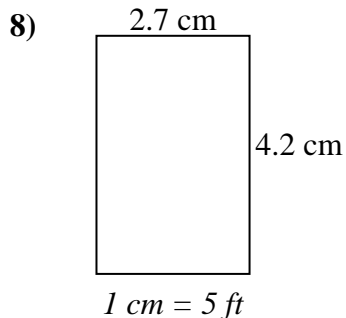
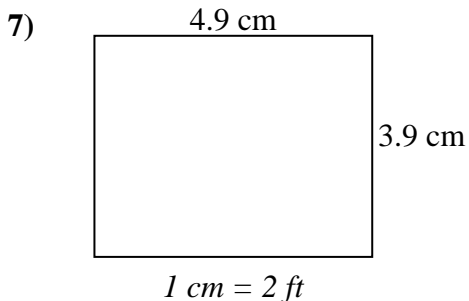
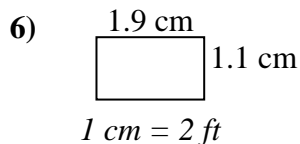
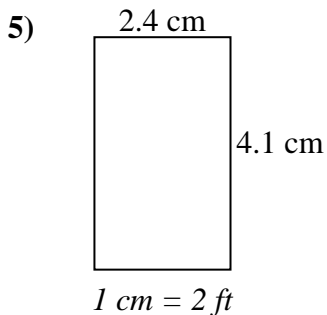
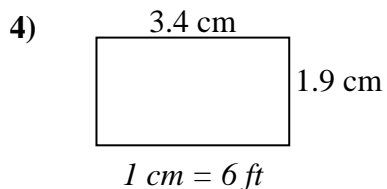
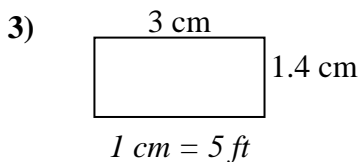
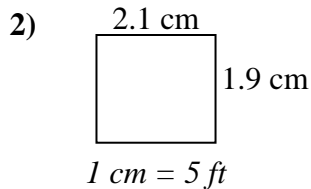
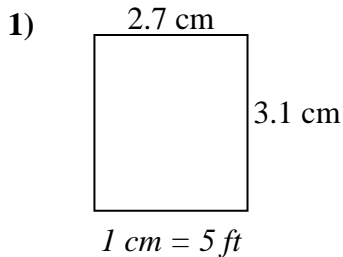




Determine the actual width, height and area of each scale rectangle.

Round the area to the nearest whole number.



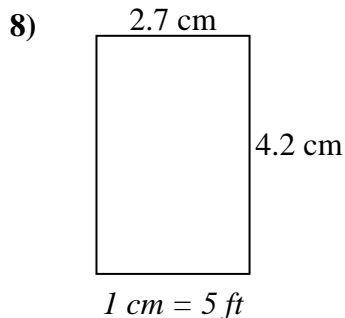
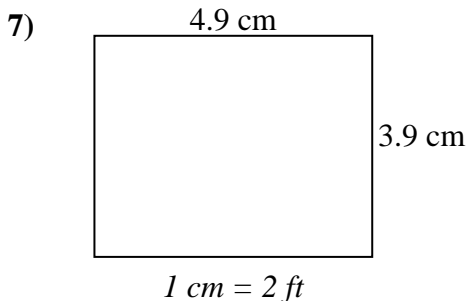
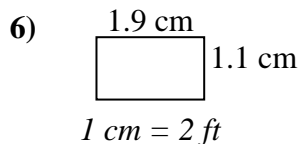
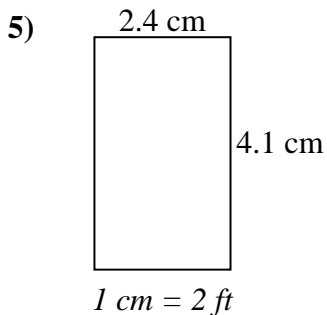
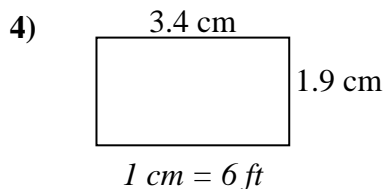
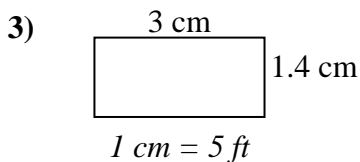
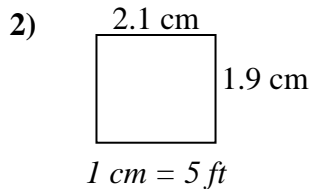
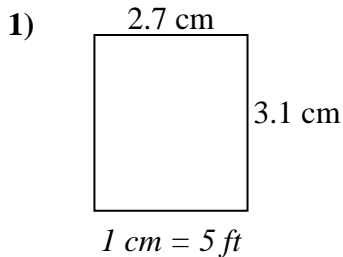
Answers

1. _____
2. _____
3. _____
4. _____
5. _____
6. _____
7. _____
8. _____



Determine the actual width, height and area of each scale rectangle.

Round the area to the nearest whole number.



Answers

1. 13.5 ft 15.5 ft 209 ft²
2. 10.5 ft 9.5 ft 100 ft²
3. 15 ft 7 ft 105 ft²
4. 20.4 ft 11.4 ft 233 ft²
5. 4.8 ft 8.2 ft 39 ft²
6. 3.8 ft 2.2 ft 8 ft²
7. 9.8 ft 7.8 ft 76 ft²
8. 13.5 ft 21 ft 284 ft²