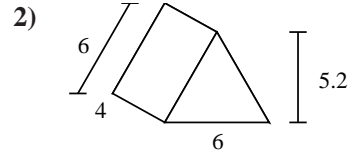
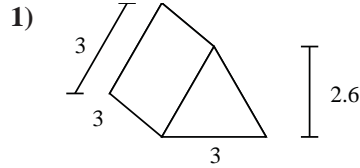
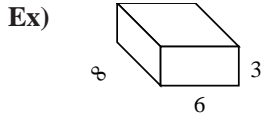




Find the surface area of each figure.

**Answers**



Ex. **180**

1. \_\_\_\_\_

2. \_\_\_\_\_

3. \_\_\_\_\_

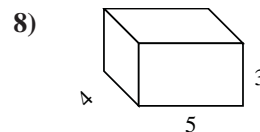
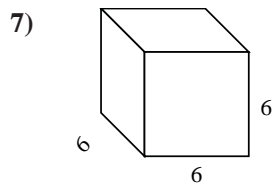
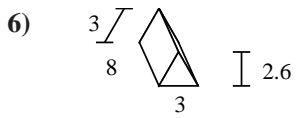
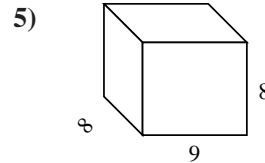
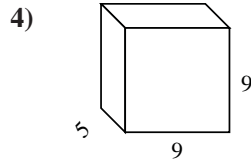
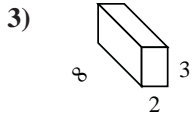
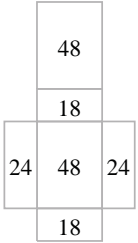
4. \_\_\_\_\_

5. \_\_\_\_\_

6. \_\_\_\_\_

7. \_\_\_\_\_

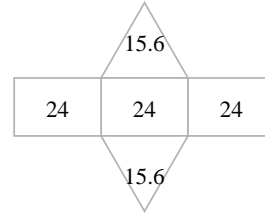
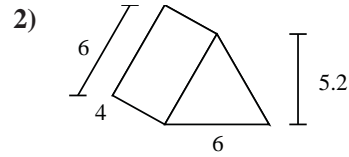
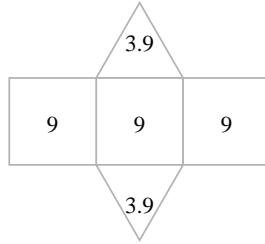
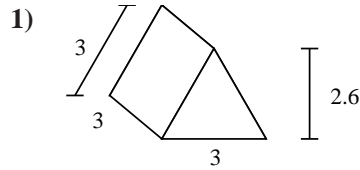
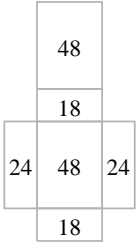
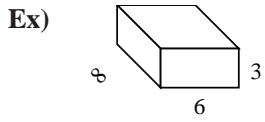
8. \_\_\_\_\_





Find the surface area of each figure.

Answers



Ex. 180

1. 34.8

2. 103.2

3. 92

4. 342

5. 416

6. 79.8

7. 216

8. 94

