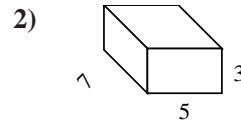
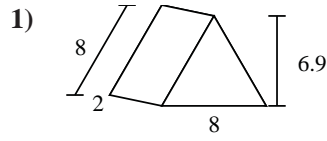
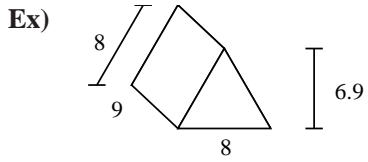




Find the surface area of each figure.

Answers



Ex. 271.2

1. _____

2. _____

3. _____

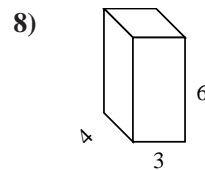
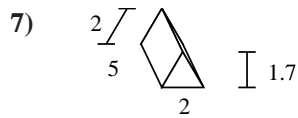
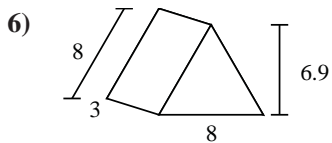
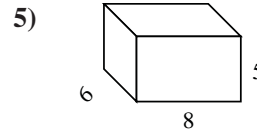
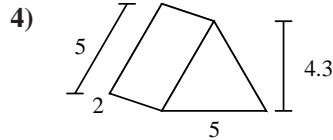
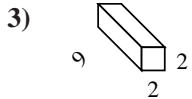
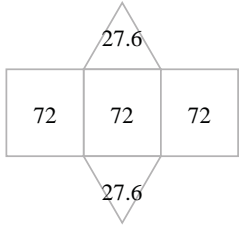
4. _____

5. _____

6. _____

7. _____

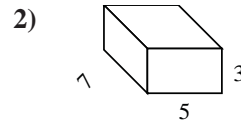
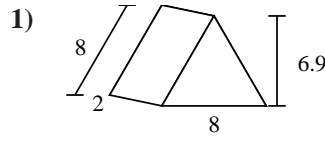
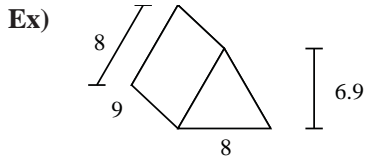
8. _____





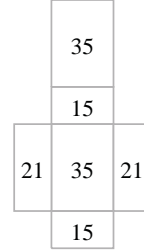
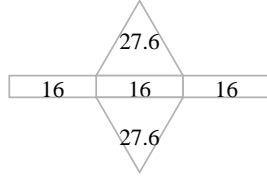
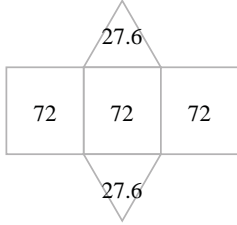
Find the surface area of each figure.

Answers



Ex. 271.2

1. 103.2

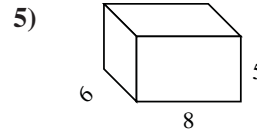
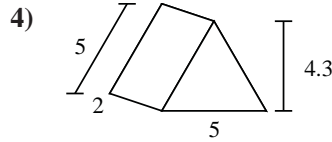
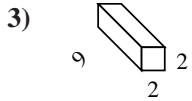


2. 142

3. 80

4. 51.5

5. 236



6. 127.2

7. 33.4

8. 108

