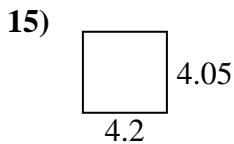
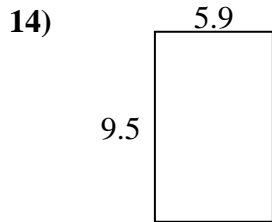
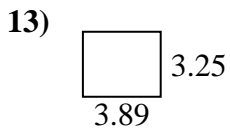
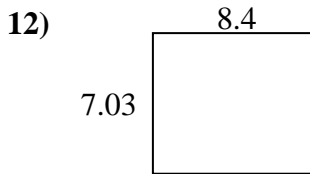
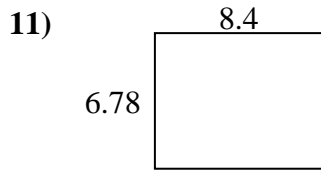
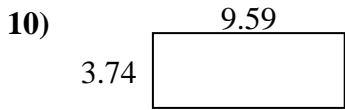
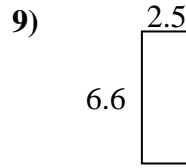
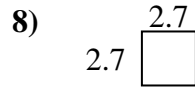
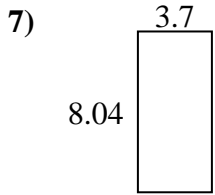
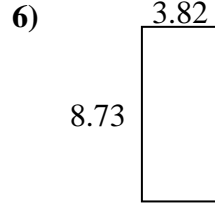
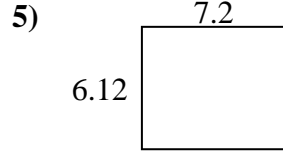
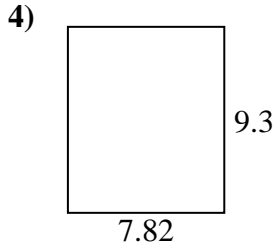
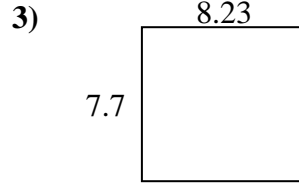
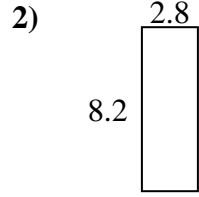
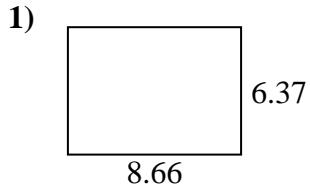




Find the perimeter and area of each figure. Each figure is in centimeters (cm). Not to scale.

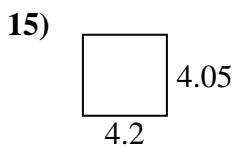
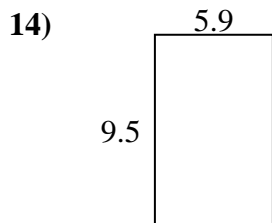
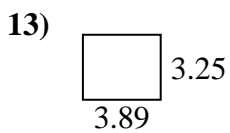
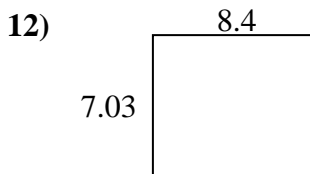
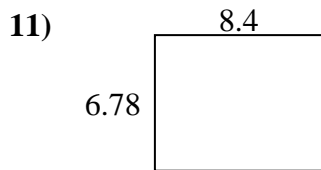
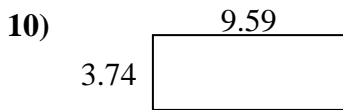
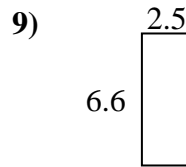
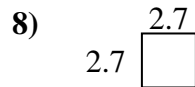
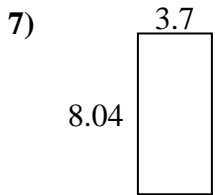
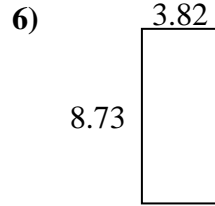
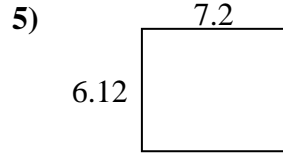
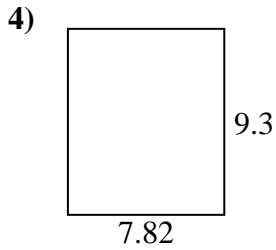
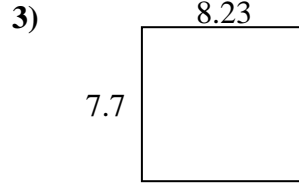
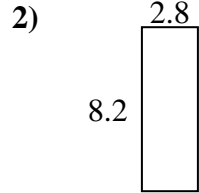
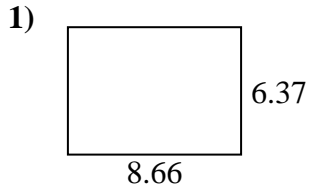
Answers



1. \_\_\_\_\_
2. \_\_\_\_\_
3. \_\_\_\_\_
4. \_\_\_\_\_
5. \_\_\_\_\_
6. \_\_\_\_\_
7. \_\_\_\_\_
8. \_\_\_\_\_
9. \_\_\_\_\_
10. \_\_\_\_\_
11. \_\_\_\_\_
12. \_\_\_\_\_
13. \_\_\_\_\_
14. \_\_\_\_\_
15. \_\_\_\_\_



Find the perimeter and area of each figure. Each figure is in centimeters (cm). Not to scale.



Answers

1. 30.06 cm    55.1642 cm<sup>2</sup>
2. 22 cm    22.96 cm<sup>2</sup>
3. 31.86 cm    63.371 cm<sup>2</sup>
4. 34.24 cm    72.726 cm<sup>2</sup>
5. 26.64 cm    44.064 cm<sup>2</sup>
6. 25.1 cm    33.3486 cm<sup>2</sup>
7. 23.48 cm    29.748 cm<sup>2</sup>
8. 10.8 cm    7.29 cm<sup>2</sup>
9. 18.2 cm    16.5 cm<sup>2</sup>
10. 26.66 cm    35.8666 cm<sup>2</sup>
11. 30.36 cm    56.952 cm<sup>2</sup>
12. 30.86 cm    59.052 cm<sup>2</sup>
13. 14.28 cm    12.6425 cm<sup>2</sup>
14. 30.8 cm    56.05 cm<sup>2</sup>
15. 16.5 cm    17.01 cm<sup>2</sup>