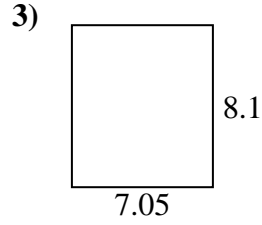
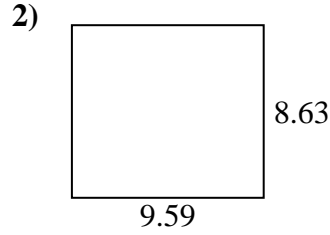
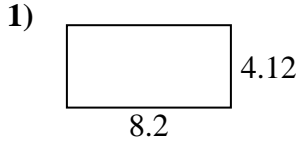




Find the perimeter and area of each figure. Each figure is in centimeters (cm). Not to scale.

Answers

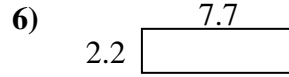
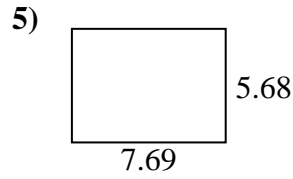
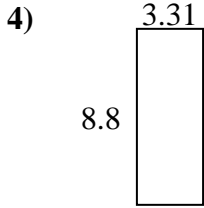


1. \_\_\_\_\_

2. \_\_\_\_\_

3. \_\_\_\_\_

4. \_\_\_\_\_

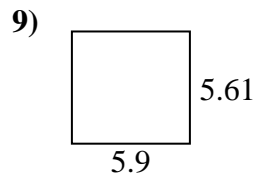
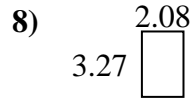
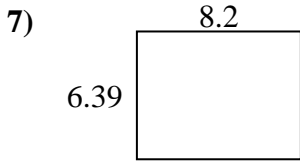


5. \_\_\_\_\_

6. \_\_\_\_\_

7. \_\_\_\_\_

8. \_\_\_\_\_

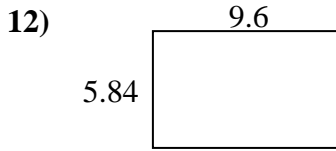
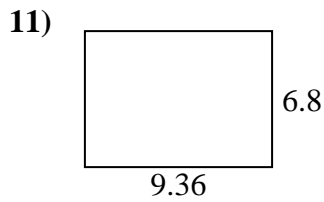
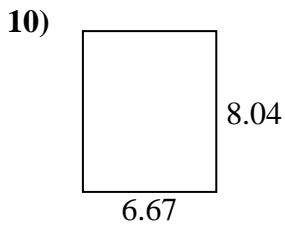


9. \_\_\_\_\_

10. \_\_\_\_\_

11. \_\_\_\_\_

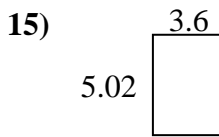
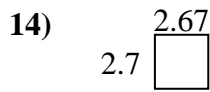
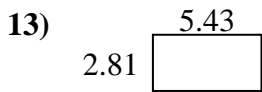
12. \_\_\_\_\_



13. \_\_\_\_\_

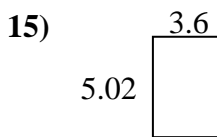
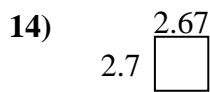
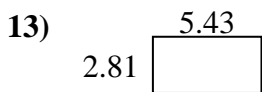
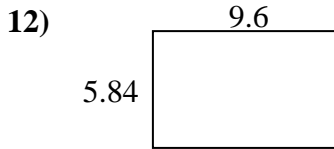
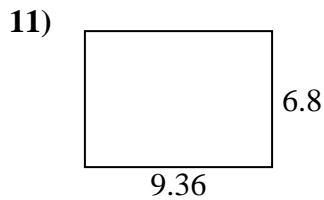
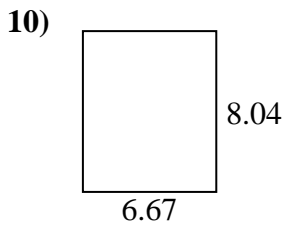
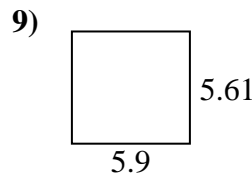
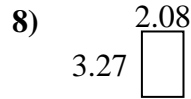
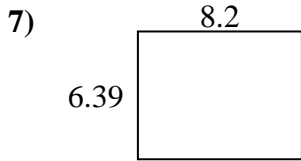
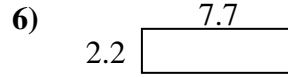
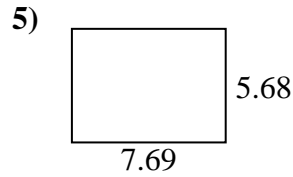
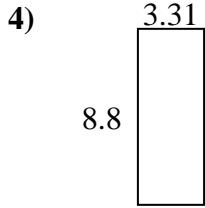
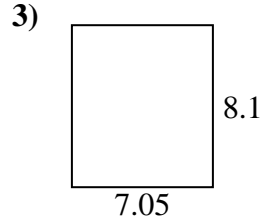
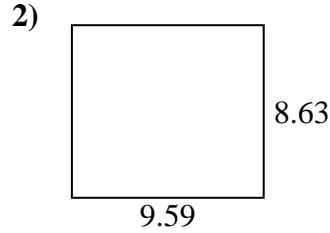
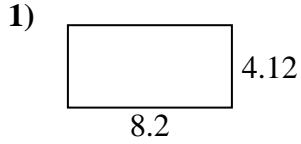
14. \_\_\_\_\_

15. \_\_\_\_\_





Find the perimeter and area of each figure. Each figure is in centimeters (cm). Not to scale.



Answers

1. 24.64 cm    33.784 cm<sup>2</sup>
2. 36.44 cm    82.7617 cm<sup>2</sup>
3. 30.3 cm    57.105 cm<sup>2</sup>
4. 24.22 cm    29.128 cm<sup>2</sup>
5. 26.74 cm    43.6792 cm<sup>2</sup>
6. 19.8 cm    16.94 cm<sup>2</sup>
7. 29.18 cm    52.398 cm<sup>2</sup>
8. 10.7 cm    6.8016 cm<sup>2</sup>
9. 23.02 cm    33.099 cm<sup>2</sup>
10. 29.42 cm    53.6268 cm<sup>2</sup>
11. 32.32 cm    63.648 cm<sup>2</sup>
12. 30.88 cm    56.064 cm<sup>2</sup>
13. 16.48 cm    15.2583 cm<sup>2</sup>
14. 10.74 cm    7.209 cm<sup>2</sup>
15. 17.24 cm    18.072 cm<sup>2</sup>