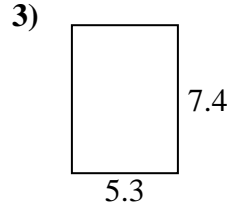
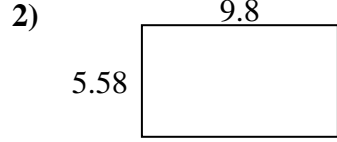
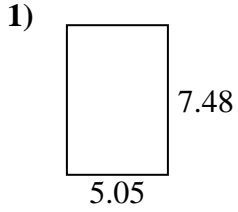




Find the perimeter and area of each figure. Each figure is in centimeters (cm). Not to scale.

Answers



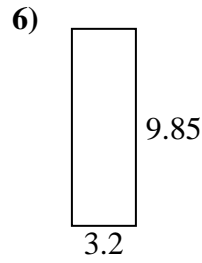
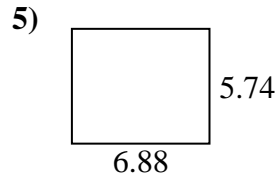
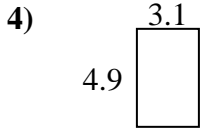
1. \_\_\_\_\_

2. \_\_\_\_\_

3. \_\_\_\_\_

4. \_\_\_\_\_

5. \_\_\_\_\_

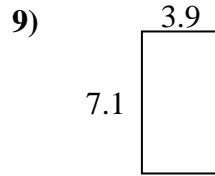
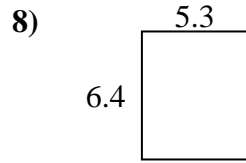
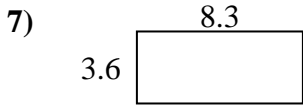


6. \_\_\_\_\_

7. \_\_\_\_\_

8. \_\_\_\_\_

9. \_\_\_\_\_

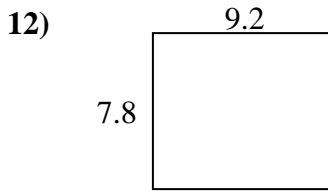
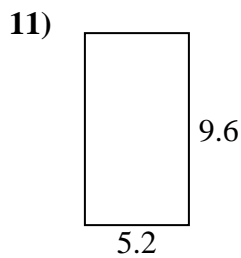
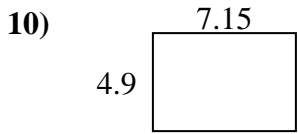


10. \_\_\_\_\_

11. \_\_\_\_\_

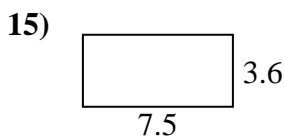
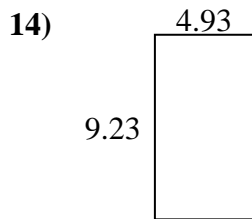
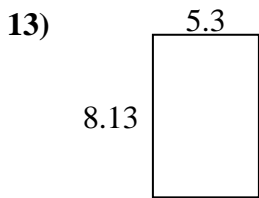
12. \_\_\_\_\_

13. \_\_\_\_\_



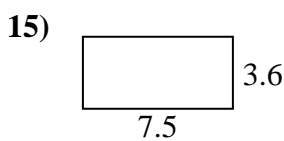
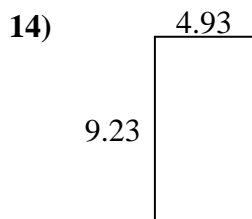
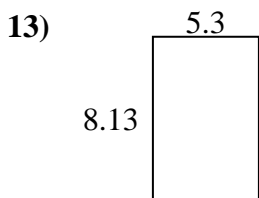
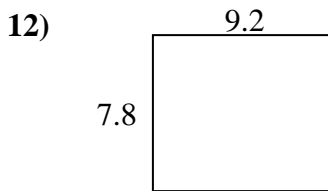
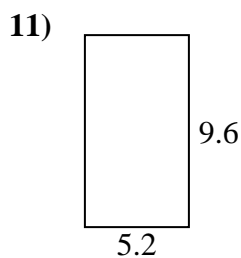
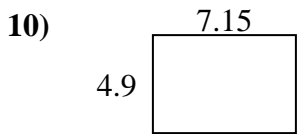
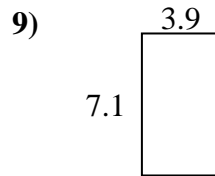
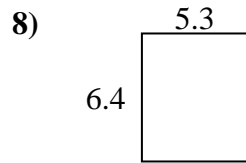
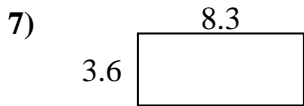
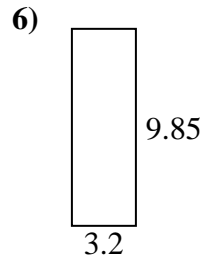
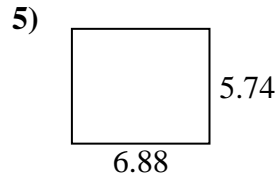
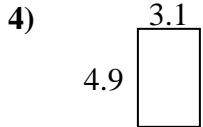
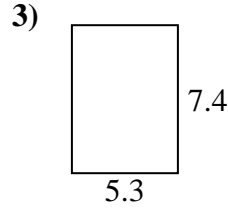
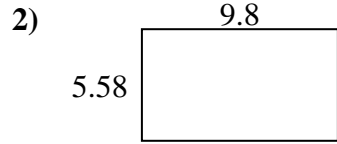
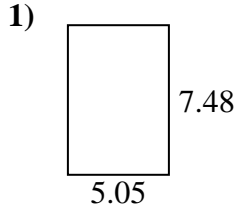
14. \_\_\_\_\_

15. \_\_\_\_\_





Find the perimeter and area of each figure. Each figure is in centimeters (cm). Not to scale.



Answers

1. 25.06 cm    37.774 cm<sup>2</sup>
2. 30.76 cm    54.684 cm<sup>2</sup>
3. 25.4 cm    39.22 cm<sup>2</sup>
4. 16 cm    15.19 cm<sup>2</sup>
5. 25.24 cm    39.4912 cm<sup>2</sup>
6. 26.1 cm    31.52 cm<sup>2</sup>
7. 23.8 cm    29.88 cm<sup>2</sup>
8. 23.4 cm    33.92 cm<sup>2</sup>
9. 22 cm    27.69 cm<sup>2</sup>
10. 24.1 cm    35.035 cm<sup>2</sup>
11. 29.6 cm    49.92 cm<sup>2</sup>
12. 34 cm    71.76 cm<sup>2</sup>
13. 26.86 cm    43.089 cm<sup>2</sup>
14. 28.32 cm    45.5039 cm<sup>2</sup>
15. 22.2 cm    27 cm<sup>2</sup>